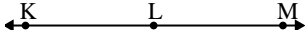




Risolvi ogni problema.

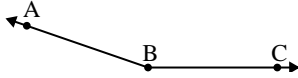
1)



Quale risposta  
corrisponde a  $\angle KLM$ ?

- A.  $180^\circ$
- B.  $128^\circ$
- C.  $56^\circ$
- D.  $35^\circ$

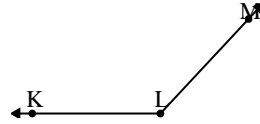
2)



Quale risposta  
corrisponde a  $\angle ABC$ ?

- A.  $56^\circ$
- B.  $120^\circ$
- C.  $161^\circ$
- D.  $4^\circ$

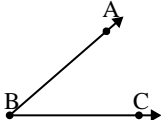
3)



Quale risposta  
corrisponde a  $\angle KLM$ ?

- A.  $133^\circ$
- B.  $2^\circ$
- C.  $167^\circ$
- D.  $73^\circ$

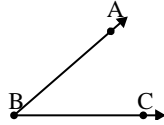
4)



Quale risposta  
corrisponde a  $\angle ABC$ ?

- A.  $179^\circ$
- B.  $98^\circ$
- C.  $134^\circ$
- D.  $41^\circ$

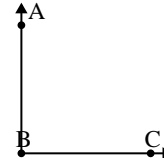
5)



Quale risposta  
corrisponde a  $\angle ABC$ ?

- A.  $124^\circ$
- B.  $12^\circ$
- C.  $41^\circ$
- D.  $81^\circ$

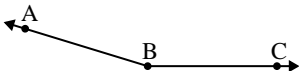
6)



Quale risposta  
corrisponde a  $\angle ABC$ ?

- A.  $17^\circ$
- B.  $146^\circ$
- C.  $90^\circ$
- D.  $64^\circ$

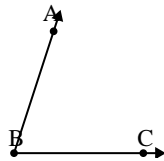
7)



Quale risposta  
corrisponde a  $\angle ABC$ ?

- A.  $131^\circ$
- B.  $78^\circ$
- C.  $163^\circ$
- D.  $102^\circ$

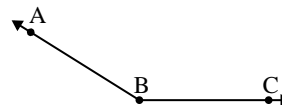
8)



Quale risposta  
corrisponde a  $\angle ABC$ ?

- A.  $72^\circ$
- B.  $177^\circ$
- C.  $108^\circ$
- D.  $134^\circ$

9)



Quale risposta  
corrisponde a  $\angle ABC$ ?

- A.  $148^\circ$
- B.  $125^\circ$
- C.  $14^\circ$
- D.  $71^\circ$

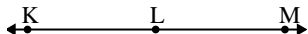
**Risposte**

1. \_\_\_\_\_
2. \_\_\_\_\_
3. \_\_\_\_\_
4. \_\_\_\_\_
5. \_\_\_\_\_
6. \_\_\_\_\_
7. \_\_\_\_\_
8. \_\_\_\_\_
9. \_\_\_\_\_



Risolvi ogni problema.

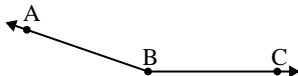
1)



Quale risposta  
corrisponde a  $\angle KLM$ ?

- A.  $180^\circ$
- B.  $128^\circ$
- C.  $56^\circ$
- D.  $35^\circ$

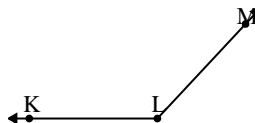
2)



Quale risposta  
corrisponde a  $\angle ABC$ ?

- A.  $56^\circ$
- B.  $120^\circ$
- C.  $161^\circ$
- D.  $4^\circ$

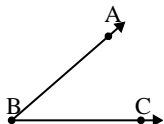
3)



Quale risposta  
corrisponde a  $\angle KLM$ ?

- A.  $133^\circ$
- B.  $2^\circ$
- C.  $167^\circ$
- D.  $73^\circ$

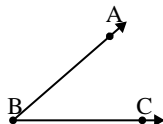
4)



Quale risposta  
corrisponde a  $\angle ABC$ ?

- A.  $179^\circ$
- B.  $98^\circ$
- C.  $134^\circ$
- D.  $41^\circ$

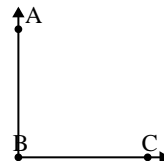
5)



Quale risposta  
corrisponde a  $\angle ABC$ ?

- A.  $124^\circ$
- B.  $12^\circ$
- C.  $41^\circ$
- D.  $81^\circ$

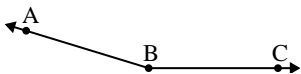
6)



Quale risposta  
corrisponde a  $\angle ABC$ ?

- A.  $17^\circ$
- B.  $146^\circ$
- C.  $90^\circ$
- D.  $64^\circ$

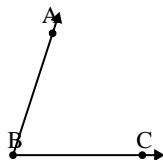
7)



Quale risposta  
corrisponde a  $\angle ABC$ ?

- A.  $131^\circ$
- B.  $78^\circ$
- C.  $163^\circ$
- D.  $102^\circ$

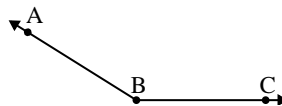
8)



Quale risposta  
corrisponde a  $\angle ABC$ ?

- A.  $72^\circ$
- B.  $177^\circ$
- C.  $108^\circ$
- D.  $134^\circ$

9)



Quale risposta  
corrisponde a  $\angle ABC$ ?

- A.  $148^\circ$
- B.  $125^\circ$
- C.  $14^\circ$
- D.  $71^\circ$

**Risposte**

1. **A**
2. **C**
3. **A**
4. **D**
5. **C**
6. **C**
7. **C**
8. **A**
9. **A**