



Riempi gli spazi per trovare la quantità.

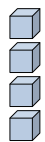
Es)

1)

2)

**Risposte**

Es. 4



0

4

decine

unità



decine

unità



decine

unità

3)

4)

5)

1. \_\_\_\_\_

2. \_\_\_\_\_

3. \_\_\_\_\_

4. \_\_\_\_\_

5. \_\_\_\_\_

6. \_\_\_\_\_

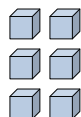
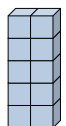
7. \_\_\_\_\_

8. \_\_\_\_\_

9. \_\_\_\_\_

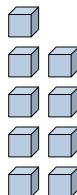
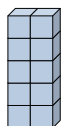
10. \_\_\_\_\_

11. \_\_\_\_\_



decine

unità



decine

unità



decine

unità

6)

7)

8)



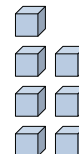
decine

unità



decine

unità



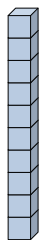
decine

unità

9)

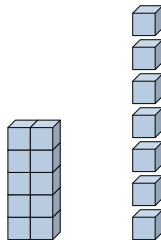
10)

11)



decine

unità



decine

unità



decine

unità

