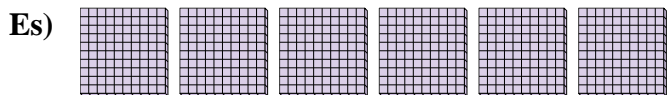





Utilizzare i blocchi per determinare le quantità totali.

Risposte



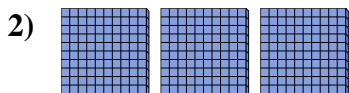
6 centinaia = 60 decine = 600 unità

Es. 6 60 600




_____ centinaia = _____ decine = _____ unità

1. _____




_____ centinaia = _____ decine = _____ unità

2. _____



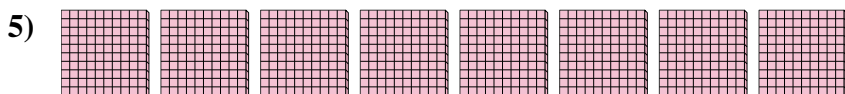
_____ centinaia = _____ decine = _____ unità

3. _____



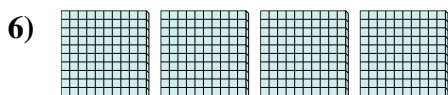
_____ centinaia = _____ decine = _____ unità

4. _____




_____ centinaia = _____ decine = _____ unità

5. _____



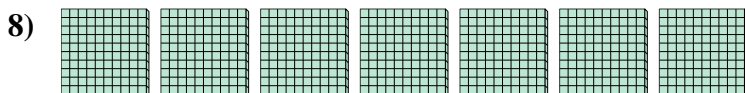
_____ centinaia = _____ decine = _____ unità

6. _____



_____ centinaia = _____ decine = _____ unità

7. _____

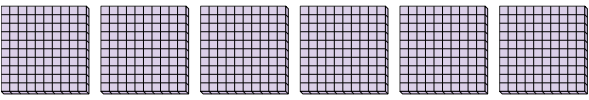



_____ centinaia = _____ decine = _____ unità


8. _____





Utilizzare i blocchi per determinare le quantità totali.

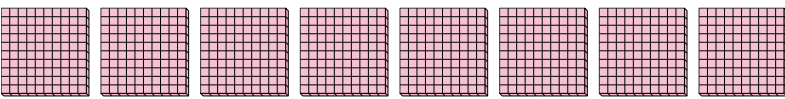
Es) 
6 centinaia = 60 decine = 600 unità

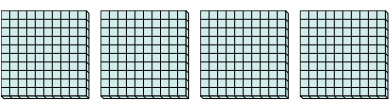
1) 
9 centinaia = 90 decine = 900 unità

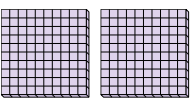
2) 
3 centinaia = 30 decine = 300 unità


3) 
5 centinaia = 50 decine = 500 unità

4) 
1 centinaia = 10 decine = 100 unità

5) 
8 centinaia = 80 decine = 800 unità

6) 
4 centinaia = 40 decine = 400 unità

7) 
2 centinaia = 20 decine = 200 unità

8) 
7 centinaia = 70 decine = 700 unità

Risposte

| | | | |
|-----|----------|-----------|------------|
| Es. | <u>6</u> | <u>60</u> | <u>600</u> |
| 1. | <u>9</u> | <u>90</u> | <u>900</u> |
| 2. | <u>3</u> | <u>30</u> | <u>300</u> |
| 3. | <u>5</u> | <u>50</u> | <u>500</u> |
| 4. | <u>1</u> | <u>10</u> | <u>100</u> |
| 5. | <u>8</u> | <u>80</u> | <u>800</u> |
| 6. | <u>4</u> | <u>40</u> | <u>400</u> |
| 7. | <u>2</u> | <u>20</u> | <u>200</u> |
| 8. | <u>7</u> | <u>70</u> | <u>700</u> |