





Confronta il numero delle forme.


Risposte




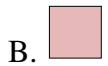
Ci sono più o più ?



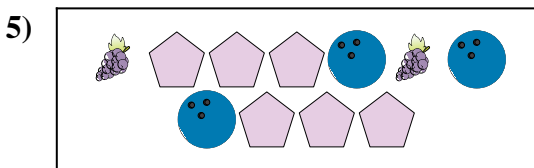
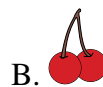
Ci sono più o più ?




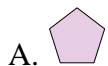
Ci sono meno o meno ?



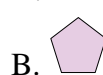
Ci sono meno o meno ?



Ci sono meno o meno ?




Ci sono meno o meno ?



1. _____
2. _____
3. _____
4. _____
5. _____
6. _____




Confronta il numero delle forme.



Ci sono più o più ?

A.


B.



Ci sono più o più ?

A.


B.



Ci sono meno o meno ?

A.

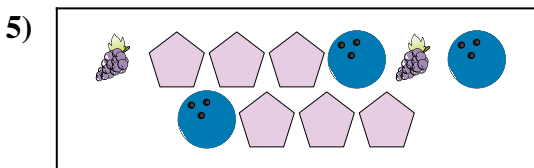
B.



Ci sono meno o meno ?

A.


B.



Ci sono meno o meno ?

A.

B.



Ci sono meno o meno ?

A.

B.

Risposte

1. **B**
2. **B**
3. **A**
4. **A**
5. **B**
6. **B**