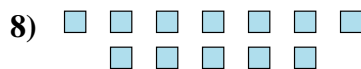
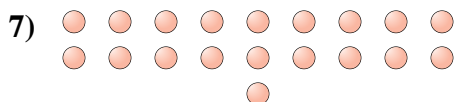
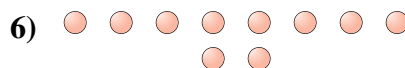

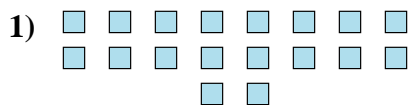
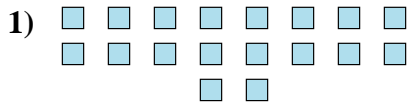


**Determina se il numero delle figure all'interno di ogni rettangolo è pari o dispari.****Risposte**


1. _____
2. _____
3. _____
4. _____
5. _____
6. _____
7. _____
8. _____
9. _____
10. _____



Determina se il numero delle figure all'interno di ogni rettangolo è pari o dispari.



18



20



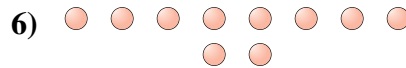
14



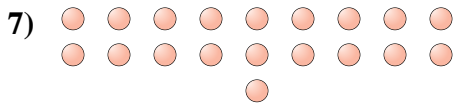
10



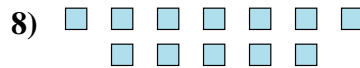
12



10



19



12



7



9

Risposte

1. **Pari**
2. **Pari**
3. **Pari**
4. **Pari**
5. **Pari**
6. **Pari**
7. **Dispari**
8. **Pari**
9. **Dispari**
10. **Dispari**