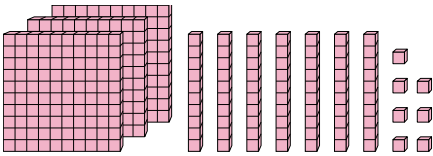




Trova il valore rappresentato da ogni set di blocchi.

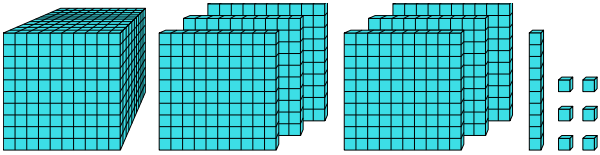
**Risposte**

1)



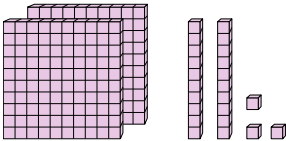
1. \_\_\_\_\_

2)



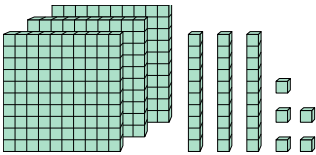
2. \_\_\_\_\_

3)



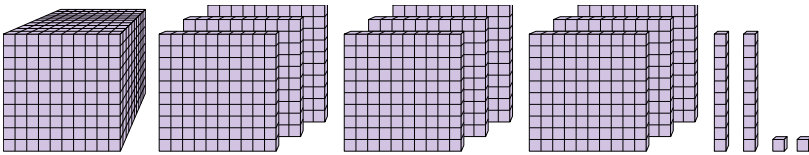
3. \_\_\_\_\_

4)



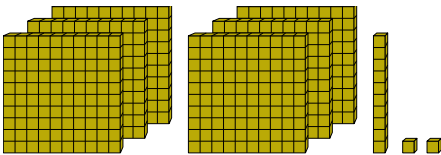
4. \_\_\_\_\_

5)



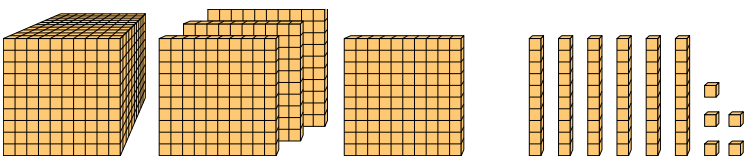
5. \_\_\_\_\_

6)



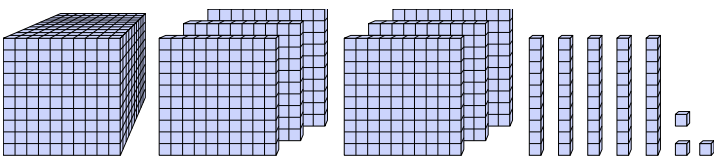
6. \_\_\_\_\_

7)



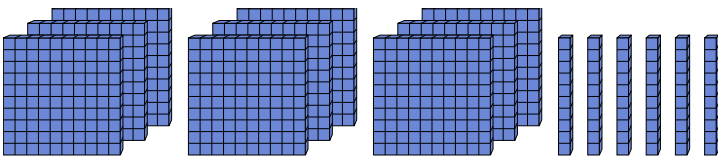
7. \_\_\_\_\_

8)



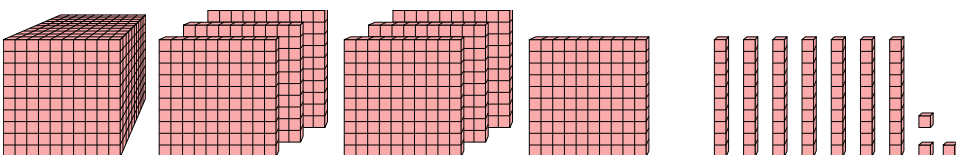
8. \_\_\_\_\_

9)



9. \_\_\_\_\_

10)



10. \_\_\_\_\_



Trova il valore rappresentato da ogni set di blocchi.

1)

2)

3)

4)

5)

6)

7)

8)

9)

10)

**Risposte**

1. 377
2. 1.616
3. 223
4. 335
5. 1.922
6. 612
7. 1.465
8. 1.653
9. 960
10. 1.773