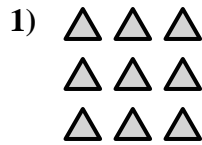





Scrivi un'equazione che esprima il contenuto degli insiemi e trova il numero delle forme.

Risposte

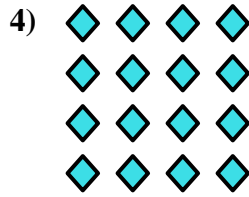



Es. $5 \times 3 = 15$

1. _____

2. _____

3. _____

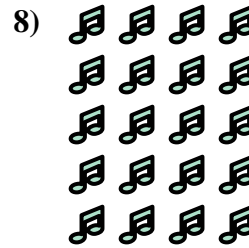


4. _____

5. _____

6. _____


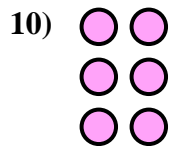

7. _____



8. _____

9. _____

10. _____

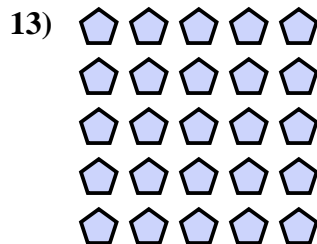



11. _____

12. _____

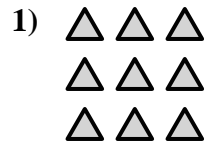

13. _____

14. _____



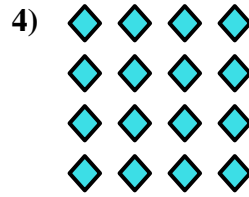



Scrivi un'equazione che esprima il contenuto degli insiemi e trova il numero delle forme.



Risposte

Es. $5 \times 3 = 15$



1. $3 \times 3 = 9$

2. $2 \times 3 = 6$


3. $4 \times 2 = 8$

4. $4 \times 4 = 16$

5. $2 \times 5 = 10$

6. $2 \times 4 = 8$


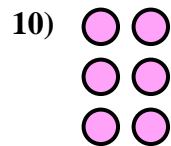

7. $4 \times 3 = 12$



8. $5 \times 4 = 20$

9. $3 \times 4 = 12$

10. $3 \times 2 = 6$



11. $3 \times 5 = 15$

12. $4 \times 5 = 20$

13. $5 \times 5 = 25$

14. $2 \times 2 = 4$

