




Misura la lunghezza e l'altezza di ogni rettangolo in pollici e in centimetri


Es)



1)




2)



3)



4)

**Risposte**Es. 4 0 1/2 10,2 1,3

1. \_\_\_\_\_

2. \_\_\_\_\_

3. \_\_\_\_\_

4. \_\_\_\_\_




Misura la lunghezza e l'altezza di ogni rettangolo in pollici e in centimetri


Es)



1)




2)



3)



4)

**Risposte**Es. 4 0 1/2 10,2 1,31. 1 0 1/2 2,5 1,32. 5 1/2 1 14 2,53. 4 1/2 1 11,4 2,54. 1 1/2 1 1/2 3,8 3,8