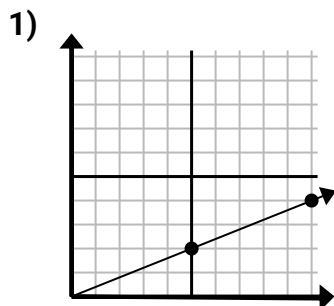


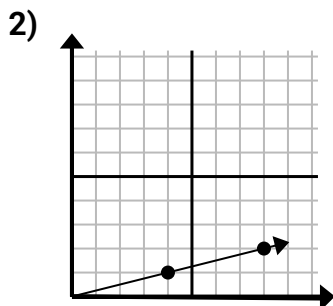


Determina quale scelta rappresenta un punto sulla linea se dovesse continuare.

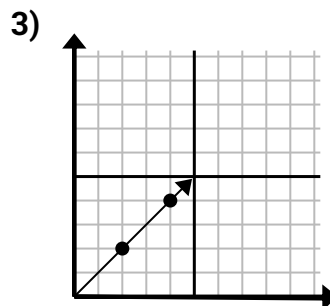
Risposte



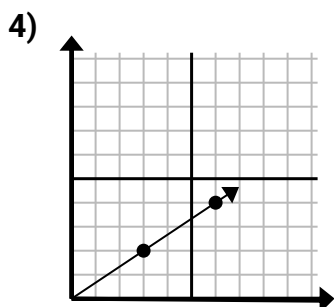
- A. (20 . 8)
- B. (14 . 5)
- C. (15 . 6)
- D. (13 . 4)



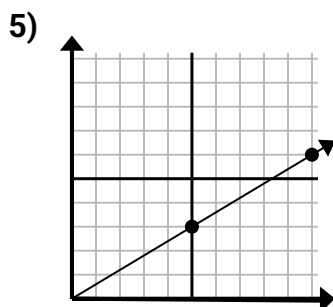
- A. (16 . 4)
- B. (28 . 7)
- C. (9 . 6)
- D. (12 . 3)



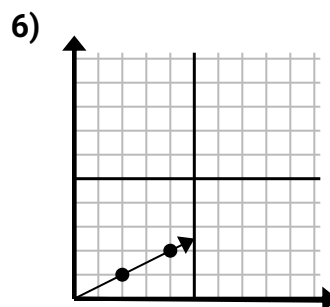
- A. (14 . 14)
- B. (6 . 3)
- C. (6 . 6)
- D. (8 . 8)



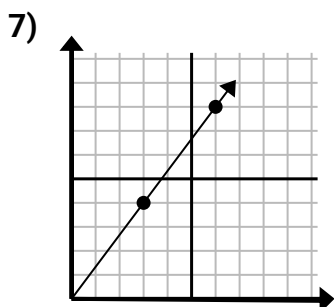
- A. (21 . 14)
- B. (10 . 4)
- C. (9 . 6)
- D. (11 . 7)



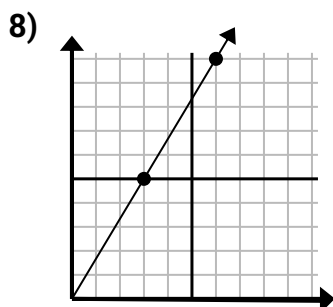
- A. (30 . 18)
- B. (15 . 9)
- C. (14 . 8)
- D. (12 . 8)



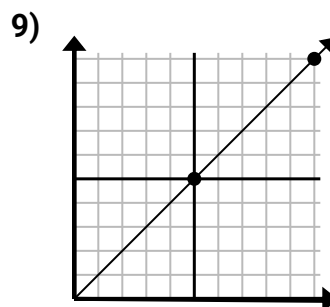
- A. (6 . 3)
- B. (6 . 6)
- C. (14 . 7)
- D. (6 . 4)



- A. (11 . 5)
- B. (12 . 16)
- C. (9 . 6)
- D. (9 . 12)



- A. (15 . 25)
- B. (10 . 6)
- C. (12 . 20)
- D. (9 . 15)



- A. (15 . 7)
- B. (25 . 25)
- C. (15 . 15)
- D. (12 . 6)

1. _____

2. _____

3. _____

4. _____

5. _____

6. _____

7. _____

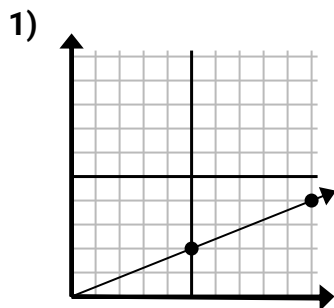
8. _____

9. _____

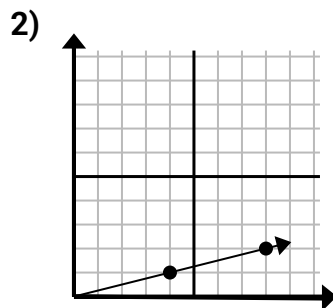


Determina quale scelta rappresenta un punto sulla linea se dovesse continuare.

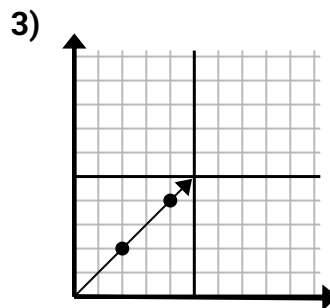
Risposte



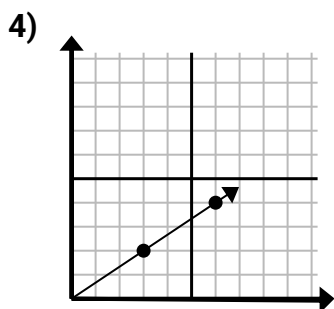
- A. (20 . 8)
- B. (14 . 5)
- C. (15 . 6)
- D. (13 . 4)



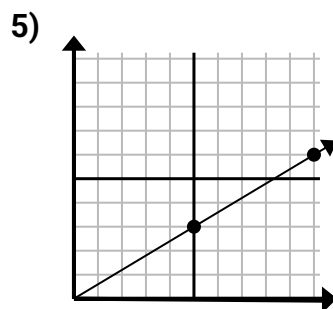
- A. (16 . 4)
- B. (28 . 7)
- C. (9 . 6)
- D. (12 . 3)



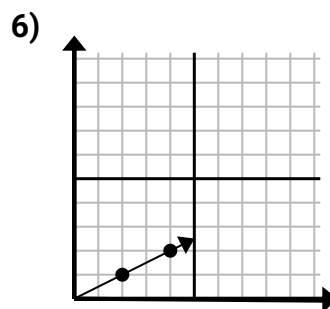
- A. (14 . 14)
- B. (6 . 3)
- C. (6 . 6)
- D. (8 . 8)



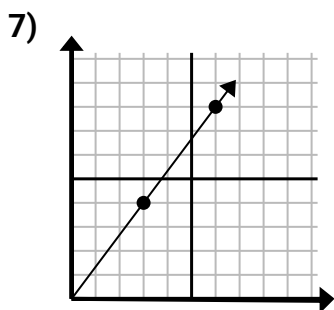
- A. (21 . 14)
- B. (10 . 4)
- C. (9 . 6)
- D. (11 . 7)



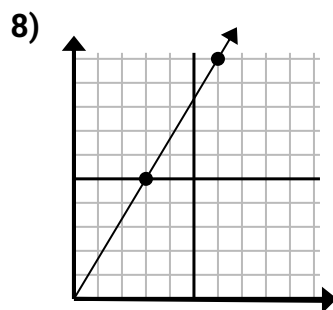
- A. (30 . 18)
- B. (15 . 9)
- C. (14 . 8)
- D. (12 . 8)



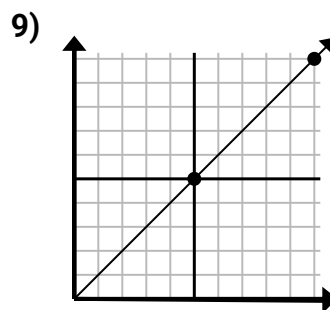
- A. (6 . 3)
- B. (6 . 6)
- C. (14 . 7)
- D. (6 . 4)



- A. (11 . 5)
- B. (12 . 16)
- C. (9 . 6)
- D. (9 . 12)



- A. (15 . 25)
- B. (10 . 6)
- C. (12 . 20)
- D. (9 . 15)



- A. (15 . 7)
- B. (25 . 25)
- C. (15 . 15)
- D. (12 . 6)

- 1. **C**
- 2. **D**
- 3. **C**
- 4. **C**
- 5. **B**
- 6. **A**
- 7. **D**
- 8. **D**
- 9. **C**