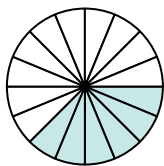




Determina quale lettera rappresenta la frazione equivalente.

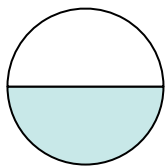
Risposte

1)



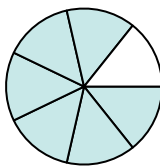
$$\frac{6}{16}$$

2)



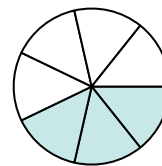
$$\frac{1}{2}$$

3)



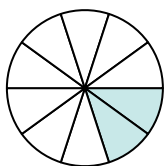
$$\frac{6}{7}$$

4)



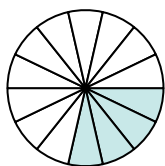
$$\frac{3}{7}$$

5)



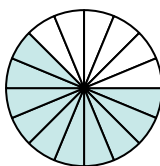
$$\frac{2}{10}$$

6)



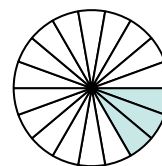
$$\frac{4}{14}$$

7)



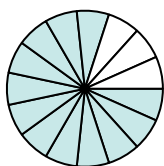
$$\frac{10}{16}$$

8)



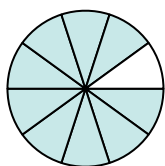
$$\frac{3}{18}$$

9)



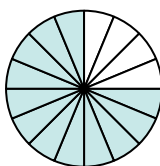
$$\frac{12}{15}$$

10)



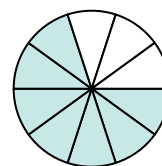
$$\frac{9}{10}$$

11)



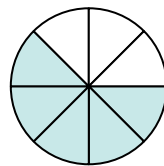
$$\frac{12}{16}$$

12)



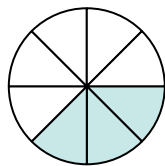
$$\frac{7}{10}$$

A.



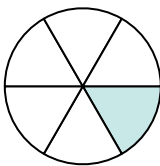
$$\frac{5}{8}$$

B.



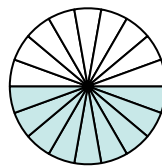
$$\frac{3}{8}$$

C.



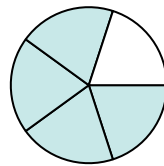
$$\frac{1}{6}$$

D.



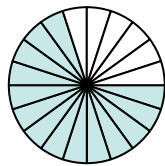
$$\frac{9}{18}$$

E.



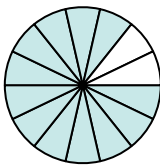
$$\frac{4}{5}$$

F.



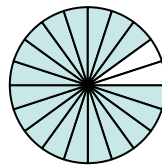
$$\frac{14}{20}$$

G.



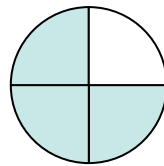
$$\frac{12}{14}$$

H.



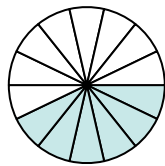
$$\frac{18}{20}$$

I.



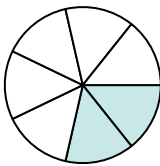
$$\frac{3}{4}$$

J.



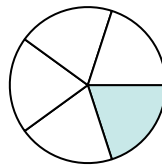
$$\frac{6}{14}$$

K.



$$\frac{2}{7}$$

L.



$$\frac{1}{5}$$

1. _____

2. _____

3. _____

4. _____

5. _____

6. _____

7. _____

8. _____

9. _____

10. _____

11. _____

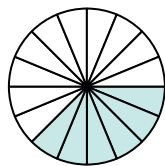
12. _____



Determina quale lettera rappresenta la frazione equivalente.

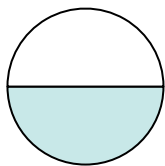
Risposte

1)



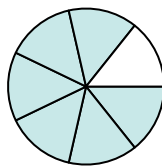
$$\frac{6}{16}$$

2)



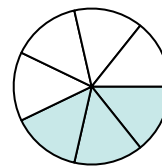
$$\frac{1}{2}$$

3)



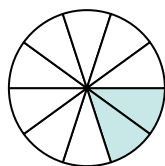
$$\frac{6}{7}$$

4)



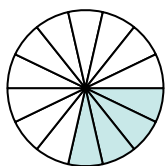
$$\frac{3}{7}$$

5)



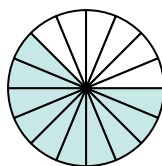
$$\frac{2}{10}$$

6)



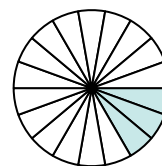
$$\frac{4}{14}$$

7)



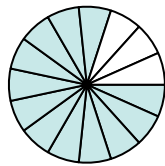
$$\frac{10}{16}$$

8)



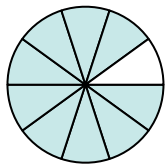
$$\frac{3}{18}$$

9)



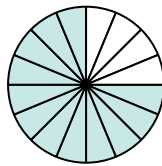
$$\frac{12}{15}$$

10)



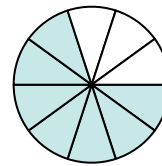
$$\frac{9}{10}$$

11)



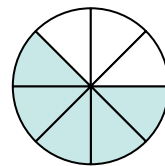
$$\frac{12}{16}$$

12)



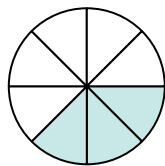
$$\frac{7}{10}$$

A.



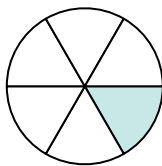
$$\frac{5}{8}$$

B.



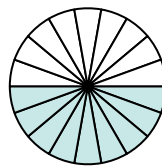
$$\frac{3}{8}$$

C.



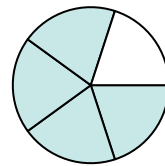
$$\frac{1}{6}$$

D.



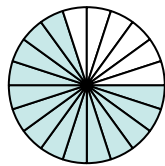
$$\frac{9}{18}$$

E.



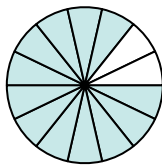
$$\frac{4}{5}$$

F.



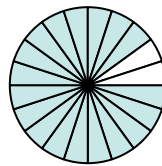
$$\frac{14}{20}$$

G.



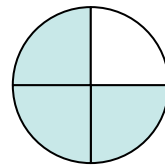
$$\frac{12}{14}$$

H.



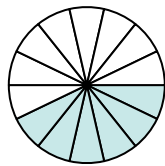
$$\frac{18}{20}$$

I.



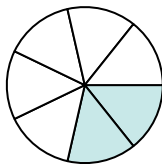
$$\frac{3}{4}$$

J.



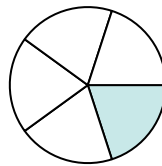
$$\frac{6}{14}$$

K.



$$\frac{2}{7}$$

L.



$$\frac{1}{5}$$

1. **B**2. **D**3. **G**4. **J**5. **L**6. **K**7. **A**8. **C**9. **E**10. **H**11. **I**12. **F**