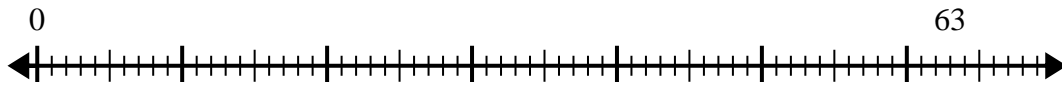


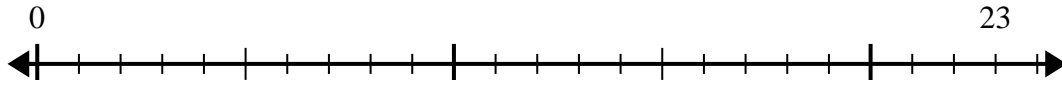


Usa la linea dei numeri per risolvere il problema della divisione.

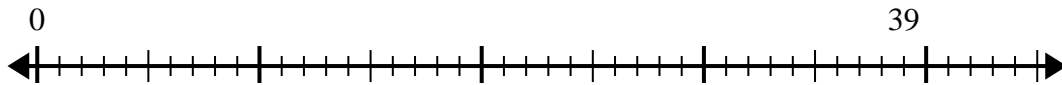
1) $63:8=$



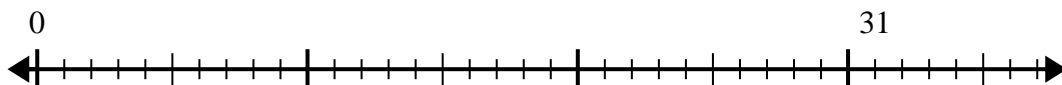
2) $23:7=$



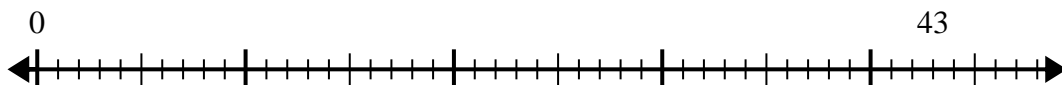
3) $39:7=$



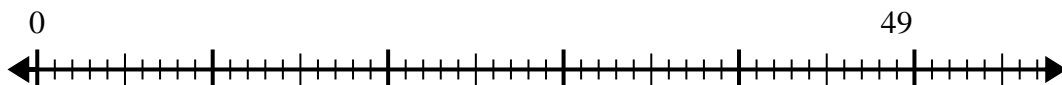
4) $31:7=$



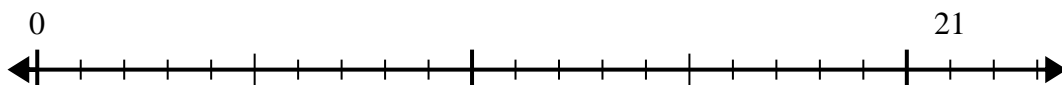
5) $43:7=$



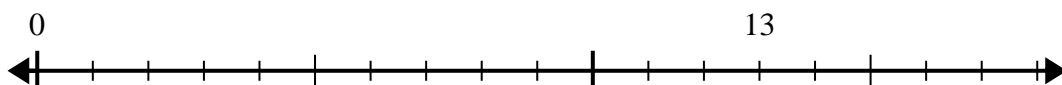
6) $49:8=$



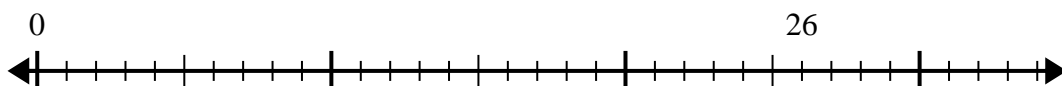
7) $21:4=$



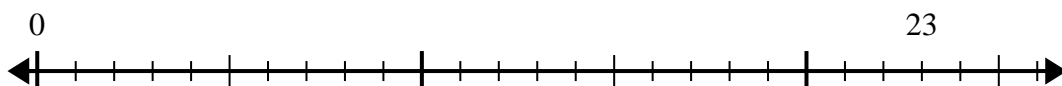
8) $13:4=$



9) $26:6=$



10) $23:5=$



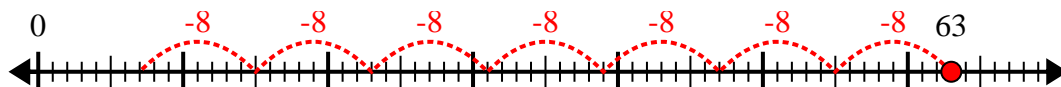
Risposte

- 1. _____
- 2. _____
- 3. _____
- 4. _____
- 5. _____
- 6. _____
- 7. _____
- 8. _____
- 9. _____
- 10. _____

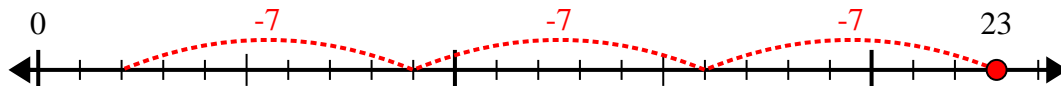


Usa la linea dei numeri per risolvere il problema della divisione.

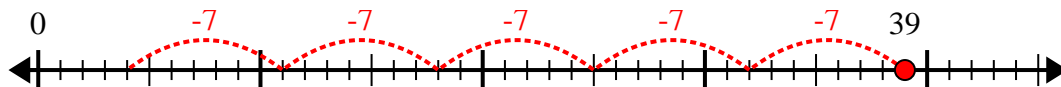
1) $63:8=$



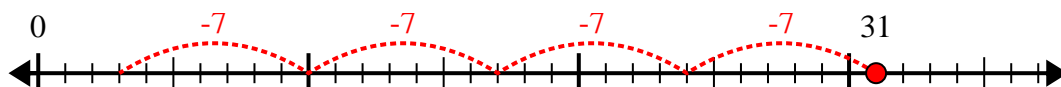
2) $23:7=$



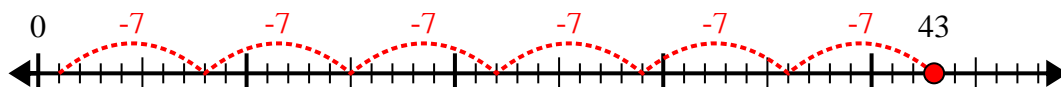
3) $39:7=$



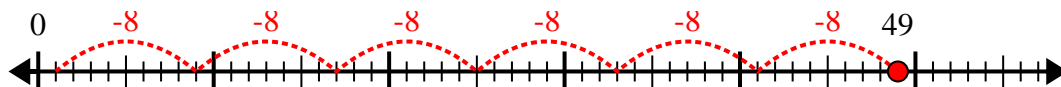
4) $31:7=$



5) $43:7=$



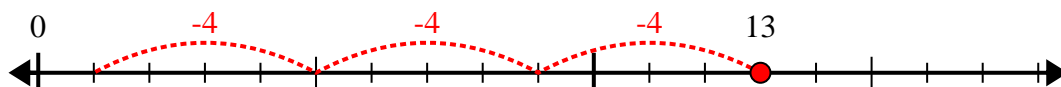
6) $49:8=$



7) $21:4=$



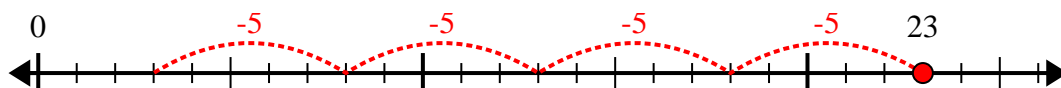
8) $13:4=$



9) $26:6=$



10) $23:5=$



Risposte

1. 7r7

2. 3r2

3. 5r4

4. 4r3

5. 6r1

6. 6r1

7. 5r1

8. 3r1

9. 4r2

10. 4r3