


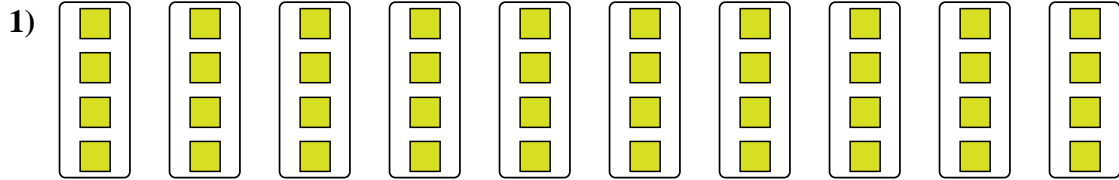


Determina come scriveresti ogni gruppo sotto forma di moltiplicazione.

Risposte



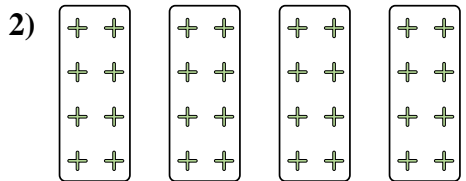
Es. $6 \times 7 = 42$



1. _____


2. _____

3. _____



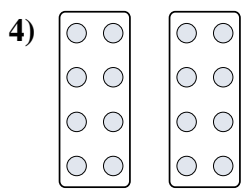
4. _____

5. _____

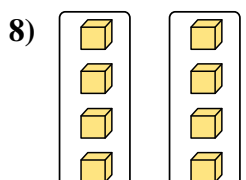

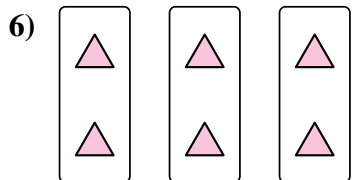
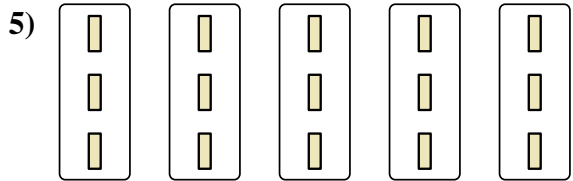


6. _____

7. _____




8. _____



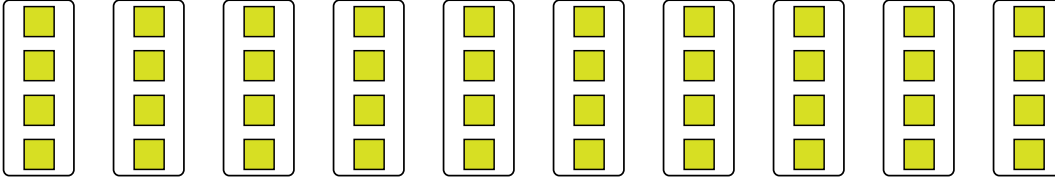


Determina come scriveresti ogni gruppo sotto forma di moltiplicazione.

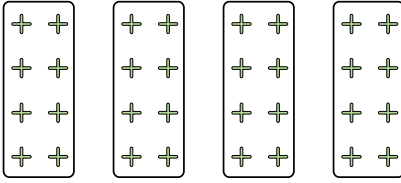
Es)




1)



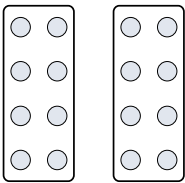
2)



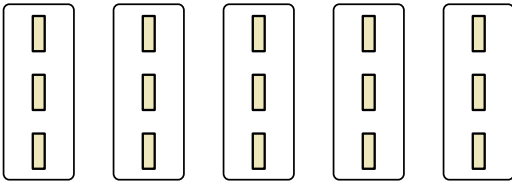
3)



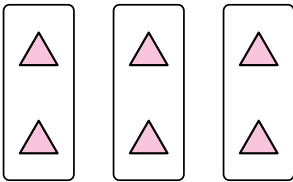
4)




5)



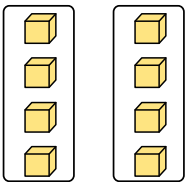
6)



7)



8)



Risposte

Es. $6 \times 7 = 42$

1. $10 \times 4 = 40$

2. $4 \times 8 = 32$

3. $7 \times 3 = 21$

4. $2 \times 8 = 16$

5. $5 \times 3 = 15$

6. $3 \times 2 = 6$

7. $2 \times 6 = 12$

8. $2 \times 4 = 8$