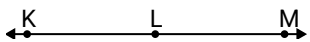




Risolvi ogni problema.

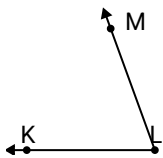
**Risposte**

1)

Quale risposta  
corrisponde a  $\angle KLM$ ?

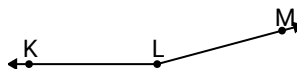
- A.  $31^\circ$
- B.  $82^\circ$
- C.  $139^\circ$
- D.  $180^\circ$

2)

Quale risposta  
corrisponde a  $\angle KLM$ ?

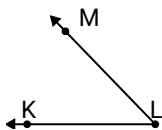
- A.  $42^\circ$
- B.  $70^\circ$
- C.  $143^\circ$
- D.  $173^\circ$

3)

Quale risposta  
corrisponde a  $\angle KLM$ ?

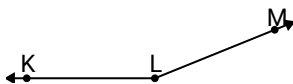
- A.  $55^\circ$
- B.  $106^\circ$
- C.  $30^\circ$
- D.  $165^\circ$

4)

Quale risposta  
corrisponde a  $\angle KLM$ ?

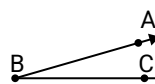
- A.  $8^\circ$
- B.  $46^\circ$
- C.  $146^\circ$
- D.  $78^\circ$

5)

Quale risposta  
corrisponde a  $\angle KLM$ ?

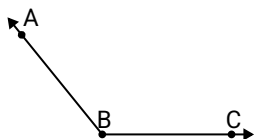
- A.  $115^\circ$
- B.  $83^\circ$
- C.  $11^\circ$
- D.  $158^\circ$

6)

Quale risposta  
corrisponde a  $\angle ABC$ ?

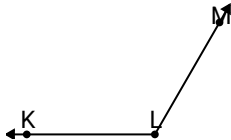
- A.  $52^\circ$
- B.  $93^\circ$
- C.  $177^\circ$
- D.  $16^\circ$

7)

Quale risposta  
corrisponde a  $\angle ABC$ ?

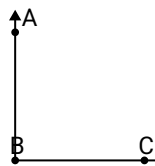
- A.  $129^\circ$
- B.  $83^\circ$
- C.  $1^\circ$
- D.  $34^\circ$

8)

Quale risposta  
corrisponde a  $\angle KLM$ ?

- A.  $58^\circ$
- B.  $175^\circ$
- C.  $120^\circ$
- D.  $22^\circ$

9)

Quale risposta  
corrisponde a  $\angle ABC$ ?

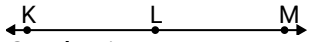
- A.  $43^\circ$
- B.  $172^\circ$
- C.  $13^\circ$
- D.  $90^\circ$

- 1. \_\_\_\_\_
- 2. \_\_\_\_\_
- 3. \_\_\_\_\_
- 4. \_\_\_\_\_
- 5. \_\_\_\_\_
- 6. \_\_\_\_\_
- 7. \_\_\_\_\_
- 8. \_\_\_\_\_
- 9. \_\_\_\_\_



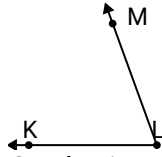
Risolvi ogni problema.

1)

Quale risposta  
corrisponde a  $\angle KLM$ ?

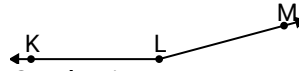
- A.  $31^\circ$
- B.  $82^\circ$
- C.  $139^\circ$
- D.  $180^\circ$

2)

Quale risposta  
corrisponde a  $\angle KLM$ ?

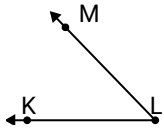
- A.  $42^\circ$
- B.  $70^\circ$
- C.  $143^\circ$
- D.  $173^\circ$

3)

Quale risposta  
corrisponde a  $\angle KLM$ ?

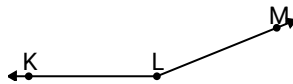
- A.  $55^\circ$
- B.  $106^\circ$
- C.  $30^\circ$
- D.  $165^\circ$

4)

Quale risposta  
corrisponde a  $\angle KLM$ ?

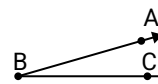
- A.  $8^\circ$
- B.  $46^\circ$
- C.  $146^\circ$
- D.  $78^\circ$

5)

Quale risposta  
corrisponde a  $\angle KLM$ ?

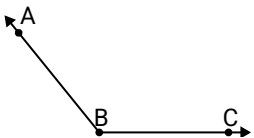
- A.  $115^\circ$
- B.  $83^\circ$
- C.  $11^\circ$
- D.  $158^\circ$

6)

Quale risposta  
corrisponde a  $\angle ABC$ ?

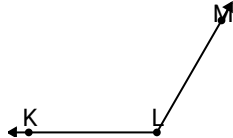
- A.  $52^\circ$
- B.  $93^\circ$
- C.  $177^\circ$
- D.  $16^\circ$

7)

Quale risposta  
corrisponde a  $\angle ABC$ ?

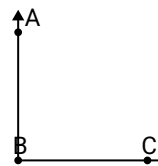
- A.  $129^\circ$
- B.  $83^\circ$
- C.  $1^\circ$
- D.  $34^\circ$

8)

Quale risposta  
corrisponde a  $\angle KLM$ ?

- A.  $58^\circ$
- B.  $175^\circ$
- C.  $120^\circ$
- D.  $22^\circ$

9)

Quale risposta  
corrisponde a  $\angle ABC$ ?

- A.  $43^\circ$
- B.  $172^\circ$
- C.  $13^\circ$
- D.  $90^\circ$

**Risposte**

- 1. **D**
- 2. **B**
- 3. **D**
- 4. **B**
- 5. **D**
- 6. **D**
- 7. **A**
- 8. **C**
- 9. **D**