



Riempi gli spazi per trovare la quantità.


**Risposte**

Es)

1)

2)

Es. 4



0      4  
decine    unità

\_\_\_\_\_  
decine    unità

\_\_\_\_\_  
decine    unità

1. \_\_\_\_\_

2. \_\_\_\_\_

3. \_\_\_\_\_

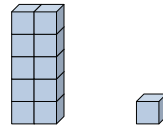
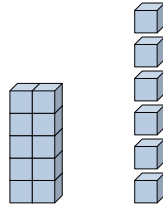
4. \_\_\_\_\_

3)

4)

5)

5. \_\_\_\_\_



\_\_\_\_\_  
decine    unità

\_\_\_\_\_  
decine    unità

\_\_\_\_\_  
decine    unità

6. \_\_\_\_\_

7. \_\_\_\_\_

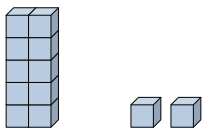
8. \_\_\_\_\_

6)

7)

8)

9. \_\_\_\_\_



\_\_\_\_\_  
decine    unità

\_\_\_\_\_  
decine    unità

\_\_\_\_\_  
decine    unità

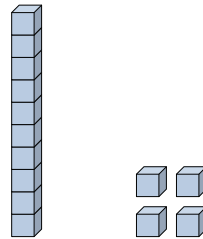
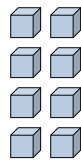
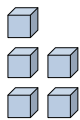
10. \_\_\_\_\_

11. \_\_\_\_\_

9)

10)

11)



\_\_\_\_\_  
decine    unità

\_\_\_\_\_  
decine    unità

\_\_\_\_\_  
decine    unità

