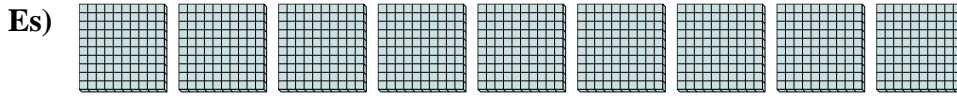





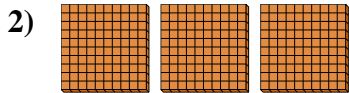
Utilizzare i blocchi per determinare le quantità totali.




9 centinaia = 90 decine = 900 unità



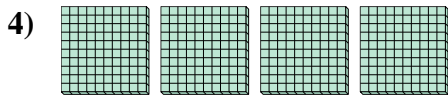
\_\_\_\_\_ centinaia = \_\_\_\_\_ decine = \_\_\_\_\_ unità



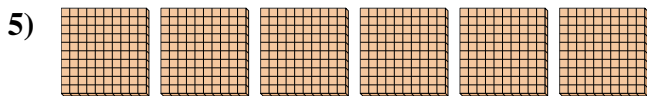
\_\_\_\_\_ centinaia = \_\_\_\_\_ decine = \_\_\_\_\_ unità




\_\_\_\_\_ centinaia = \_\_\_\_\_ decine = \_\_\_\_\_ unità



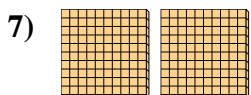
\_\_\_\_\_ centinaia = \_\_\_\_\_ decine = \_\_\_\_\_ unità



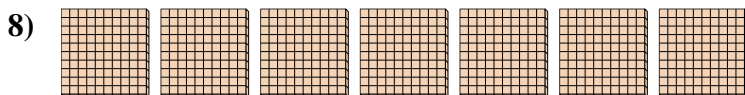
\_\_\_\_\_ centinaia = \_\_\_\_\_ decine = \_\_\_\_\_ unità



\_\_\_\_\_ centinaia = \_\_\_\_\_ decine = \_\_\_\_\_ unità



\_\_\_\_\_ centinaia = \_\_\_\_\_ decine = \_\_\_\_\_ unità



\_\_\_\_\_ centinaia = \_\_\_\_\_ decine = \_\_\_\_\_ unità

**Risposte**

Es. 9      90      900

1. \_\_\_\_\_

2. \_\_\_\_\_

3. \_\_\_\_\_

4. \_\_\_\_\_

5. \_\_\_\_\_

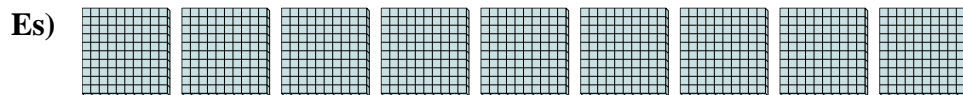
6. \_\_\_\_\_

7. \_\_\_\_\_


8. \_\_\_\_\_



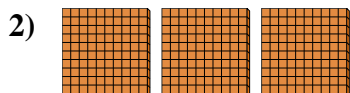
Utilizzare i blocchi per determinare le quantità totali.




9 centinaia = 90 decine = 900 unità



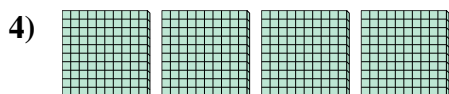
5 centinaia = 50 decine = 500 unità



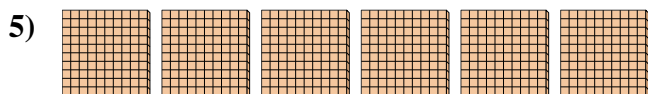
3 centinaia = 30 decine = 300 unità




1 centinaia = 10 decine = 100 unità



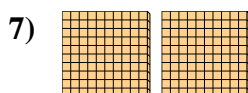
4 centinaia = 40 decine = 400 unità



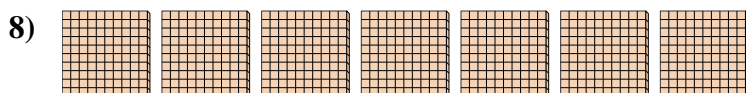
6 centinaia = 60 decine = 600 unità



8 centinaia = 80 decine = 800 unità



2 centinaia = 20 decine = 200 unità



7 centinaia = 70 decine = 700 unità

**Risposte**

Es. 9    90    900

1. 5    50    500

2. 3    30    300

3. 1    10    100

4. 4    40    400

5. 6    60    600

6. 8    80    800

7. 2    20    200

8. 7    70    700