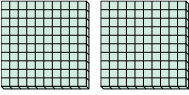








Utilizzare i blocchi per determinare le quantità totali.


Es) 
 _____ centinaia = _____ decine = _____ unità


1) 
 _____ centinaia = _____ decine = _____ unità


2) 
 _____ centinaia = _____ decine = _____ unità

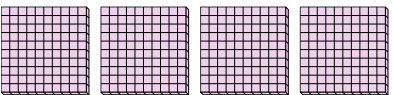
3) 
 _____ centinaia = _____ decine = _____ unità

4) 
 _____ centinaia = _____ decine = _____ unità

5) 
 _____ centinaia = _____ decine = _____ unità

6) 
 _____ centinaia = _____ decine = _____ unità

7) 
 _____ centinaia = _____ decine = _____ unità

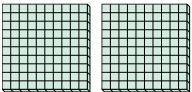
8) 
 _____ centinaia = _____ decine = _____ unità


Risposte

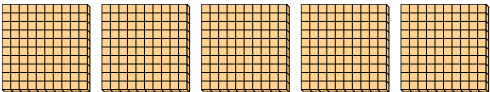
Es.	<u>2</u>	<u>20</u>	<u>200</u>
1.	_____	_____	_____
2.	_____	_____	_____
3.	_____	_____	_____
4.	_____	_____	_____
5.	_____	_____	_____
6.	_____	_____	_____
7.	_____	_____	_____
8.	_____	_____	_____





Utilizzare i blocchi per determinare le quantità totali.


Es) 
2 centinaia = 20 decine = 200 unità

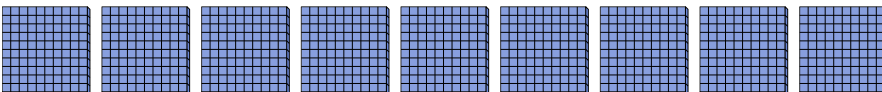
1) 
3 centinaia = 30 decine = 300 unità


2) 
5 centinaia = 50 decine = 500 unità

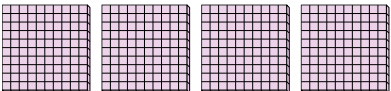
3) 
7 centinaia = 70 decine = 700 unità

4) 
8 centinaia = 80 decine = 800 unità

5) 
6 centinaia = 60 decine = 600 unità

6) 
9 centinaia = 90 decine = 900 unità

7) 
1 centinaia = 10 decine = 100 unità

8) 
4 centinaia = 40 decine = 400 unità

Risposte

Es.	<u>2</u>	<u>20</u>	<u>200</u>
1.	<u>3</u>	<u>30</u>	<u>300</u>
2.	<u>5</u>	<u>50</u>	<u>500</u>
3.	<u>7</u>	<u>70</u>	<u>700</u>
4.	<u>8</u>	<u>80</u>	<u>800</u>
5.	<u>6</u>	<u>60</u>	<u>600</u>
6.	<u>9</u>	<u>90</u>	<u>900</u>
7.	<u>1</u>	<u>10</u>	<u>100</u>
8.	<u>4</u>	<u>40</u>	<u>400</u>