




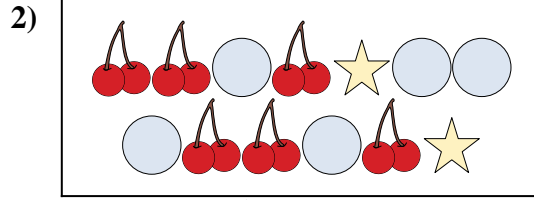
Confronta il numero delle forme.

Risposte



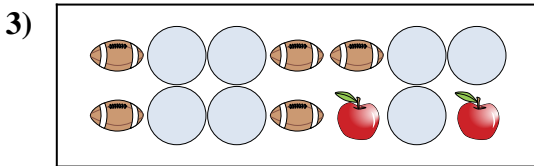
Ci sono più o più ?

- A.
- B.



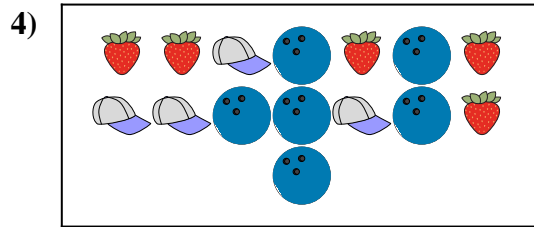
Ci sono più o più ?

- A.
- B.




Ci sono più o più ?

- A.
- B.




Ci sono più o più ?

- A.
- B.



Ci sono meno o meno ?

- A.
- B.



Ci sono meno o meno ?

- A.
- B.

1. _____

2. _____

3. _____

4. _____


5. _____

6. _____



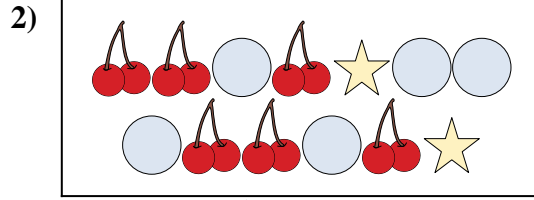
Confronta il numero delle forme.

Risposte



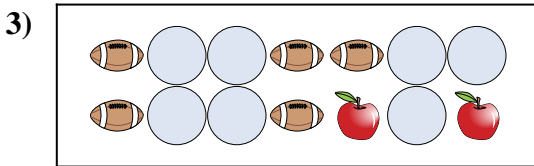
Ci sono più o più ?

- A.
- B.



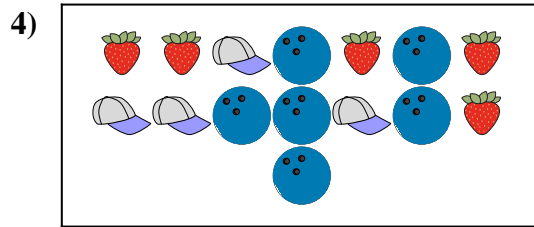
Ci sono più o più ?

- A.
- B.




Ci sono più o più ?

- A.
- B.




Ci sono più o più ?

- A.
- B.



Ci sono meno o meno ?

- A.
- B.



Ci sono meno o meno ?


- A.
- B.

- 1. **B**
- 2. **A**
- 3. **A**
- 4. **B**
- 5. **B**
- 6. **B**



Confronta il numero delle forme.


Risposte



Ci sono più o più ?

A.


B.



Ci sono più o più ?

A.


B.



Ci sono meno o meno ?

A.

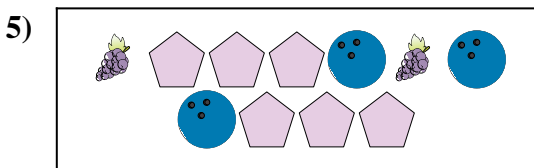
B.



Ci sono meno o meno ?

A.


B.



Ci sono meno o meno ?

A.

B.



Ci sono meno o meno ?


A.

B.


1. _____
2. _____
3. _____
4. _____
5. _____
6. _____




Confronta il numero delle forme.




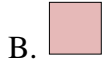
Ci sono più o più ?



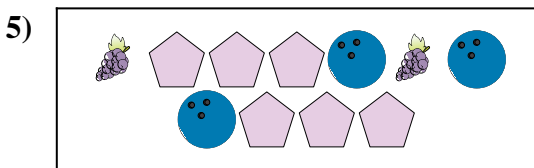
Ci sono più o più ?




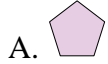
Ci sono meno o meno ?



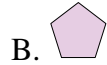
Ci sono meno o meno ?



Ci sono meno o meno ?



Ci sono meno o meno ?



Risposte

1. **B**

2. **B**

3. **A**

4. **A**


5. **B**

6. **B**




Confronta il numero delle forme.

Risposte



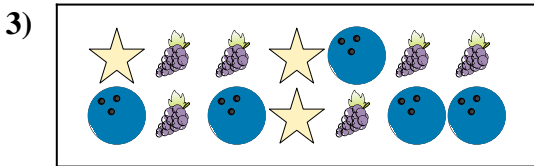
Ci sono più o più ?

- A.
- B.




Ci sono meno o meno ?

- A.
- B.




Ci sono meno o meno ?

- A.
- B.



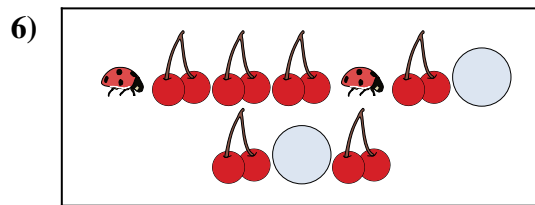
Ci sono meno o meno ?

- A.
- B.



Ci sono più o più ?

- A.
- B.



Ci sono meno o meno ?

- A.
- B.

1. _____

2. _____

3. _____


4. _____

5. _____

6. _____




Confronta il numero delle forme.



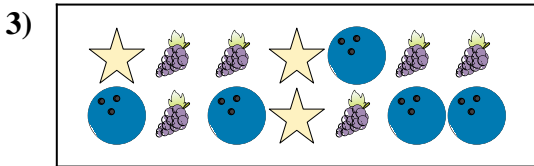
Ci sono più o più ?

- A.
- B.




Ci sono meno o meno ?

- A.
- B.




Ci sono meno o meno ?

- A.
- B.



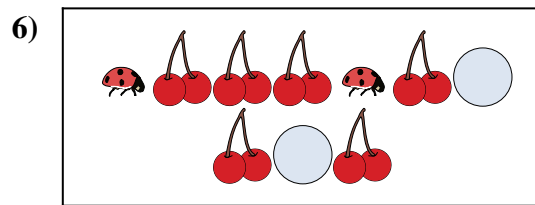
Ci sono meno o meno ?

- A.
- B.



Ci sono più o più ?

- A.
- B.



Ci sono meno o meno ?

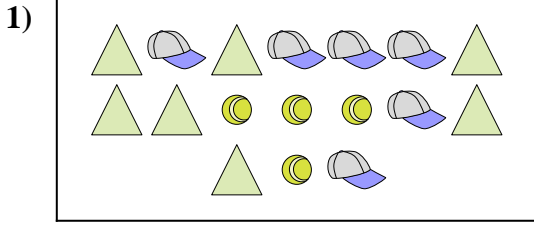
- A.
- B.

Risposte

- 1. **B**
- 2. **B**
- 3. **B**
- 4. **B**
- 5. **A**
- 6. **B**




Confronta il numero delle forme.




Ci sono più o più ?

- A.
- B.



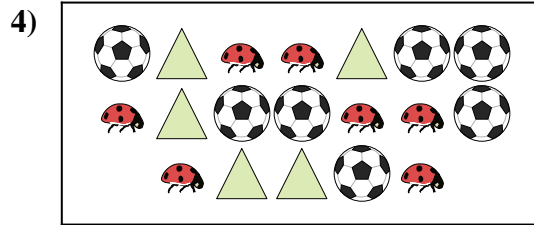
Ci sono meno o meno ?

- A.
- B.




Ci sono meno o meno ?

- A.
- B.




Ci sono meno o meno ?

- A.
- B.



Ci sono meno o meno ?

- A.
- B.



Ci sono meno o meno ?

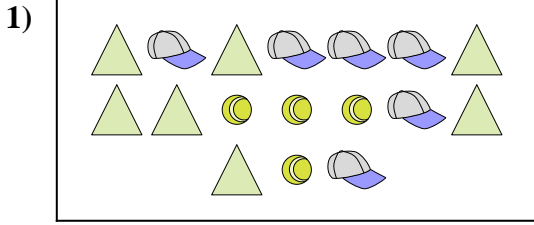
- A.
- B.

Risposte

- 1. _____
- 2. _____
- 3. _____
- 4. _____
- 5. _____
- 6. _____




Confronta il numero delle forme.




Ci sono più o più ?

- A.
- B.



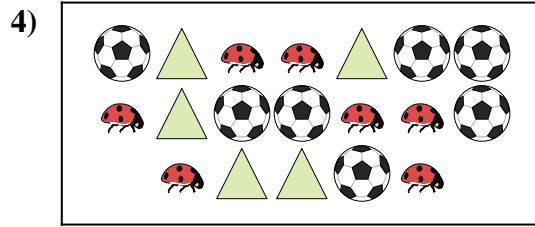
Ci sono meno o meno ?

- A.
- B.




Ci sono meno o meno ?

- A.
- B.




Ci sono meno o meno ?

- A.
- B.



Ci sono meno o meno ?

- A.
- B.



Ci sono meno o meno ?

- A.
- B.


Risposte

- 1. **A**
- 2. **A**
- 3. **A**
- 4. **A**
- 5. **A**
- 6. **A**



Confronta il numero delle forme.


Risposte



Ci sono più o più ?

A.


B.



Ci sono più o più ?

A.


B.



Ci sono meno o meno ?

A.


B.



Ci sono più o più ?

A.

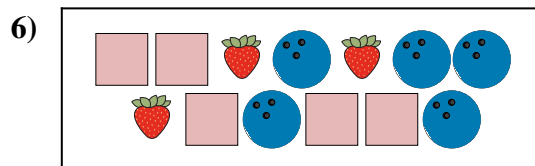
B.



Ci sono meno o meno ?

A.

B.



Ci sono più o più ?


A.

B.

1. _____
2. _____
3. _____
4. _____
5. _____
6. _____




Confronta il numero delle forme.



Ci sono più o più ?

A.


B.



Ci sono più o più ?

A.


B.



Ci sono meno o meno ?

A.


B.



Ci sono più o più ?

A.

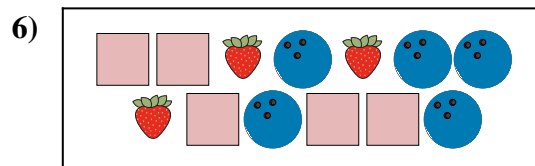
B.



Ci sono meno o meno ?

A.

B.



Ci sono più o più ?

A.

B.

Risposte

1. **A**

2. **B**

3. **B**


4. **B**

5. **A**

6. **B**

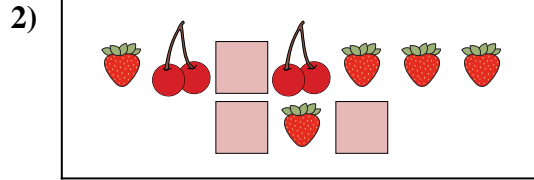


Confronta il numero delle forme.




Ci sono meno o meno ?

- A.
- B.



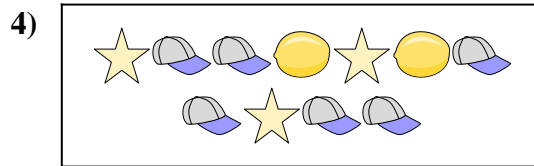
Ci sono più o più ?

- A.
- B.




Ci sono più o più ?

- A.
- B.




Ci sono più o più ?

- A.
- B.



Ci sono meno o meno ?

- A.
- B.



Ci sono meno o meno ?


- A.
- B.

Risposte

- 1. _____
- 2. _____
- 3. _____
- 4. _____
- 5. _____
- 6. _____

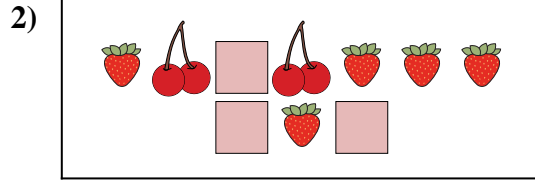


Confronta il numero delle forme.




Ci sono meno o meno ?

- A.
- B.



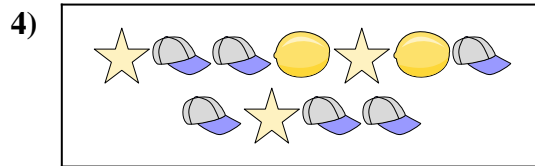
Ci sono più o più ?

- A.
- B.




Ci sono più o più ?

- A.
- B.




Ci sono più o più ?

- A.
- B.



Ci sono meno o meno ?

- A.
- B.



Ci sono meno o meno ?

- A.
- B.

Risposte

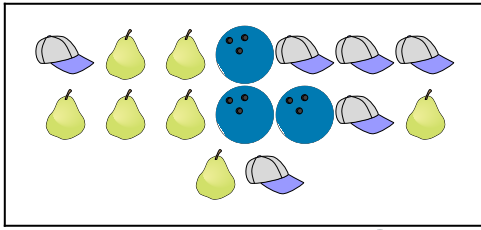
- 1. **A**
- 2. **A**
- 3. **A**
- 4. **B**
- 5. **B**
- 6. **A**





Confronta il numero delle forme.

Risposte


1)





Ci sono meno  o meno  ?

- A. 
- B. 

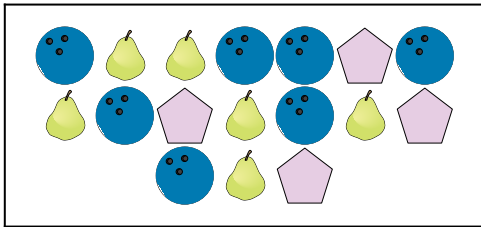
2)





Ci sono meno  o meno  ?

- A. 
- B. 

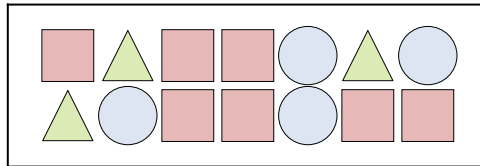
3)





Ci sono più  o più  ?

- A. 
- B. 


4)





Ci sono più  o più  ?

- A. 
- B. 


5)





Ci sono più  o più  ?

- A. 
- B. 

6)



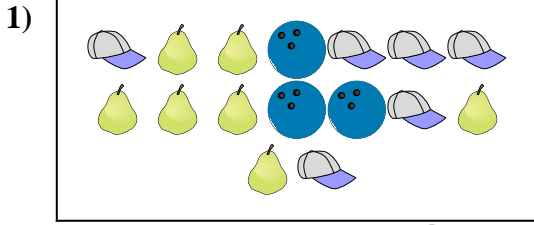
Ci sono meno  o meno  ?

- A. 
- B. 

- 1. _____
- 2. _____
- 3. _____
- 4. _____
- 5. _____
- 6. _____




Confronta il numero delle forme.



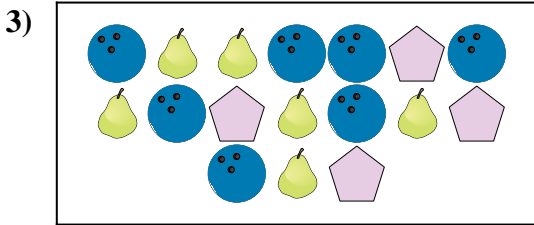
Ci sono meno o meno ?

- A.
- B.



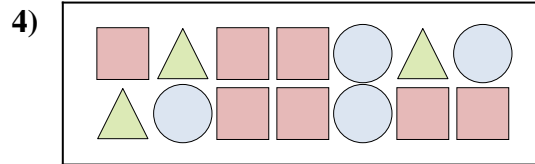
Ci sono meno o meno ?

- A.
- B.




Ci sono più o più ?

- A.
- B.




Ci sono più o più ?

- A.
- B.



Ci sono più o più ?

- A.
- B.



Ci sono meno o meno ?

- A.
- B.

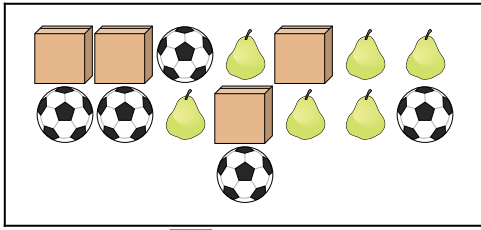
Risposte

- 1. **B**
- 2. **A**
- 3. **A**
- 4. **A**
- 5. **A**
- 6. **A**



Confronta il numero delle forme.

1)

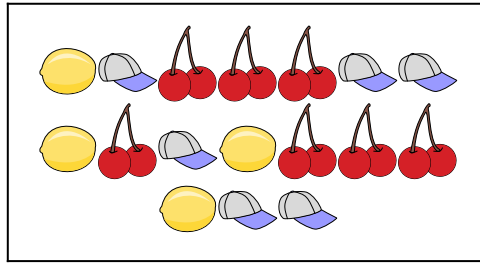


Ci sono più  o più ?

A. 


B. 

2)

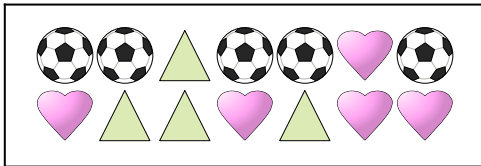




Ci sono meno  o meno ?


A. 

B. 

3)

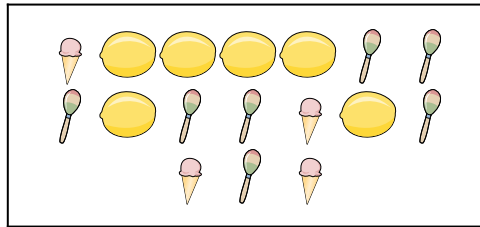


Ci sono meno  o meno ?

A. 

B. 

4)




Ci sono meno  o meno ?

A. 

B. 

5)




Ci sono più  o più ?

A. 

B. 

6)



Ci sono più  o più ?

A. 

B. 

Risposte

1. _____

2. _____

3. _____

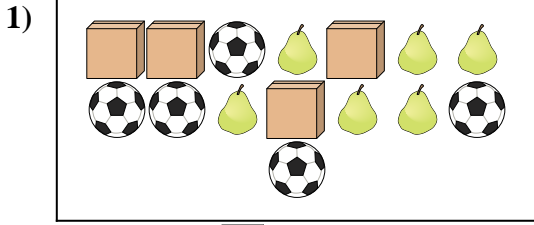
4. _____

5. _____

6. _____

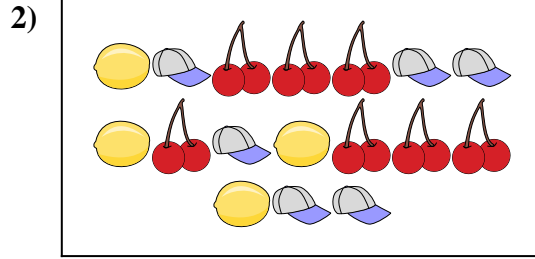


Confronta il numero delle forme.



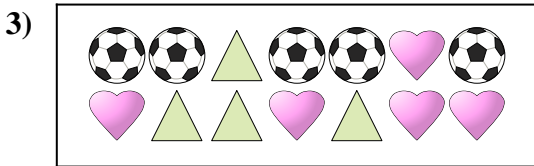
Ci sono più o più ?

- A.
- B.




Ci sono meno o meno ?

- A.
- B.




Ci sono meno o meno ?

- A.
- B.




Ci sono meno o meno ?

- A.
- B.



Ci sono più o più ?

- A.
- B.



Ci sono più o più ?

- A.
- B.


Risposte

- 1. **B**
- 2. **A**
- 3. **A**
- 4. **A**
- 5. **B**
- 6. **B**





Confronta il numero delle forme.


1)





Ci sono più  o più  ?

- A. 
- B. 

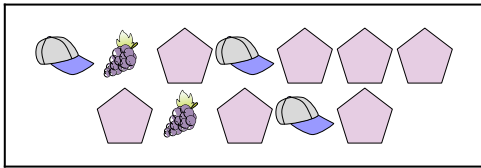
2)





Ci sono meno  o meno  ?

- A. 
- B. 

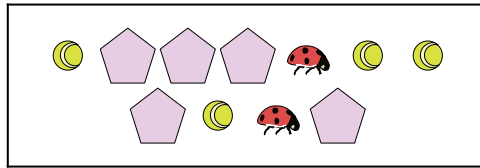
3)





Ci sono meno  o meno  ?

- A. 
- B. 

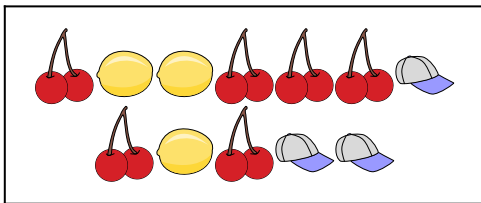
4)





Ci sono più  o più  ?

- A. 
- B. 


5)





Ci sono meno  o meno  ?

- A. 
- B. 

6)



Ci sono più  o più  ?


- A. 
- B. 

Risposte

- 1. _____
- 2. _____
- 3. _____
- 4. _____
- 5. _____
- 6. _____




Confronta il numero delle forme.



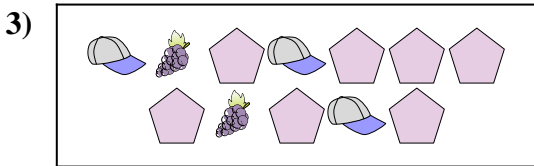
Ci sono più o più ?

- A.
- B.



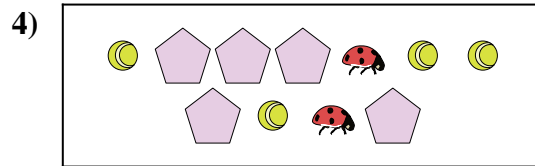
Ci sono meno o meno ?

- A.
- B.



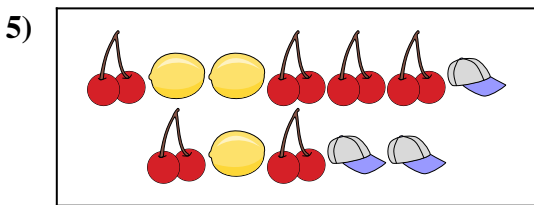
Ci sono meno o meno ?

- A.
- B.



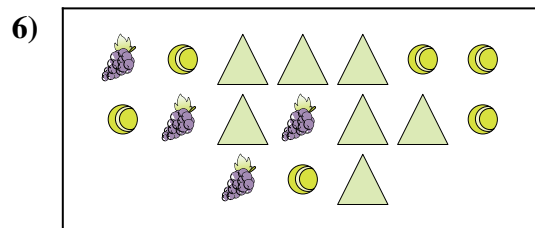
Ci sono più o più ?

- A.
- B.



Ci sono meno o meno ?

- A.
- B.



Ci sono più o più ?

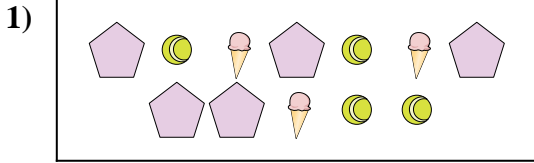
- A.
- B.

Risposte

- 1. **A**
- 2. **A**
- 3. **B**
- 4. **B**
- 5. **B**
- 6. **B**




Confronta il numero delle forme.



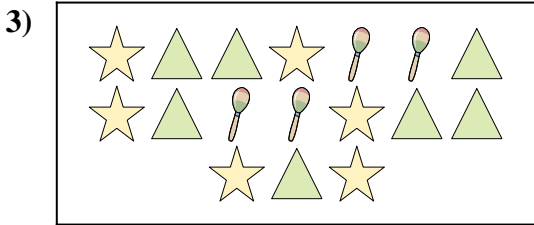
Ci sono meno o meno ?

- A.
- B.




Ci sono più o più ?

- A.
- B.




Ci sono meno o meno ?

- A.
- B.



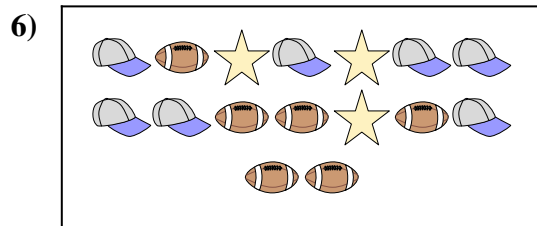
Ci sono meno o meno ?

- A.
- B.



Ci sono meno o meno ?

- A.
- B.



Ci sono meno o meno ?

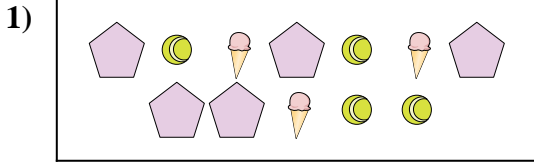
- A.
- B.

Risposte

- 1. _____
- 2. _____
- 3. _____
- 4. _____
- 5. _____
- 6. _____




Confronta il numero delle forme.



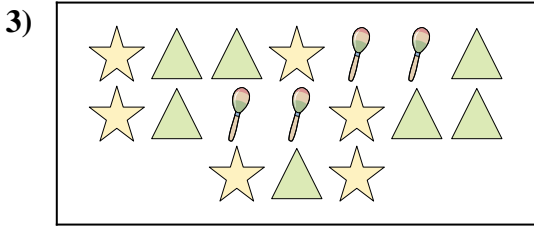
Ci sono meno o meno ?

- A.
- B.




Ci sono più o più ?

- A.
- B.




Ci sono meno o meno ?

- A.
- B.



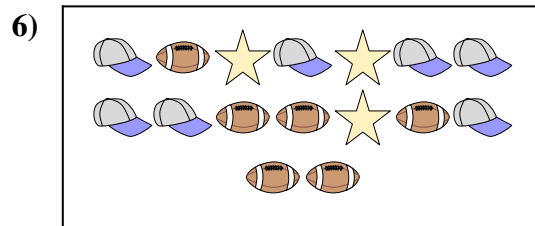
Ci sono meno o meno ?

- A.
- B.



Ci sono meno o meno ?

- A.
- B.



Ci sono meno o meno ?

- A.
- B.

Risposte

- 1. **A**
- 2. **A**
- 3. **B**
- 4. **B**
- 5. **A**
- 6. **B**