





Confronta il numero delle forme.

Risposte



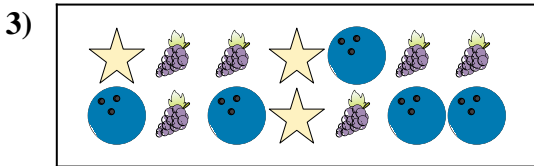
Ci sono più o più ?

- A.
- B.




Ci sono meno o meno ?

- A.
- B.




Ci sono meno o meno ?

- A.
- B.



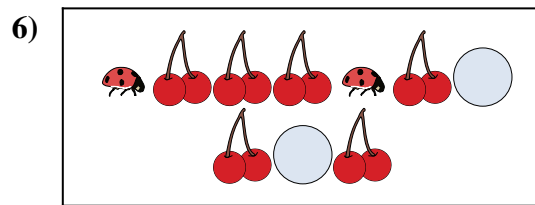
Ci sono meno o meno ?

- A.
- B.



Ci sono più o più ?

- A.
- B.



Ci sono meno o meno ?

- A.
- B.

1. _____

2. _____

3. _____

4. _____


5. _____

6. _____




Confronta il numero delle forme.

Risposte



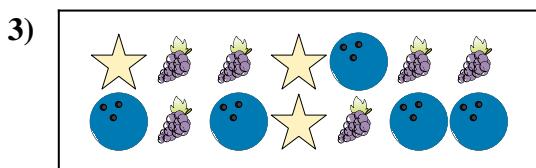
Ci sono più o più ?

- A.
- B.




Ci sono meno o meno ?

- A.
- B.




Ci sono meno o meno ?

- A.
- B.



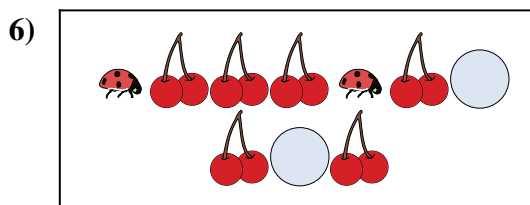
Ci sono meno o meno ?

- A.
- B.



Ci sono più o più ?

- A.
- B.



Ci sono meno o meno ?

- A.
- B.

- 1. **B**
- 2. **B**
- 3. **B**
- 4. **B**
- 5. **A**
- 6. **B**