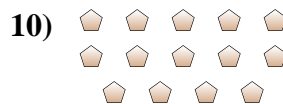
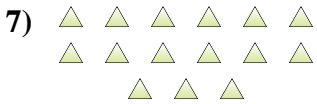
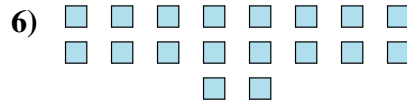
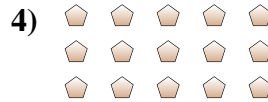

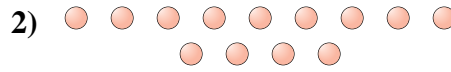




Determina se il numero delle figure all'interno di ogni rettangolo è pari o dispari.



Risposte

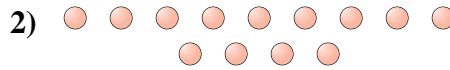
1. _____
2. _____
3. _____
4. _____
5. _____
6. _____
7. _____
8. _____
9. _____
10. _____




Determina se il numero delle figure all'interno di ogni rettangolo è pari o dispari.



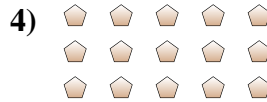
9



13



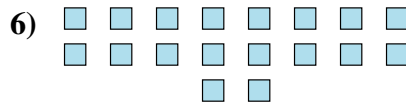
19



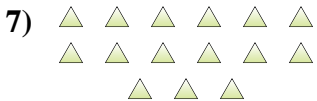
15



17



18



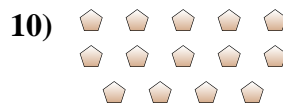
15



5



10



14

Risposte

1. **Dispari**

2. **Dispari**

3. **Dispari**

4. **Dispari**

5. **Dispari**

6. **Pari**

7. **Dispari**

8. **Dispari**

9. **Pari**

10. **Pari**