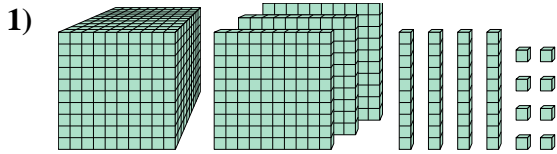


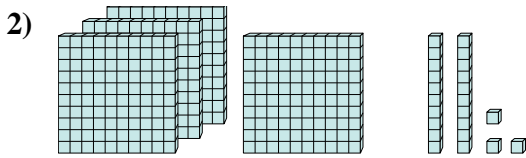


Trova il valore rappresentato da ogni set di blocchi.

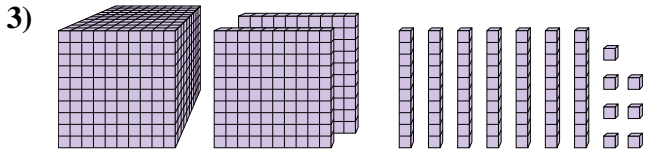
Risposte



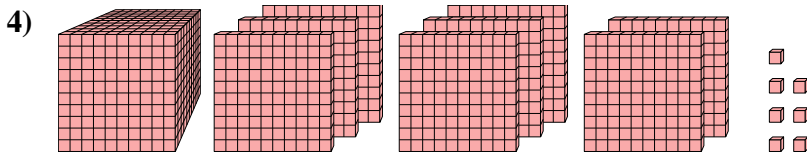
1. _____



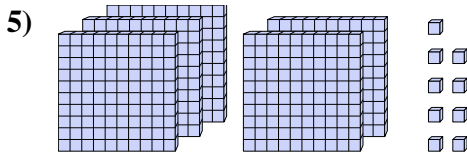
2. _____



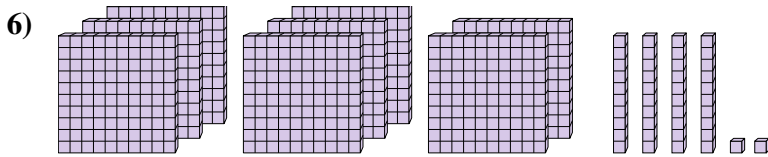
3. _____



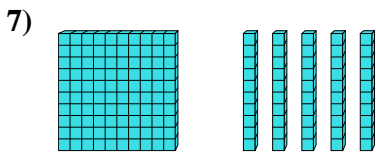
4. _____



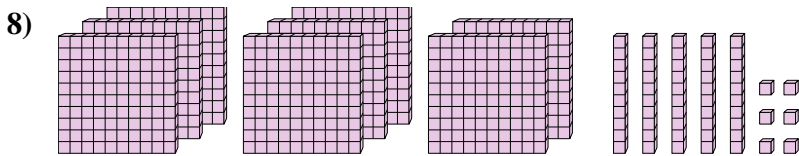
5. _____



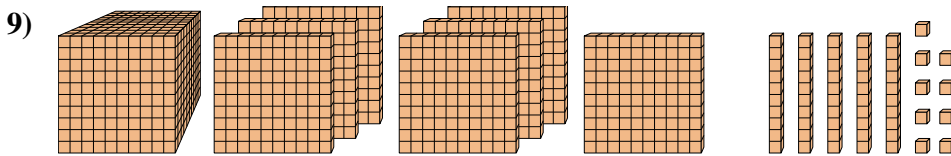
6. _____



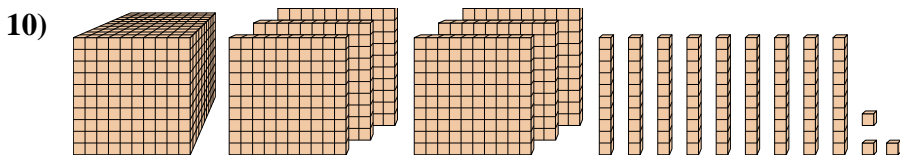
7. _____



8. _____



9. _____



10. _____



Trova il valore rappresentato da ogni set di blocchi.

1)

2)

3)

4)

5)

6)

7)

8)

9)

10)

Risposte

1. 1.348
2. 423
3. 1.277
4. 1.807
5. 509
6. 842
7. 150
8. 856
9. 1.759
10. 1.693