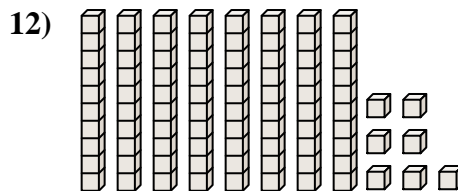
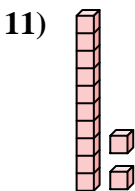
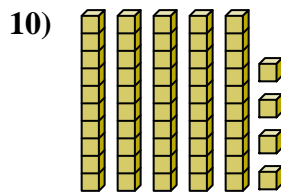
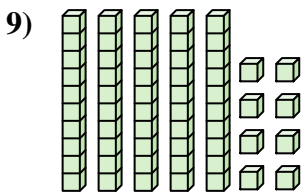
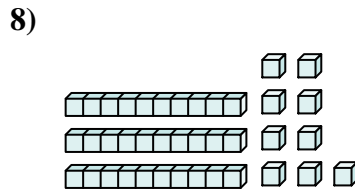
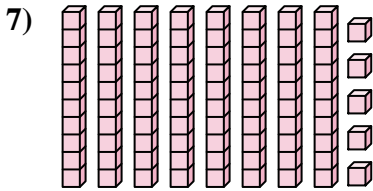
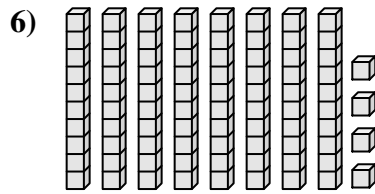
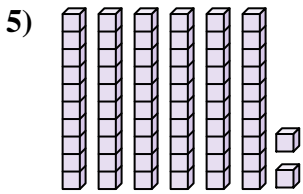
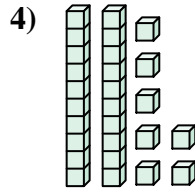
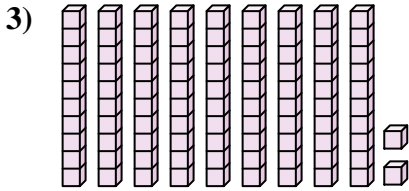
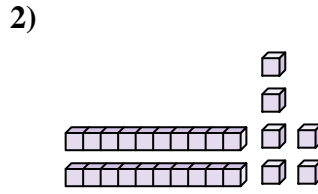
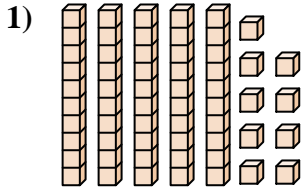




Conta il numero totale dei blocchi.

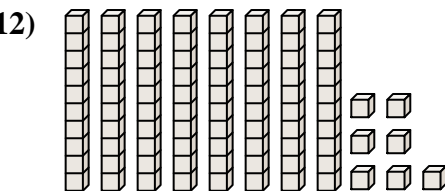
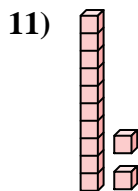
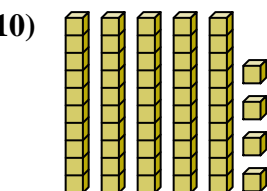
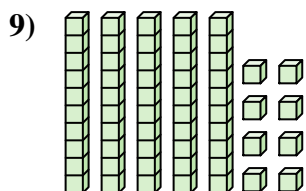
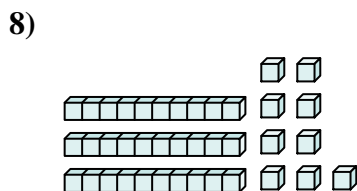
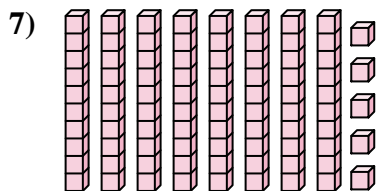
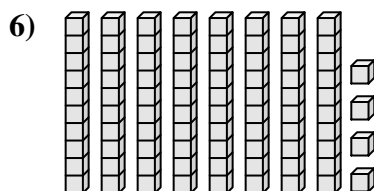
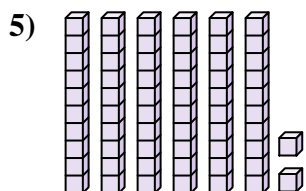
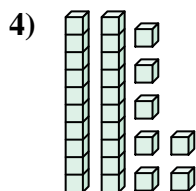
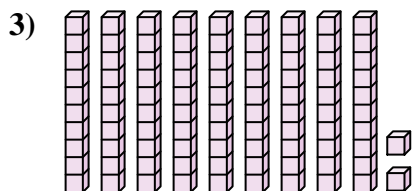
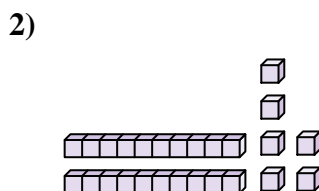
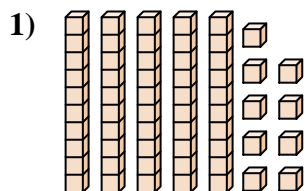
**Risposte**



1. \_\_\_\_\_
2. \_\_\_\_\_
3. \_\_\_\_\_
4. \_\_\_\_\_
5. \_\_\_\_\_
6. \_\_\_\_\_
7. \_\_\_\_\_
8. \_\_\_\_\_
9. \_\_\_\_\_
10. \_\_\_\_\_
11. \_\_\_\_\_
12. \_\_\_\_\_



Conta il numero totale dei blocchi.



**Risposte**

1. 59

2. 26

3. 92

4. 27

5. 62

6. 84

7. 85

8. 39

9. 58

10. 54

11. 12

12. 87



Conta il numero totale dei blocchi.

62

54

58

27

84

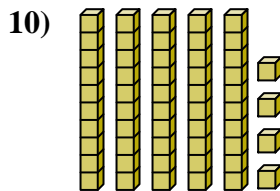
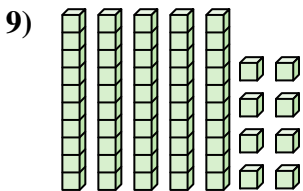
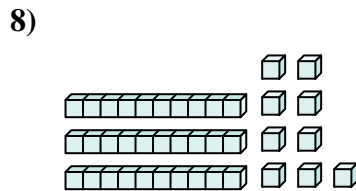

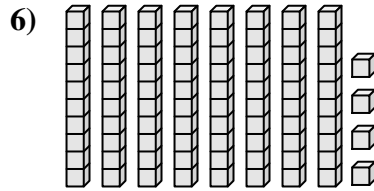
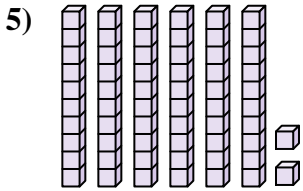
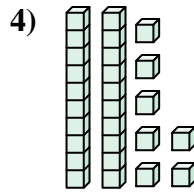
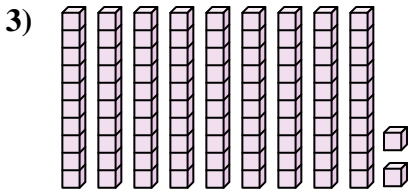
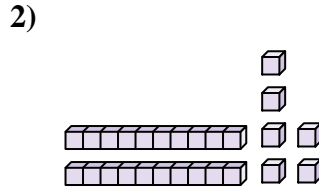
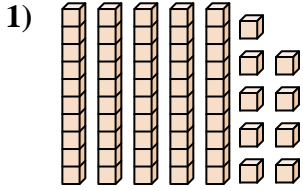
59

85

26

92

39



**Risposte**

1. \_\_\_\_\_

2. \_\_\_\_\_

3. \_\_\_\_\_

4. \_\_\_\_\_

5. \_\_\_\_\_

6. \_\_\_\_\_

7. \_\_\_\_\_

8. \_\_\_\_\_

9. \_\_\_\_\_

10. \_\_\_\_\_