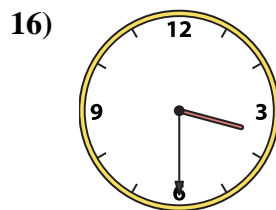
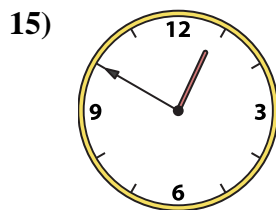
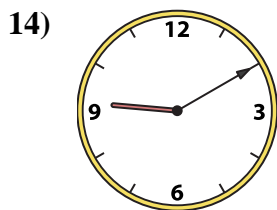
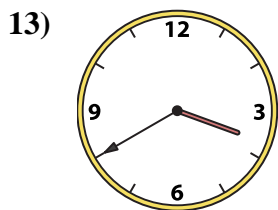
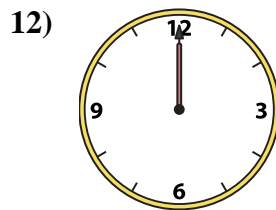
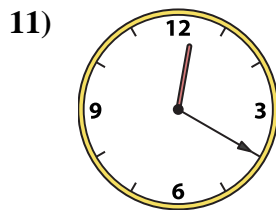
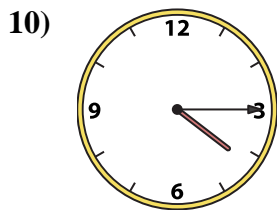
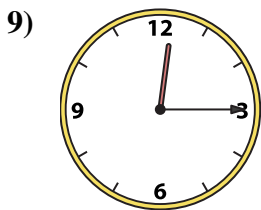

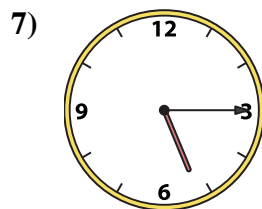
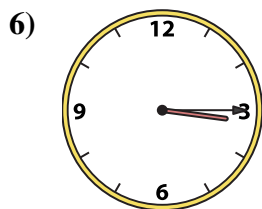
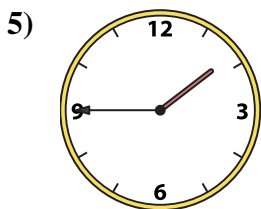
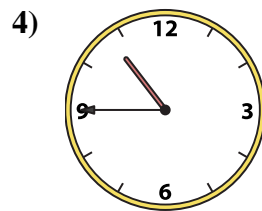
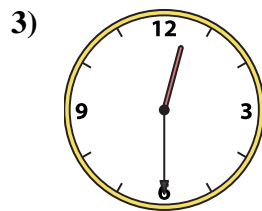
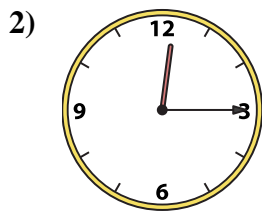
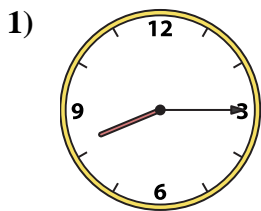




Abbina l'orologio analogico all'orologio digitale.

Risposte



1. _____
2. _____
3. _____
4. _____
5. _____
6. _____
7. _____
8. _____
9. _____
10. _____
11. _____
12. _____
13. _____
14. _____
15. _____
16. _____

A. 3:40

B. 9:10

C. 12:20

D. 12:15

E. 12:00

F. 12:15

G. 10:45

H. 12:50

I. 8:15

J. 11:20

K. 5:15

L. 1:45

M. 12:30

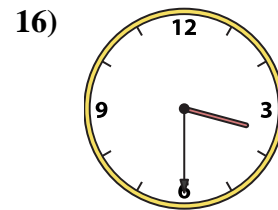
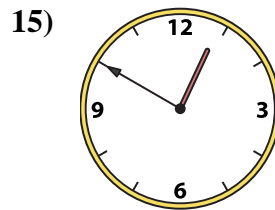
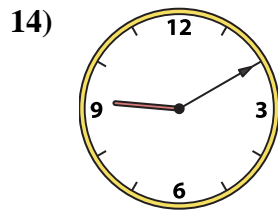
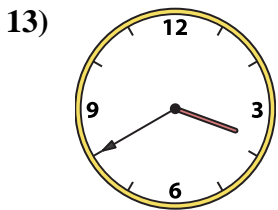
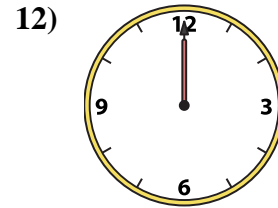
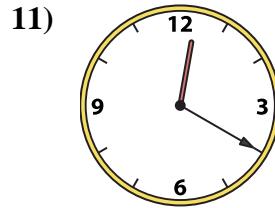
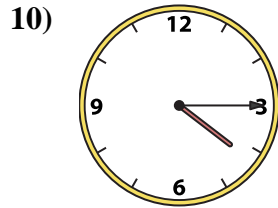
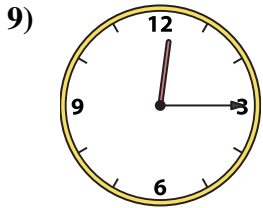
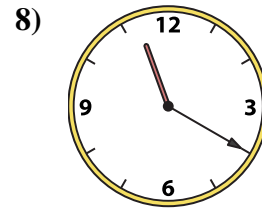
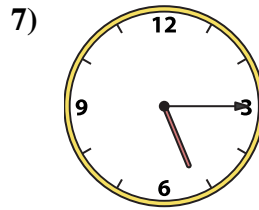
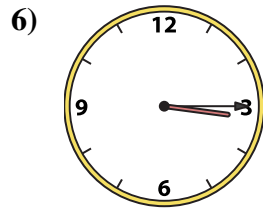
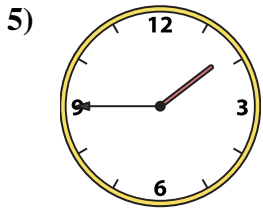
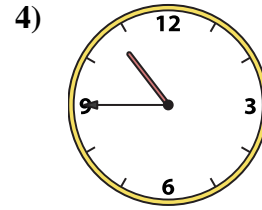
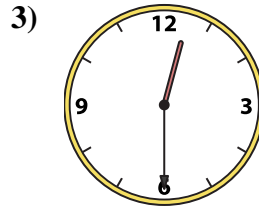
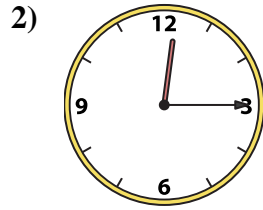
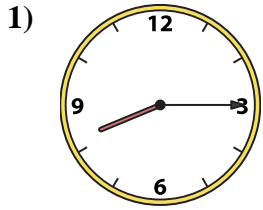
N. 4:15

O. 3:30

P. 3:15



Abbina l'orologio analogico all'orologio digitale.

A. **3:40**B. **9:10**C. **12:20**D. **12:15**E. **12:00**F. **12:15**G. **10:45**H. **12:50**I. **8:15**J. **11:20**K. **5:15**L. **1:45**M. **12:30**N. **4:15**O. **3:30**P. **3:15****Risposte**1. **I**2. **D**3. **M**4. **G**5. **L**6. **P**7. **K**8. **J**9. **F**10. **N**11. **C**12. **E**13. **A**14. **B**15. **H**16. **O**