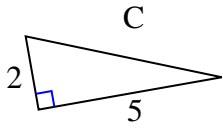




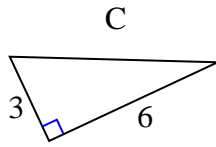
Trova il valore di 'C' arrotondando la tua risposta alle centinaia più vicine.

Risposte

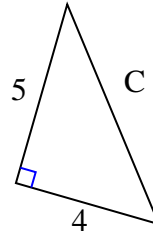
1)



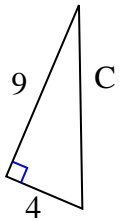
2)



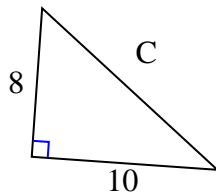
3)



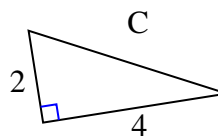
4)



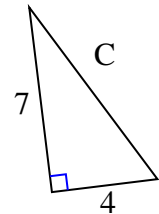
5)



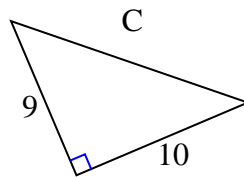
6)



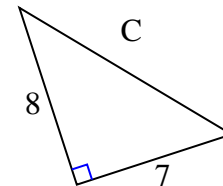
7)



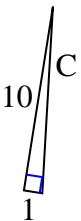
8)



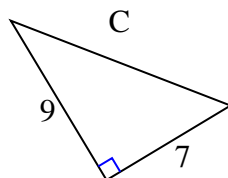
9)



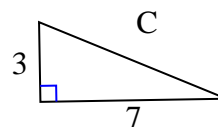
10)



11)



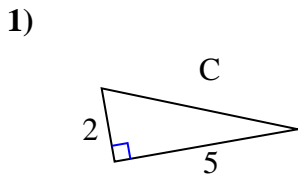
12)



1. _____
2. _____
3. _____
4. _____
5. _____
6. _____
7. _____
8. _____
9. _____
10. _____
11. _____
12. _____

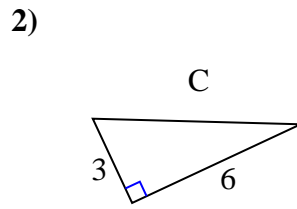


Trova il valore di 'C' arrotondando la tua risposta alle centinaia più vicine.



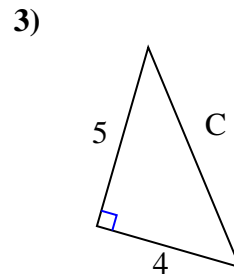
$$4 + 25 = 29$$

$$\sqrt{29} = 5,39$$



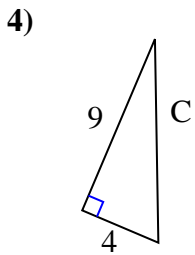
$$9 + 36 = 45$$

$$\sqrt{45} = 6,71$$



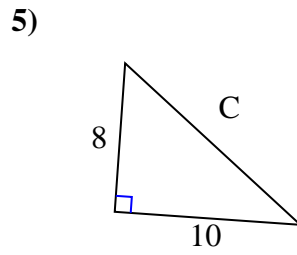
$$25 + 16 = 41$$

$$\sqrt{41} = 6,4$$



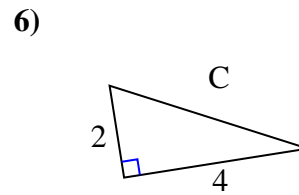
$$81 + 16 = 97$$

$$\sqrt{97} = 9,85$$



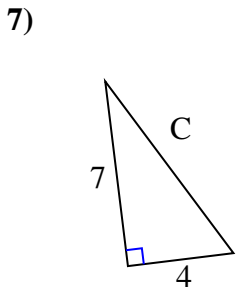
$$64 + 100 = 164$$

$$\sqrt{164} = 12,81$$



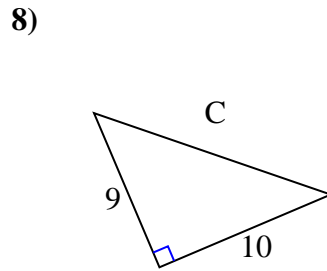
$$4 + 16 = 20$$

$$\sqrt{20} = 4,47$$



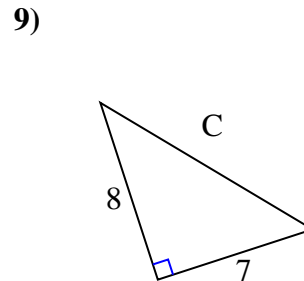
$$49 + 16 = 65$$

$$\sqrt{65} = 8,06$$



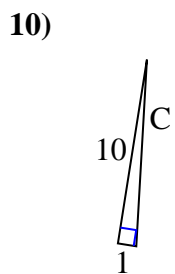
$$81 + 100 = 181$$

$$\sqrt{181} = 13,45$$



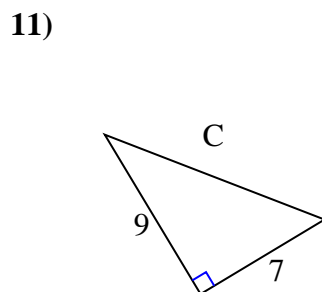
$$64 + 49 = 113$$

$$\sqrt{113} = 10,63$$



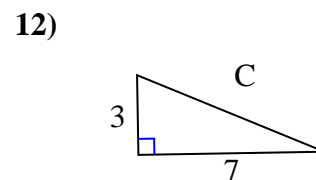
$$100 + 1 = 101$$

$$\sqrt{101} = 10,05$$



$$81 + 49 = 130$$

$$\sqrt{130} = 11,4$$



$$9 + 49 = 58$$

$$\sqrt{58} = 7,62$$

Risposte

1. 5,39
2. 6,71
3. 6,4
4. 9,85
5. 12,81
6. 4,47
7. 8,06
8. 13,45
9. 10,63
10. 10,05
11. 11,4
12. 7,62