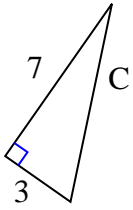




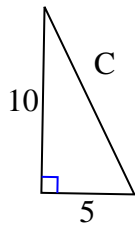
Trova il valore di 'C' arrotondando la tua risposta alle centinaia più vicine.

Risposte

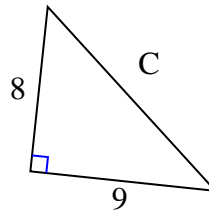
1)



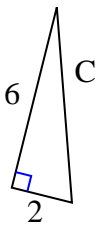
2)



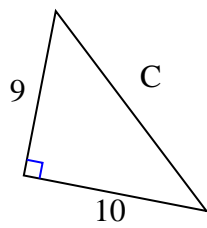
3)



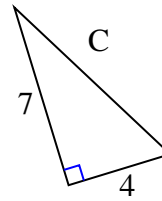
4)



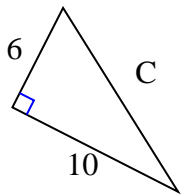
5)



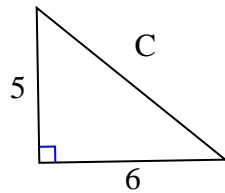
6)



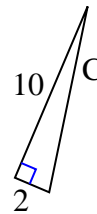
7)



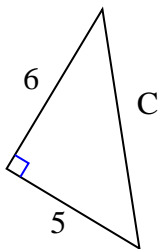
8)



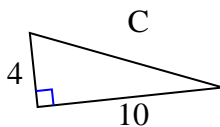
9)



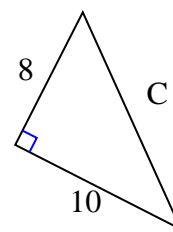
10)



11)



12)

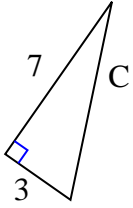


1. _____
2. _____
3. _____
4. _____
5. _____
6. _____
7. _____
8. _____
9. _____
10. _____
11. _____
12. _____



Trova il valore di 'C' arrotondando la tua risposta alle centinaia più vicine.

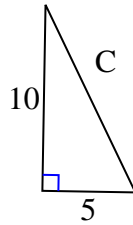
1)



$$49 + 9 = 58$$

$$\sqrt{58} = 7,62$$

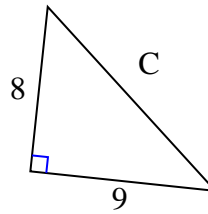
2)



$$100 + 25 = 125$$

$$\sqrt{125} = 11,18$$

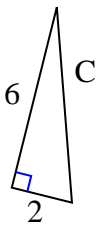
3)



$$64 + 81 = 145$$

$$\sqrt{145} = 12,04$$

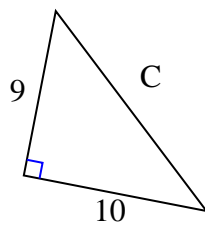
4)



$$36 + 4 = 40$$

$$\sqrt{40} = 6,32$$

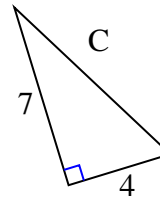
5)



$$81 + 100 = 181$$

$$\sqrt{181} = 13,45$$

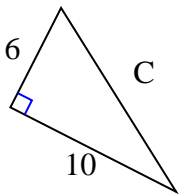
6)



$$49 + 16 = 65$$

$$\sqrt{65} = 8,06$$

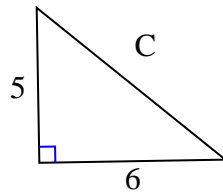
7)



$$36 + 100 = 136$$

$$\sqrt{136} = 11,66$$

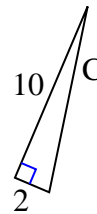
8)



$$25 + 36 = 61$$

$$\sqrt{61} = 7,81$$

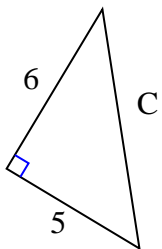
9)



$$100 + 4 = 104$$

$$\sqrt{104} = 10,2$$

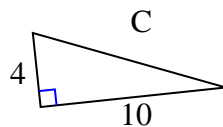
10)



$$36 + 25 = 61$$

$$\sqrt{61} = 7,81$$

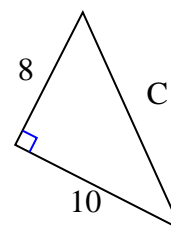
11)



$$16 + 100 = 116$$

$$\sqrt{116} = 10,77$$

12)



$$64 + 100 = 164$$

$$\sqrt{164} = 12,81$$

Risposte

1. 7,62
2. 11,18
3. 12,04
4. 6,32
5. 13,45
6. 8,06
7. 11,66
8. 7,81
9. 10,2
10. 7,81
11. 10,77
12. 12,81