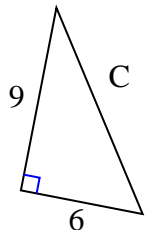




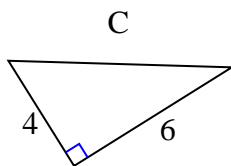
Trova il valore di 'C' arrotondando la tua risposta alle centinaia più vicine.

Risposte

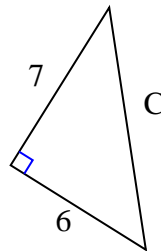
1)



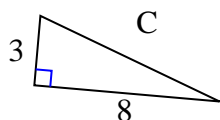
2)



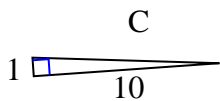
3)



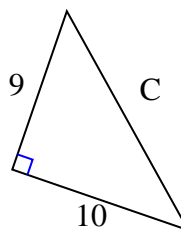
4)



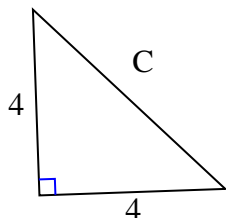
5)



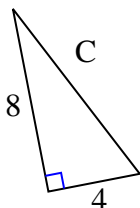
6)



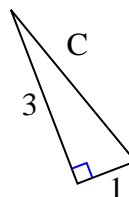
7)



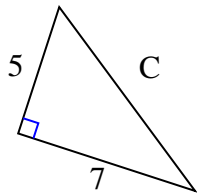
8)



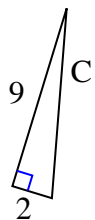
9)



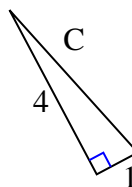
10)



11)



12)

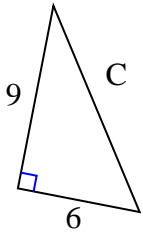


1. _____
2. _____
3. _____
4. _____
5. _____
6. _____
7. _____
8. _____
9. _____
10. _____
11. _____
12. _____



Trova il valore di 'C' arrotondando la tua risposta alle centinaia più vicine.

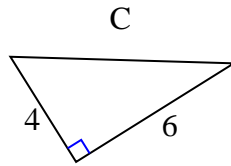
1)



$$81 + 36 = 117$$

$$\sqrt{117} = 10,82$$

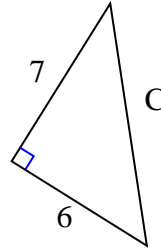
2)



$$16 + 36 = 52$$

$$\sqrt{52} = 7,21$$

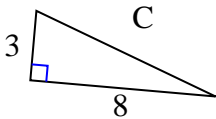
3)



$$49 + 36 = 85$$

$$\sqrt{85} = 9,22$$

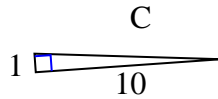
4)



$$9 + 64 = 73$$

$$\sqrt{73} = 8,54$$

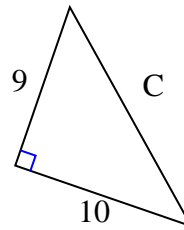
5)



$$1 + 100 = 101$$

$$\sqrt{101} = 10,05$$

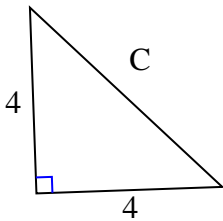
6)



$$81 + 100 = 181$$

$$\sqrt{181} = 13,45$$

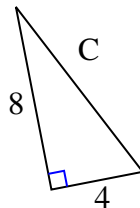
7)



$$16 + 16 = 32$$

$$\sqrt{32} = 5,66$$

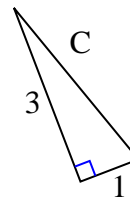
8)



$$64 + 16 = 80$$

$$\sqrt{80} = 8,94$$

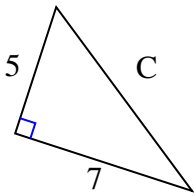
9)



$$9 + 1 = 10$$

$$\sqrt{10} = 3,16$$

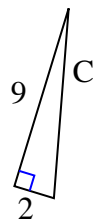
10)



$$25 + 49 = 74$$

$$\sqrt{74} = 8,6$$

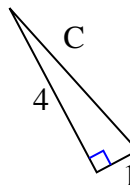
11)



$$81 + 4 = 85$$

$$\sqrt{85} = 9,22$$

12)



$$16 + 1 = 17$$

$$\sqrt{17} = 4,12$$

Risposte

1. 10,82
2. 7,21
3. 9,22
4. 8,54
5. 10,05
6. 13,45
7. 5,66
8. 8,94
9. 3,16
10. 8,6
11. 9,22
12. 4,12