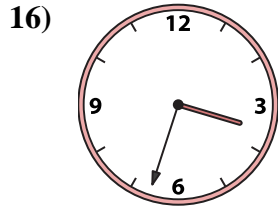
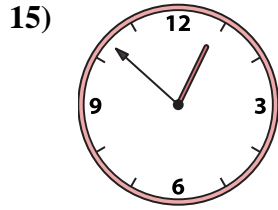
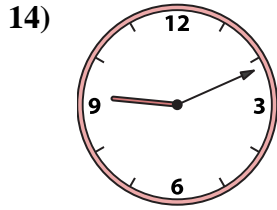
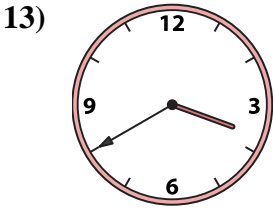
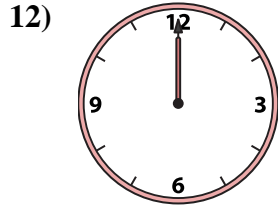
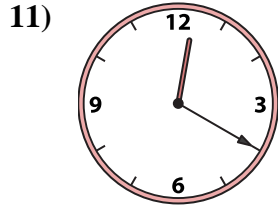
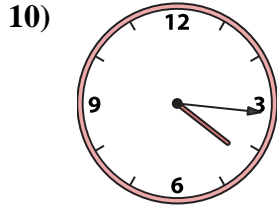
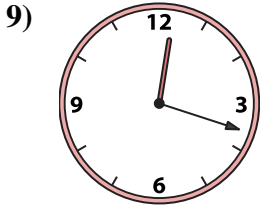
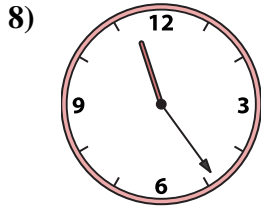
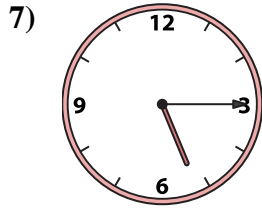
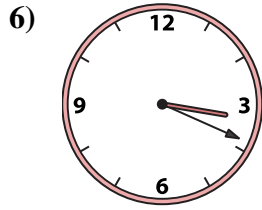
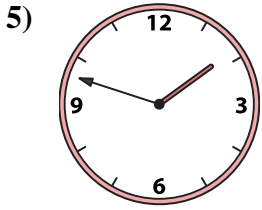
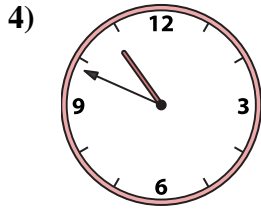
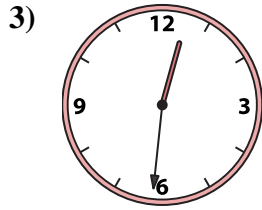
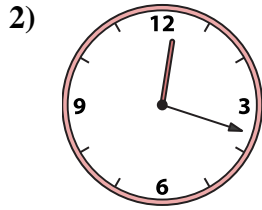
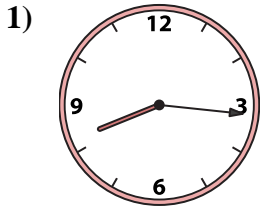




Abbina l'orologio analogico all'orologio digitale.

**Risposte**



A. **3:40**

B. **9:11**

C. **12:20**

D. **12:18**

E. **12:00**

F. **12:18**

G. **10:49**

H. **12:52**

I. **8:16**

J. **11:24**

K. **5:15**

L. **1:48**

M. **12:31**

N. **4:16**

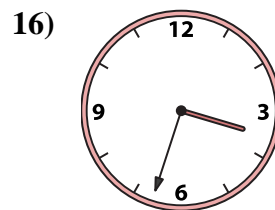
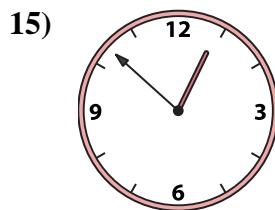
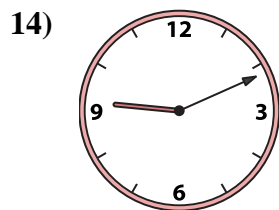
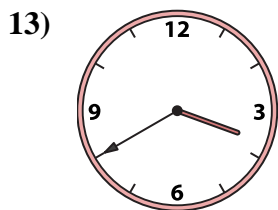
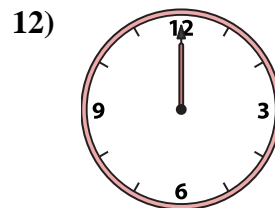
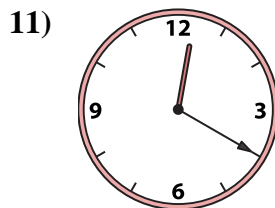
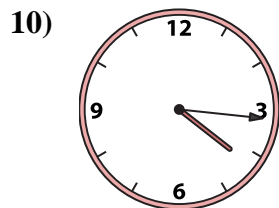
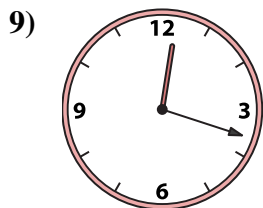
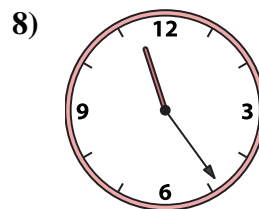
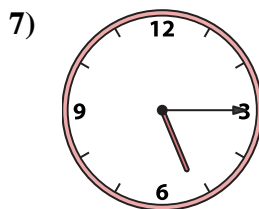
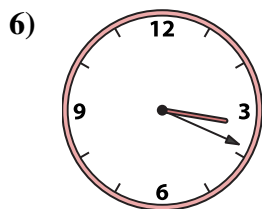

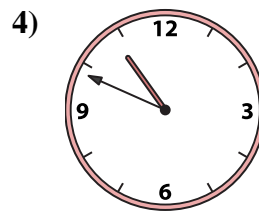
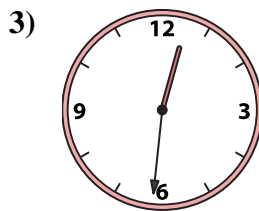
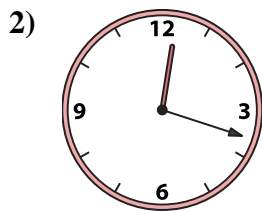
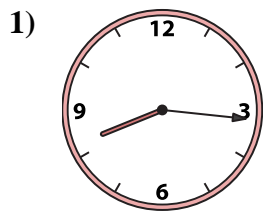
O. **3:33**

P. **3:19**

1. \_\_\_\_\_
2. \_\_\_\_\_
3. \_\_\_\_\_
4. \_\_\_\_\_
5. \_\_\_\_\_
6. \_\_\_\_\_
7. \_\_\_\_\_
8. \_\_\_\_\_
9. \_\_\_\_\_
10. \_\_\_\_\_
11. \_\_\_\_\_
12. \_\_\_\_\_
13. \_\_\_\_\_
14. \_\_\_\_\_
15. \_\_\_\_\_
16. \_\_\_\_\_



Abbina l'orologio analogico all'orologio digitale.

A. **3:40**B. **9:11**C. **12:20**D. **12:18**E. **12:00**F. **12:18**G. **10:49**H. **12:52**I. **8:16**J. **11:24**K. **5:15**L. **1:48**M. **12:31**N. **4:16**O. **3:33**P. **3:19****Risposte**1. **I**2. **D**3. **M**4. **G**5. **L**6. **P**7. **K**8. **J**9. **F**10. **N**11. **C**12. **E**13. **A**14. **B**15. **H**16. **O**