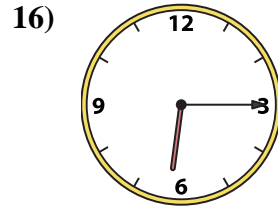
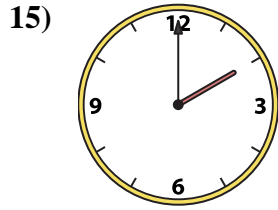
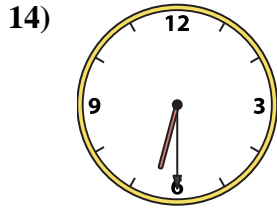
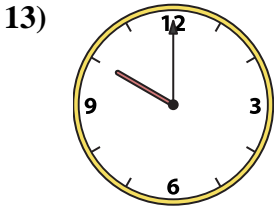
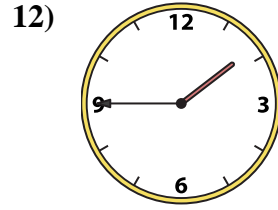
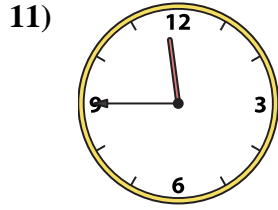
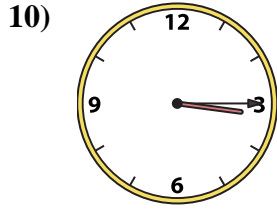
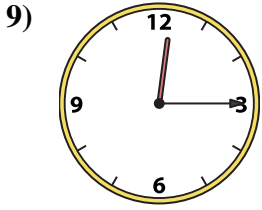
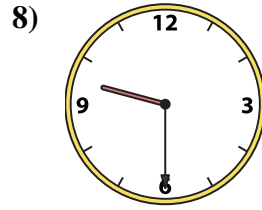
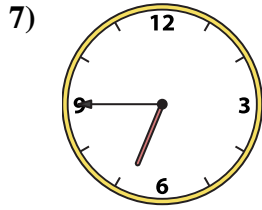

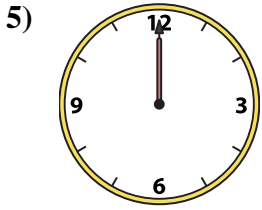
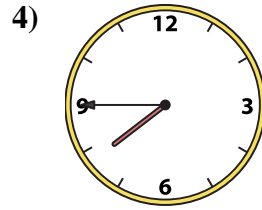
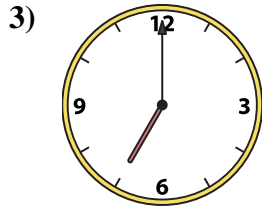
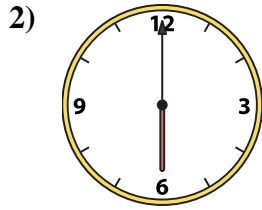
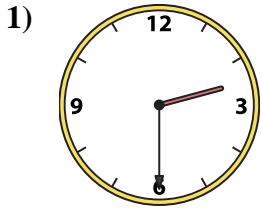




Abbina l'orologio analogico all'orologio digitale.

**Risposte**



A. 10:00

B. 2:30

C. 2:00

D. 3:15

E. 7:45

F. 7:00

G. 12:00

H. 12:15

I. 6:00

J. 11:45

K. 1:45

L. 9:30

M. 12:45

N. 6:30

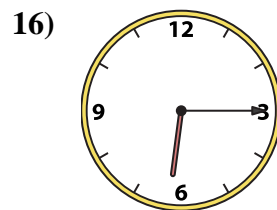
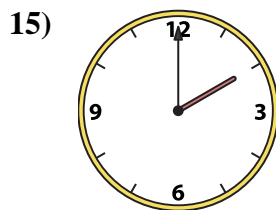
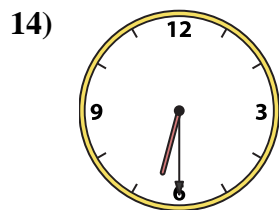
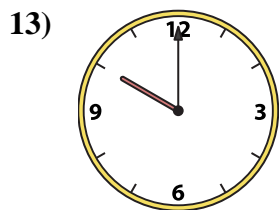
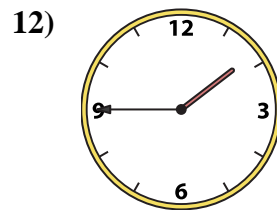
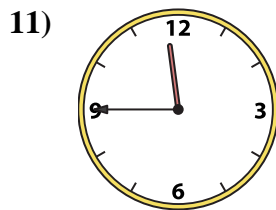
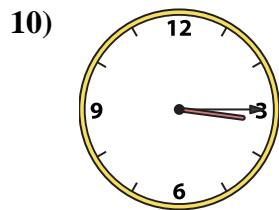
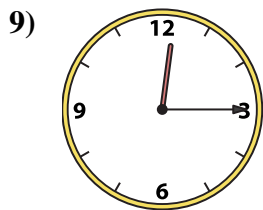
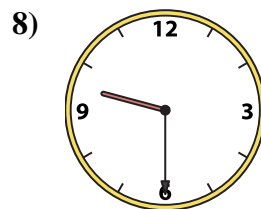
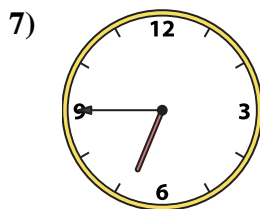

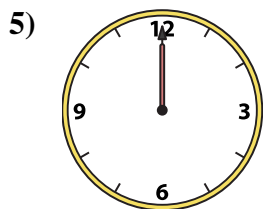
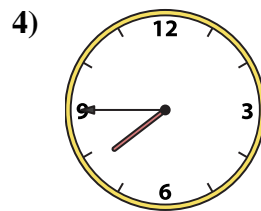
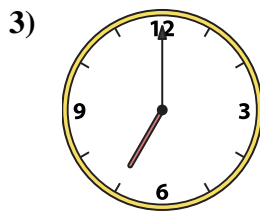
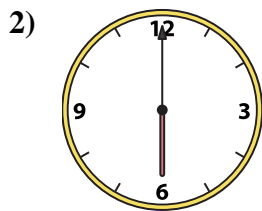
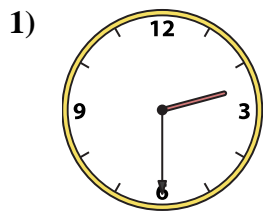
O. 6:45

P. 6:15

1. \_\_\_\_\_
2. \_\_\_\_\_
3. \_\_\_\_\_
4. \_\_\_\_\_
5. \_\_\_\_\_
6. \_\_\_\_\_
7. \_\_\_\_\_
8. \_\_\_\_\_
9. \_\_\_\_\_
10. \_\_\_\_\_
11. \_\_\_\_\_
12. \_\_\_\_\_
13. \_\_\_\_\_
14. \_\_\_\_\_
15. \_\_\_\_\_
16. \_\_\_\_\_



Abbina l'orologio analogico all'orologio digitale.

A. **10:00**B. **2:30**C. **2:00**D. **3:15**E. **7:45**F. **7:00**G. **12:00**H. **12:15**I. **6:00**J. **11:45**K. **1:45**L. **9:30**M. **12:45**N. **6:30**O. **6:45**P. **6:15****Risposte**1. **B**2. **I**3. **F**4. **E**5. **G**6. **M**7. **O**8. **L**9. **H**10. **D**11. **J**12. **K**13. **A**14. **N**15. **C**16. **P**