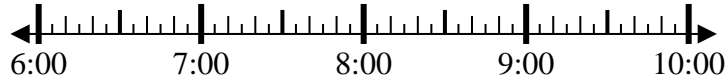


**Risolvi ogni problema.****Risposte**

1) Inizio: \_\_\_\_\_

Elapsed: 1 ora e 10 minuti

Fine: 7:55

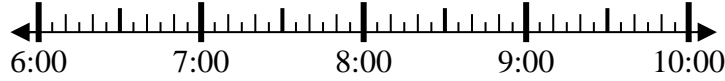


1. \_\_\_\_\_

2) Inizio: \_\_\_\_\_

Elapsed: 2 ore e 40 minuti

Fine: 9:05



2. \_\_\_\_\_

3) Inizio: \_\_\_\_\_

Elapsed: 1 ora e 50 minuti

Fine: 3:00



3. \_\_\_\_\_

4) Inizio: \_\_\_\_\_

Elapsed: 1 ora e 45 minuti

Fine: 1:00



4. \_\_\_\_\_

5) Inizio: \_\_\_\_\_

Elapsed: 2 ore e 10 minuti

Fine: 5:35



5. \_\_\_\_\_

6) Inizio: \_\_\_\_\_

Elapsed: 2 ore e 35 minuti

Fine: 5:55

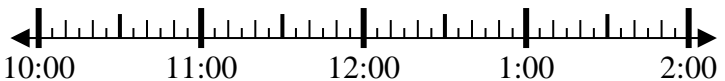


6. \_\_\_\_\_

7) Inizio: \_\_\_\_\_

Elapsed: 1 ora e 50 minuti

Fine: 12:25

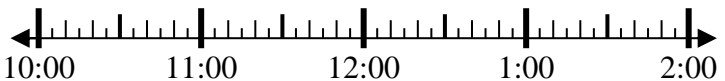


7. \_\_\_\_\_

8) Inizio: \_\_\_\_\_

Elapsed: 1 ora e 30 minuti

Fine: 11:30



8. \_\_\_\_\_

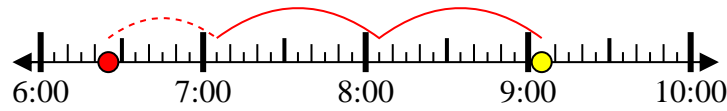


Risolvi ogni problema.

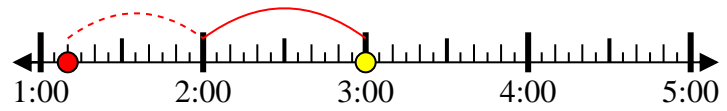
- 1) Inizio: 6:45  
 Elapsed: 1 ora e 10 minuti  
 Fine: 7:55



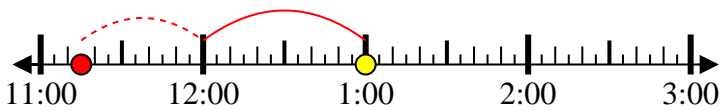
- 2) Inizio: 6:25  
 Elapsed: 2 ore e 40 minuti  
 Fine: 9:05



- 3) Inizio: 1:10  
 Elapsed: 1 ora e 50 minuti  
 Fine: 3:00



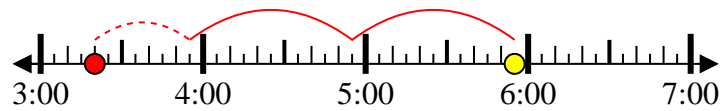
- 4) Inizio: 11:15  
 Elapsed: 1 ora e 45 minuti  
 Fine: 1:00



- 5) Inizio: 3:25  
 Elapsed: 2 ore e 10 minuti  
 Fine: 5:35



- 6) Inizio: 3:20  
 Elapsed: 2 ore e 35 minuti  
 Fine: 5:55



- 7) Inizio: 10:35  
 Elapsed: 1 ora e 50 minuti  
 Fine: 12:25



- 8) Inizio: 10:00  
 Elapsed: 1 ora e 30 minuti  
 Fine: 11:30

**Risposte**

1. 6:45  
 2. 6:25  
 3. 1:10  
 4. 11:15  
 5. 3:25  
 6. 3:20  
 7. 10:35  
 8. 10:00