



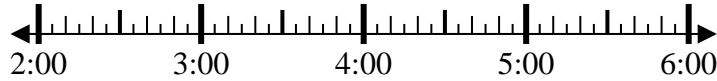
**Risolvi ogni problema.**

**Risposte**

1) Inizio: \_\_\_\_\_

Elapsed: 1 ora e 40 minuti

Fine: 3:55

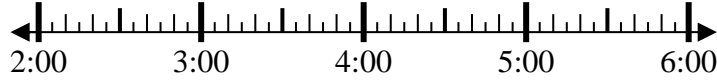


1. \_\_\_\_\_

2) Inizio: \_\_\_\_\_

Elapsed: 2 ore e 45 minuti

Fine: 4:55



2. \_\_\_\_\_

3) Inizio: \_\_\_\_\_

Elapsed: 2 ore e 10 minuti

Fine: 4:55



3. \_\_\_\_\_

4) Inizio: \_\_\_\_\_

Elapsed: 1 ora e 20 minuti

Fine: 3:40



4. \_\_\_\_\_

5) Inizio: \_\_\_\_\_

Elapsed: 2 ore e 25 minuti

Fine: 1:30

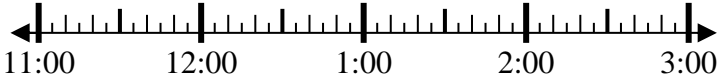


5. \_\_\_\_\_

6) Inizio: \_\_\_\_\_

Elapsed: 2 ore e 20 minuti

Fine: 1:25

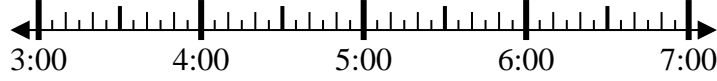


6. \_\_\_\_\_

7) Inizio: \_\_\_\_\_

Elapsed: 2 ore e 20 minuti

Fine: 6:05

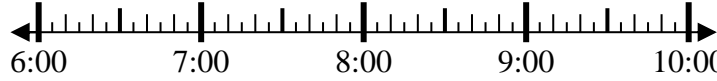


7. \_\_\_\_\_

8) Inizio: \_\_\_\_\_

Elapsed: 1 ora e 30 minuti

Fine: 7:50

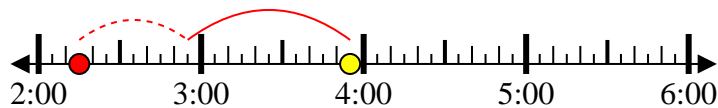


8. \_\_\_\_\_

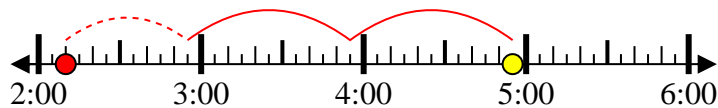


Risolvi ogni problema.

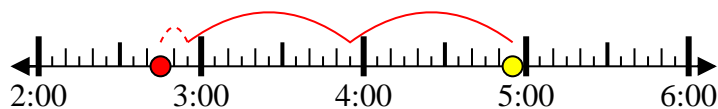
1) Inizio: 2:15  
 Elapsed: 1 ora e 40 minuti  
 Fine: 3:55



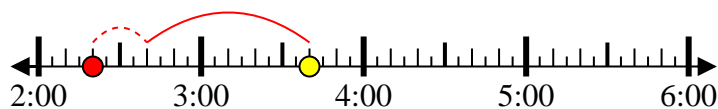
2) Inizio: 2:10  
 Elapsed: 2 ore e 45 minuti  
 Fine: 4:55



3) Inizio: 2:45  
 Elapsed: 2 ore e 10 minuti  
 Fine: 4:55



4) Inizio: 2:20  
 Elapsed: 1 ora e 20 minuti  
 Fine: 3:40



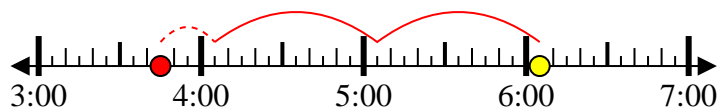
5) Inizio: 11:05  
 Elapsed: 2 ore e 25 minuti  
 Fine: 1:30



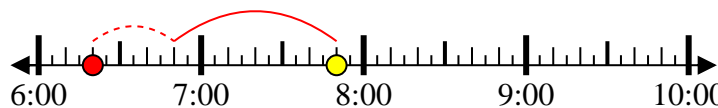
6) Inizio: 11:05  
 Elapsed: 2 ore e 20 minuti  
 Fine: 1:25



7) Inizio: 3:45  
 Elapsed: 2 ore e 20 minuti  
 Fine: 6:05



8) Inizio: 6:20  
 Elapsed: 1 ora e 30 minuti  
 Fine: 7:50

**Risposte**1. 2:152. 2:103. 2:454. 2:205. 11:056. 11:057. 3:458. 6:20