

**Risolvi ogni problema.****Risposte**

1) Inizio: _____

Elapsed: 2 ore e 10 minuti

Fine: 8:50



1. _____

2) Inizio: _____

Elapsed: 2 ore e 30 minuti

Fine: 2:00



2. _____

3. _____

4. _____

5. _____

3) Inizio: _____

Elapsed: 2 ore e 40 minuti

Fine: 3:10



6. _____

7. _____

8. _____

4) Inizio: _____

Elapsed: 1 ora e 20 minuti

Fine: 8:00



5) Inizio: _____

Elapsed: 1 ora e 30 minuti

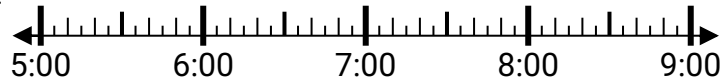
Fine: 10:05



6) Inizio: _____

Elapsed: 1 ora e 40 minuti

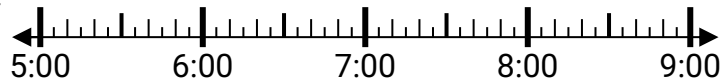
Fine: 6:40



7) Inizio: _____

Elapsed: 2 ore e 40 minuti

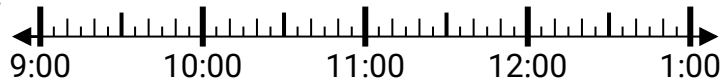
Fine: 8:20

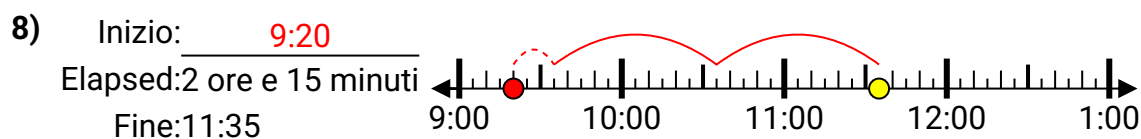
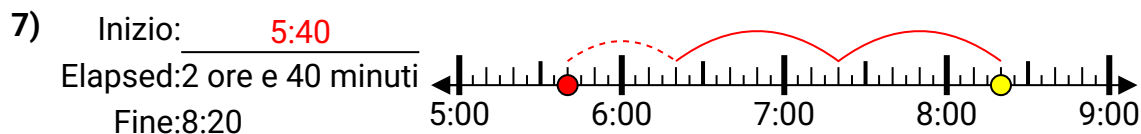
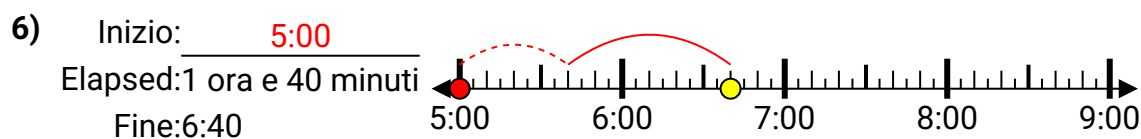
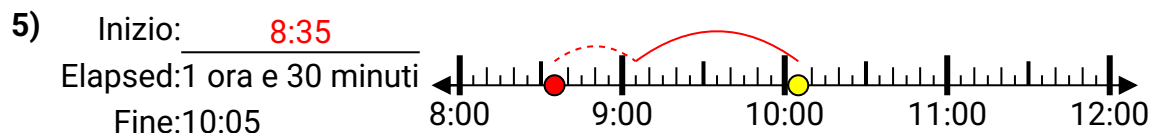
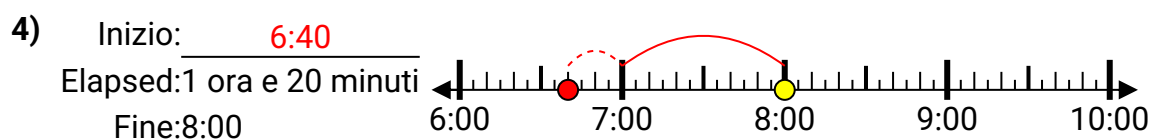
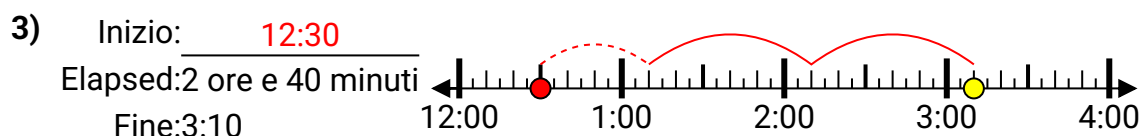
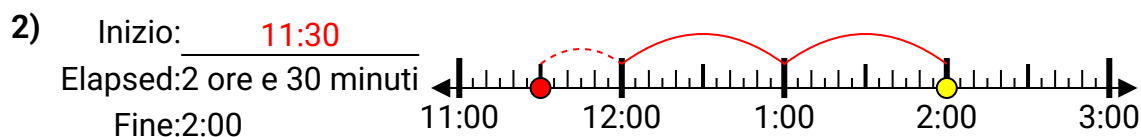
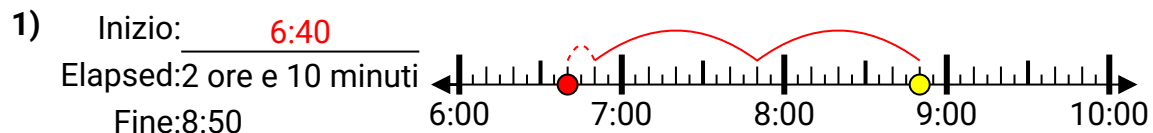


8) Inizio: _____

Elapsed: 2 ore e 15 minuti

Fine: 11:35



**Risolvi ogni problema.****Risposte**

1. 6:40
2. 11:30
3. 12:30
4. 6:40
5. 8:35
6. 5:00
7. 5:40
8. 9:20