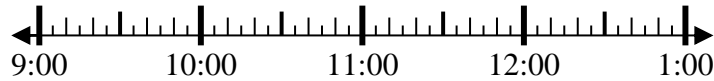


**Risolvi ogni problema.****Risposte**

1) Inizio: 9:35

Elapsed: _____

Fine: 12:05

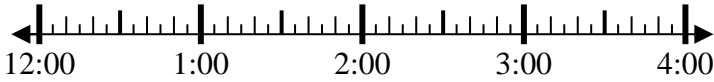


1. _____

2) Inizio: 12:50

Elapsed: _____

Fine: 2:35

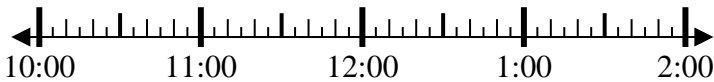


2. _____

3) Inizio: 10:15

Elapsed: _____

Fine: 11:40

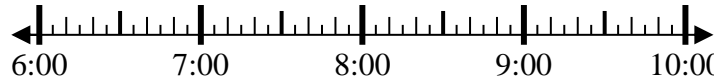


3. _____

4) Inizio: 6:25

Elapsed: _____

Fine: 8:10

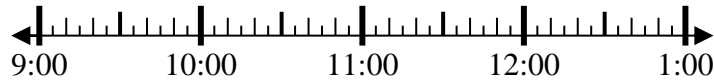


4. _____

5) Inizio: 9:10

Elapsed: _____

Fine: 10:25



5. _____

6) Inizio: 11:45

Elapsed: _____

Fine: 2:00



6. _____

7) Inizio: 12:20

Elapsed: _____

Fine: 2:00

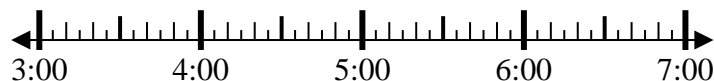


7. _____

8) Inizio: 3:35

Elapsed: _____

Fine: 5:15



8. _____



Risolvi ogni problema.

1) Inizio: 9:35

Elapsed: 2 ore e 30 minuti

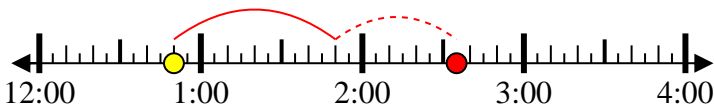
Fine: 12:05



2) Inizio: 12:50

Elapsed: 1 ora e 45 minuti

Fine: 2:35



3) Inizio: 10:15

Elapsed: 1 ora e 25 minuti

Fine: 11:40



4) Inizio: 6:25

Elapsed: 1 ora e 45 minuti

Fine: 8:10



5) Inizio: 9:10

Elapsed: 1 ora e 15 minuti

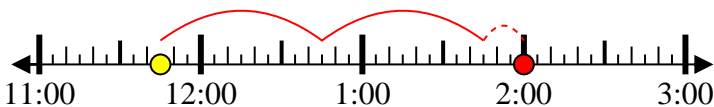
Fine: 10:25



6) Inizio: 11:45

Elapsed: 2 ore e 15 minuti

Fine: 2:00



7) Inizio: 12:20

Elapsed: 1 ora e 40 minuti

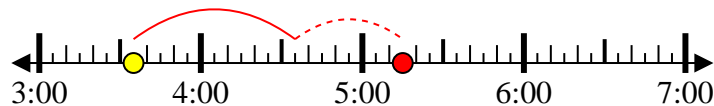
Fine: 2:00



8) Inizio: 3:35

Elapsed: 1 ora e 40 minuti

Fine: 5:15



Risposte

1. 2 ore e 30 minuti

2. 1 ora e 45 minuti

3. 1 ora e 25 minuti

4. 1 ora e 45 minuti

5. 1 ora e 15 minuti

6. 2 ore e 15 minuti

7. 1 ora e 40 minuti

8. 1 ora e 40 minuti