



Trovare il tempo trascorso con una linea dei numeri Nome: \_\_\_\_\_

**Risolvi ogni problema.**

**Risposte**

1) Inizio:7:15

Elapsed: \_\_\_\_\_

Fine:10:05

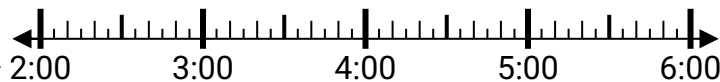


1. \_\_\_\_\_

2) Inizio:2:05

Elapsed: \_\_\_\_\_

Fine:4:35




2. \_\_\_\_\_

3. \_\_\_\_\_

3) Inizio:9:25

Elapsed: \_\_\_\_\_

Fine:12:05



4. \_\_\_\_\_

5. \_\_\_\_\_

4) Inizio:1:20

Elapsed: \_\_\_\_\_

Fine:2:45



6. \_\_\_\_\_

7. \_\_\_\_\_

8. \_\_\_\_\_

5) Inizio:6:30

Elapsed: \_\_\_\_\_

Fine:8:40



6) Inizio:2:15

Elapsed: \_\_\_\_\_

Fine:5:05



7) Inizio:7:30

Elapsed: \_\_\_\_\_

Fine:9:15



8) Inizio:7:00

Elapsed: \_\_\_\_\_

Fine:9:10

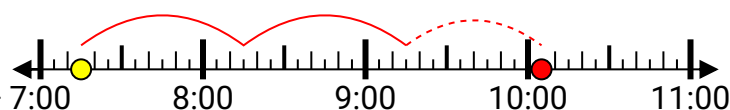


**Risolvi ogni problema.**

1) Inizio: 7:15

Elapsed: **2 ore e 50 minuti**

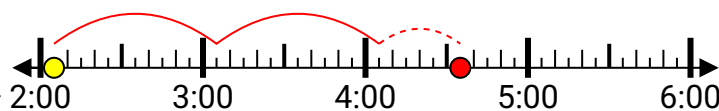
Fine: 10:05



2) Inizio: 2:05

Elapsed: **2 ore e 30 minuti**

Fine: 4:35



3) Inizio: 9:25

Elapsed: **2 ore e 40 minuti**

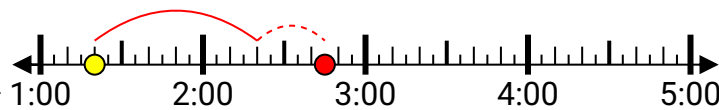
Fine: 12:05



4) Inizio: 1:20

Elapsed: **1 ora e 25 minuti**

Fine: 2:45



5) Inizio: 6:30

Elapsed: **2 ore e 10 minuti**

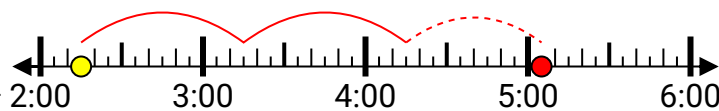
Fine: 8:40



6) Inizio: 2:15

Elapsed: **2 ore e 50 minuti**

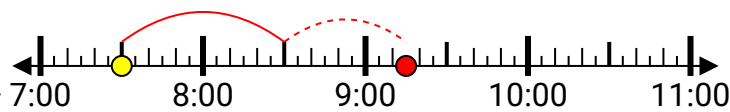
Fine: 5:05



7) Inizio: 7:30

Elapsed: **1 ora e 45 minuti**

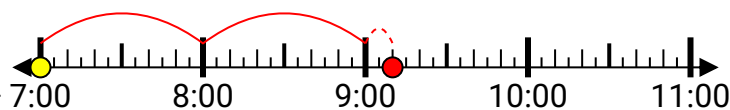
Fine: 9:15



8) Inizio: 7:00

Elapsed: **2 ore e 10 minuti**

Fine: 9:10

**Risposte**1. **2 ore e 50 minuti**2. **2 ore e 30 minuti**3. **2 ore e 40 minuti**4. **1 ora e 25 minuti**5. **2 ore e 10 minuti**6. **2 ore e 50 minuti**7. **1 ora e 45 minuti**8. **2 ore e 10 minuti**