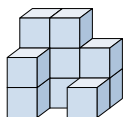




Risolvi ogni problema.

Risposte

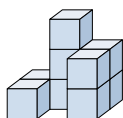
1) Guardando la figura in 3d dal lato destro, cosa vedresti?



- A.
- B.
- C.
- D.

1. _____

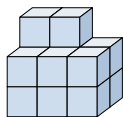
2) Guardando la figura in 3d dal lato destro, cosa vedresti?



- A.
- B.
- C.
- D.

2. _____

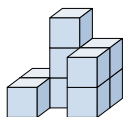
3) Guardando la figura in 3d dall'alto, cosa vedresti?



- A.
- B.
- C.
- D.

3. _____

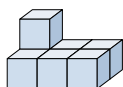
4) Guardando la figura in 3d dal lato sinistro, cosa vedresti?



- A.
- B.
- C.
- D.

4. _____

5) Guardando la figura in 3d dal lato sinistro, cosa vedresti?



- A.
- B.
- C.
- D.

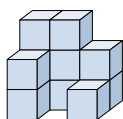
5. _____



Risolvi ogni problema.

Risposte

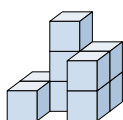
- 1) Guardando la figura in 3d dal lato destro, cosa vedresti?



A. B. C. D.

1. **B**

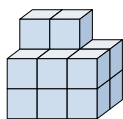
- 2) Guardando la figura in 3d dal lato destro, cosa vedresti?



A. B. C. D.

2. **C**3. **B**4. **D**5. **B**

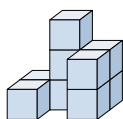
- 3) Guardando la figura in 3d dall'alto, cosa vedresti?



A. B. C. D.



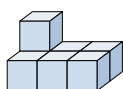
- 4) Guardando la figura in 3d dal lato sinistro, cosa vedresti?



A. B. C. D.



- 5) Guardando la figura in 3d dal lato sinistro, cosa vedresti?



A. B. C. D.

