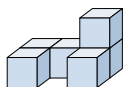




Risolvi ogni problema.

Risposte

1) Guardando la figura in 3d dal lato destro, cosa vedresti?



- A.
- B.
- C.
- D.

1. _____

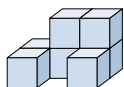
2. _____

3. _____

4. _____

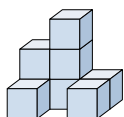
5. _____

2) Guardando la figura in 3d dal lato destro, cosa vedresti?



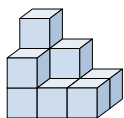
- A.
- B.
- C.
- D.

3) Guardando la figura in 3d da dietro, cosa vedresti?



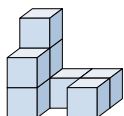
- A.
- B.
- C.
- D.

4) Guardando la figura in 3d dall'alto, cosa vedresti?



- A.
- B.
- C.
- D.

5) Guardando la figura in 3d dal lato destro, cosa vedresti?



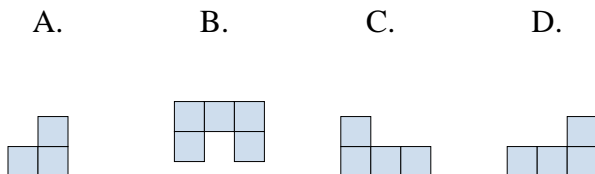
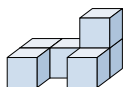
- A.
- B.
- C.
- D.



Risolvi ogni problema.

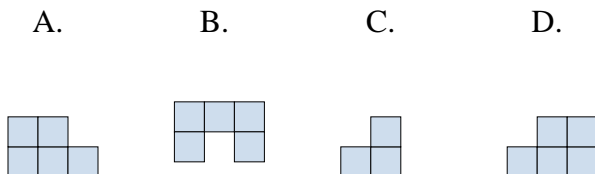
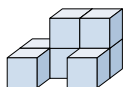
Risposte

1) Guardando la figura in 3d dal lato destro, cosa vedresti?



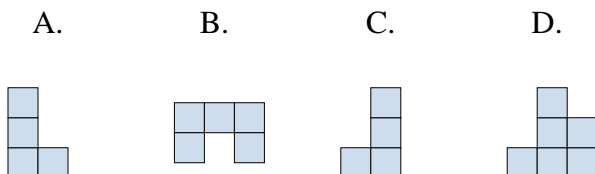
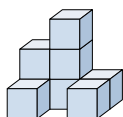
1. **A**

2) Guardando la figura in 3d dal lato destro, cosa vedresti?



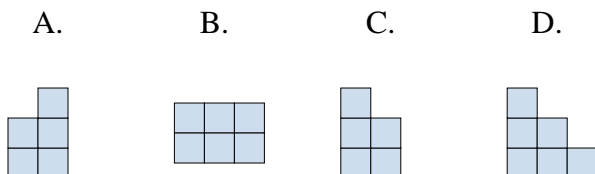
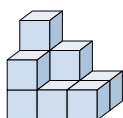
2. **C**

3) Guardando la figura in 3d da dietro, cosa vedresti?



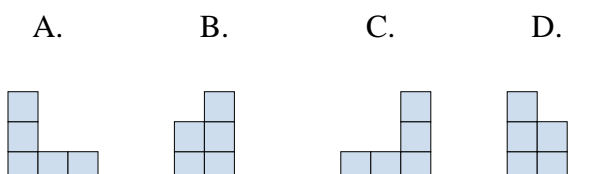
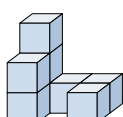
3. **D**

4) Guardando la figura in 3d dall'alto, cosa vedresti?



4. **B**

5) Guardando la figura in 3d dal lato destro, cosa vedresti?



5. **B**