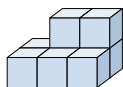








Risolvi ogni problema.

Risposte

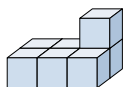
1) Guardando la figura in 3d dal lato sinistro, cosa vedresti?







- A.  B.  C.  D. 

1. _____

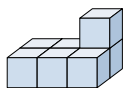
2) Guardando la figura in 3d dal lato destro, cosa vedresti?

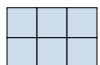





- A.  B.  C.  D. 

2. _____

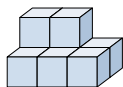
3) Guardando la figura in 3d da dietro, cosa vedresti?







- A.  B.  C.  D. 

3. _____

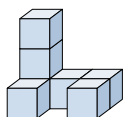
4) Guardando la figura in 3d dall'alto, cosa vedresti?

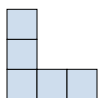





- A.  B.  C.  D. 

4. _____

5) Guardando la figura in 3d dall'alto, cosa vedresti?



- A.  B.  C.  D. 

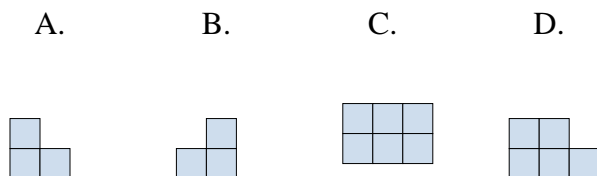
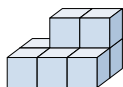
5. _____



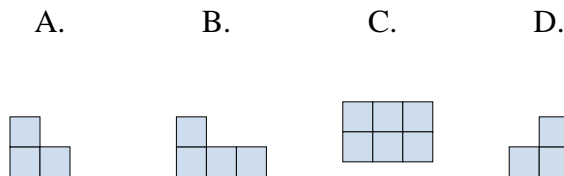
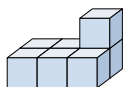
Risolvi ogni problema.

Risposte

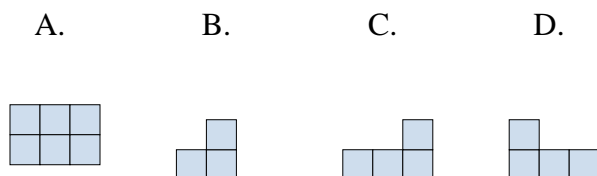
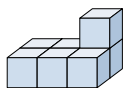
- 1) Guardando la figura in 3d dal lato sinistro, cosa vedresti?

1. **A**

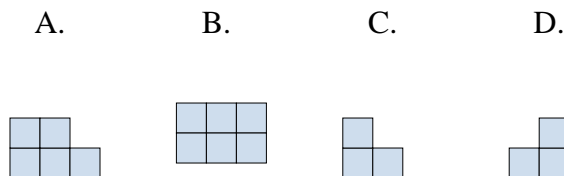
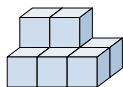
- 2) Guardando la figura in 3d dal lato destro, cosa vedresti?

2. **D** 3. **D** 4. **B** 5. **D**

- 3) Guardando la figura in 3d da dietro, cosa vedresti?



- 4) Guardando la figura in 3d dall'alto, cosa vedresti?



- 5) Guardando la figura in 3d dall'alto, cosa vedresti?

