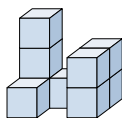


**Risolvi ogni problema.****Risposte**

- 1) Se guardassi la figura 3D dal lato sinistro, cosa vedresti?



A.



B.



C.



D.



1. _____

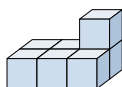
2. _____

3. _____

4. _____

5. _____

- 2) Se guardassi la figura 3D dal lato destro, cosa vedresti?



A.



B.



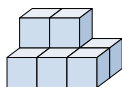
C.



D.



- 3) Se guardassi la figura 3D dal lato posteriore, cosa vedresti?



A.



B.



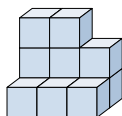
C.



D.



- 4) Se guardassi la figura 3D dal lato sinistro, cosa vedresti?



A.



B.



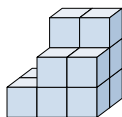
C.



D.



- 5) Se guardassi la figura 3D dal lato sinistro, cosa vedresti?



A.



B.



C.

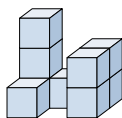


D.



**Risolvi ogni problema.****Risposte**

- 1) Se guardassi la figura 3D dal lato sinistro, cosa vedresti?



A.



B.



C.



D.

1. **C**

- 2) Se guardassi la figura 3D dal lato destro, cosa vedresti?



A.



B.



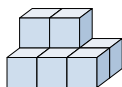
C.



D.

2. **D**

- 3) Se guardassi la figura 3D dal lato posteriore, cosa vedresti?



A.



B.



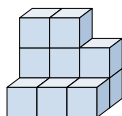
C.



D.

3. **A**

- 4) Se guardassi la figura 3D dal lato sinistro, cosa vedresti?



A.



B.



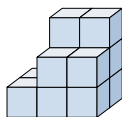
C.



D.

4. **D**

- 5) Se guardassi la figura 3D dal lato sinistro, cosa vedresti?



A.



B.



C.



D.

5. **C**