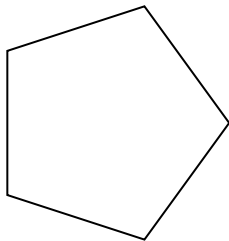


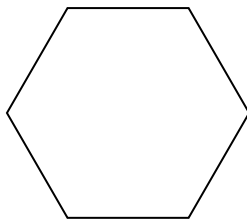


Determina se le forme rappresentate sono regolari o irregolari.

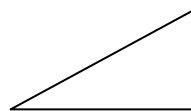
1)



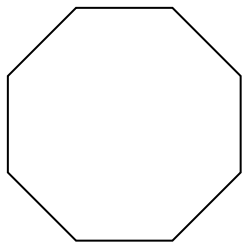
2)



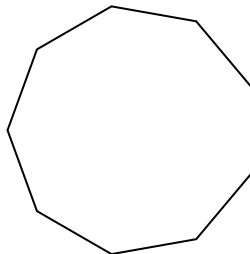
3)



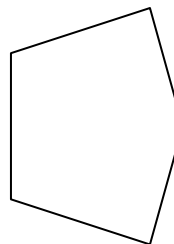
4)



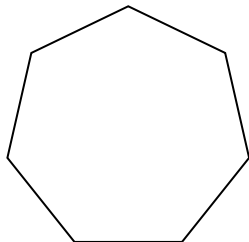
5)



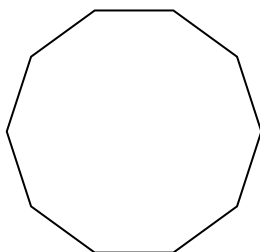
6)



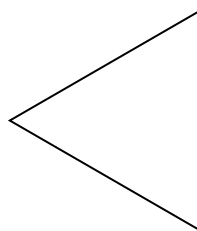
7)




8)




9)



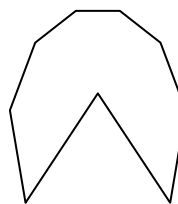
10)




11)




12)



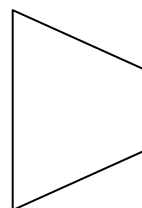
13)



14)



15)



**Risposte**

1. \_\_\_\_\_

2. \_\_\_\_\_

3. \_\_\_\_\_

4. \_\_\_\_\_

5. \_\_\_\_\_

6. \_\_\_\_\_

7. \_\_\_\_\_

8. \_\_\_\_\_

9. \_\_\_\_\_

10. \_\_\_\_\_

11. \_\_\_\_\_

12. \_\_\_\_\_

13. \_\_\_\_\_

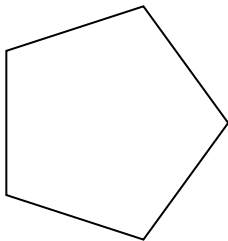
14. \_\_\_\_\_

15. \_\_\_\_\_

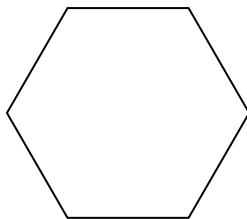


Determina se le forme rappresentate sono regolari o irregolari.

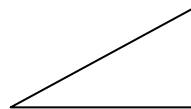
1)



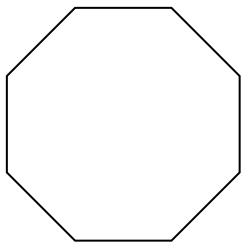
2)



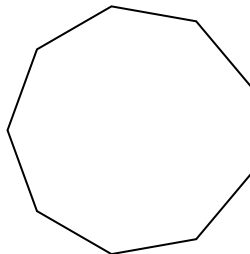
3)



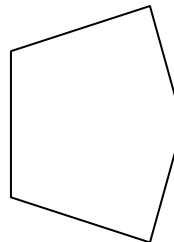
4)



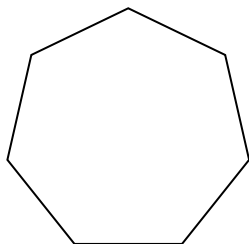
5)



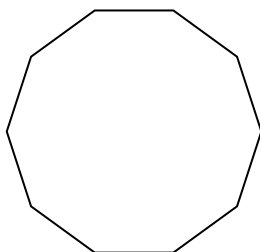
6)



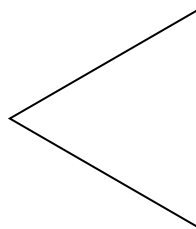
7)




8)




9)



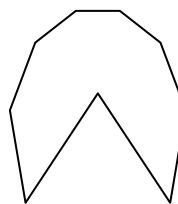
10)




11)




12)



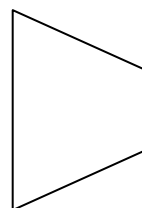
13)



14)



15)



**Risposte**

1. **Regolare**

2. **Regolare**

3. **Irregolare**

4. **Regolare**

5. **Regolare**

6. **Irregolare**

7. **Regolare**

8. **Regolare**

9. **Regolare**

10. **Irregolare**

11. **Regolare**

12. **Irregolare**

13. **Irregolare**

14. **Irregolare**

15. **Irregolare**