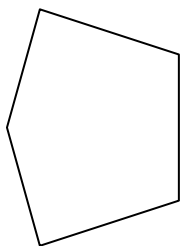




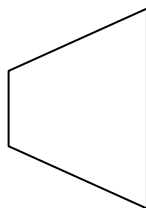
Determina se le forme rappresentate sono regolari o irregolari.

Risposte

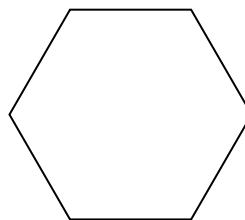
1)



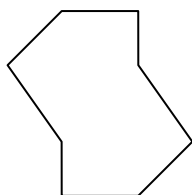
2)




3)



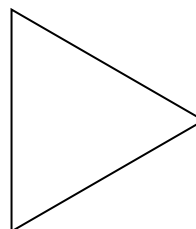
4)



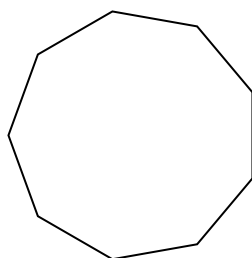
5)



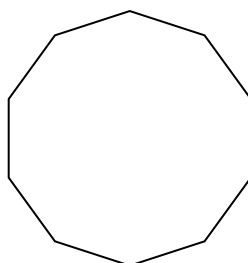
6)




7)



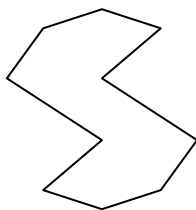
8)



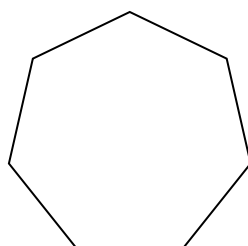
9)




10)




11)



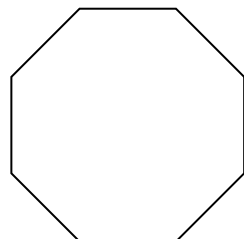
12)



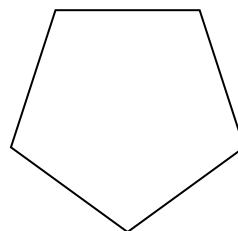
13)



14)



15)



1. _____

2. _____

3. _____

4. _____

5. _____

6. _____

7. _____

8. _____

9. _____

10. _____

11. _____

12. _____

13. _____

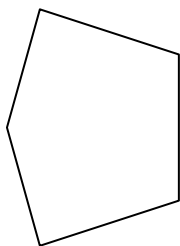
14. _____

15. _____

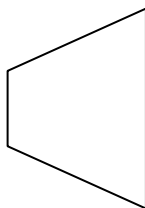


Determina se le forme rappresentate sono regolari o irregolari.

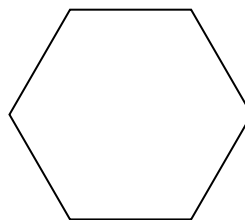
1)



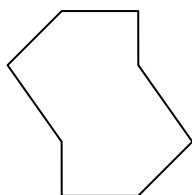
2)




3)



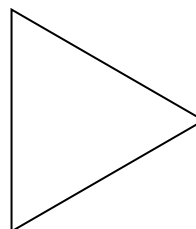
4)



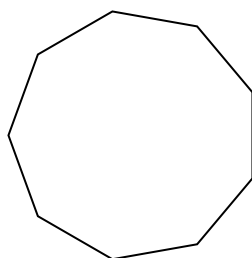
5)



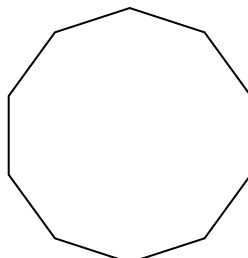
6)




7)



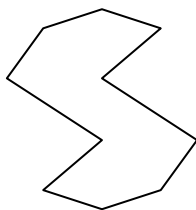
8)



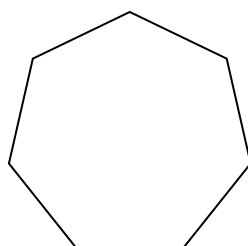
9)



10)




11)



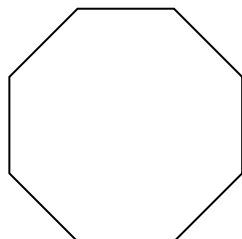
12)



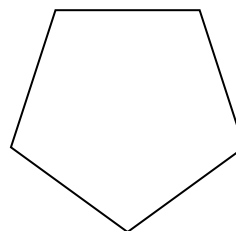
13)



14)



15)

**Risposte**1. **Irregolare**2. **Irregolare**3. **Regolare**4. **Irregolare**5. **Regolare**6. **Regolare**7. **Regolare**8. **Regolare**9. **Irregolare**10. **Irregolare**11. **Regolare**12. **Irregolare**13. **Irregolare**14. **Regolare**15. **Regolare**