



Determina se ogni triangolo è acuto (A), ottuso (O) o rettangolo (R) e se è equilatero (E), isoscele (I) o scaleno (S).

Acute Triangle:

All angles are less than 90° .

Obtuse Triangle:

One angle is greater than 90° .

Right Triangle:

One angle is 90° .

Equilateral Triangle:

3 equal sides. 3 equal angles.

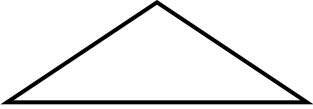
Isosceles Triangle:

2 equal sides. 2 equal angles.


Scalene Triangle:

No equal sides. No equal angles.

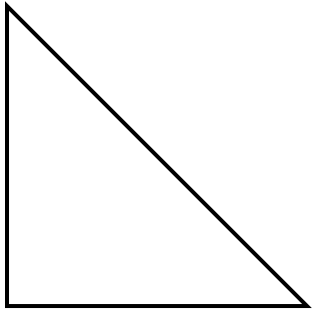
1)



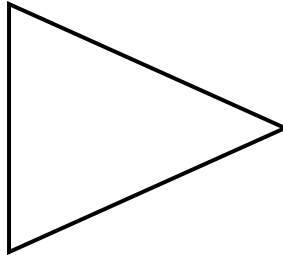
2)



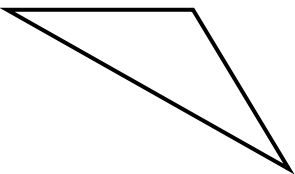
3)



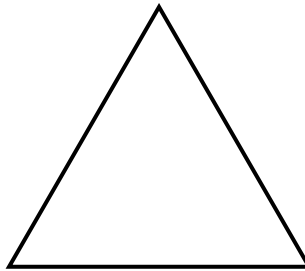
4)



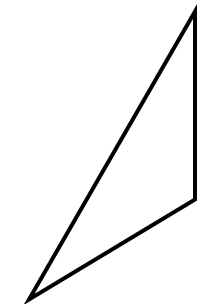
5)



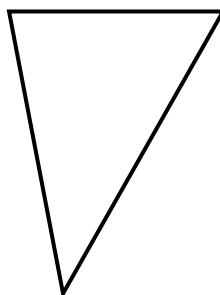
6)



7)



8)



Risposte

1. _____
2. _____
3. _____
4. _____
5. _____
6. _____
7. _____
8. _____



Determina se ogni triangolo è acuto (A), ottuso (O) o rettangolo (R) e se è equilatero (E), isoscele (I) o scaleno (S).

Acute Triangle:

All angles are less than 90° .

Obtuse Triangle:

One angle is greater than 90° .

Right Triangle:

One angle is 90° .

Equilateral Triangle:

3 equal sides. 3 equal angles.

Isosceles Triangle:

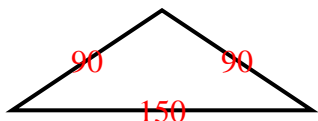
2 equal sides. 2 equal angles.

Scalene Triangle:

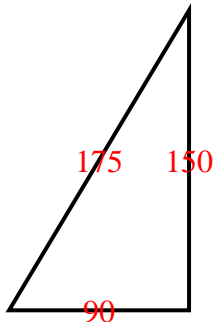
No equal sides. No equal angles.

Risposte

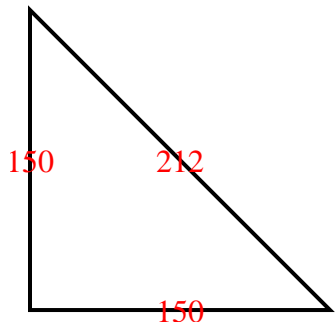
1)



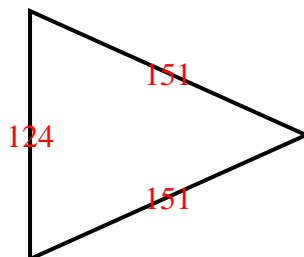
2)



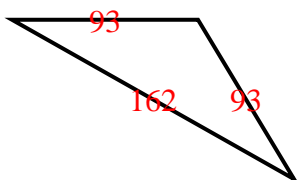
3)



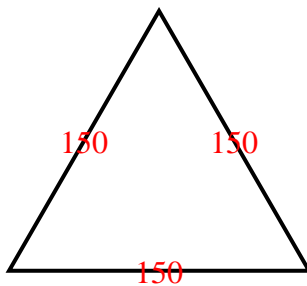
4)



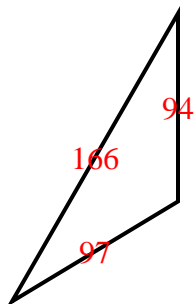
5)



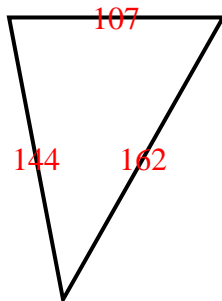
6)



7)



8)



1. **O I**
2. **R S**
3. **R I**
4. **A I**
5. **O I**
6. **A E**
7. **O S**
8. **A S**