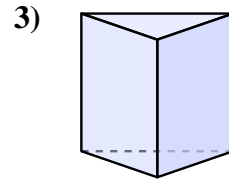
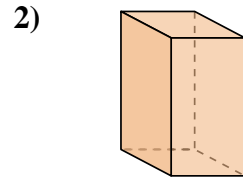
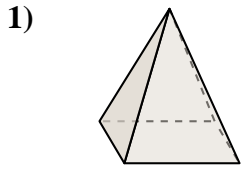




Determina quale scelta descrive CORREETTAMENTE la forma mostrata.

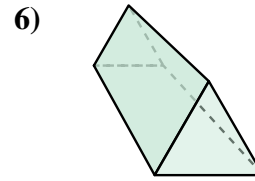
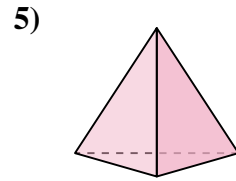
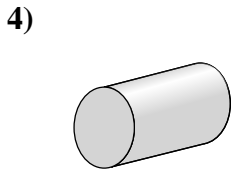
**Risposte**



- A. rectangular pyramid
- B. triangular prism
- C. rectangular prism
- D. cube

- A. cone
- B. triangular prism
- C. rectangular pyramid
- D. rectangular prism

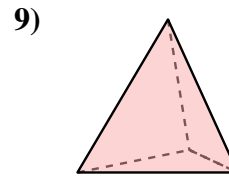
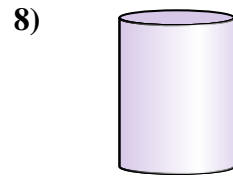
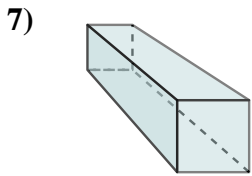
- A. cube
- B. cone
- C. triangular prism
- D. cylinder



- A. rectangular prism
- B. rectangular pyramid
- C. cylinder
- D. sphere

- A. cube
- B. triangular pyramid
- C. rectangular prism
- D. cylinder

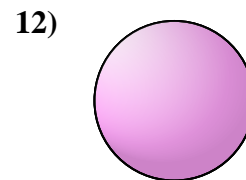
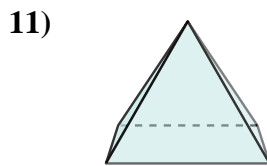
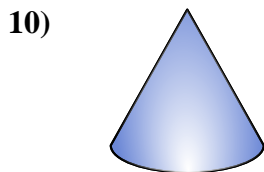
- A. cone
- B. sphere
- C. triangular prism
- D. cylinder



- A. rectangular pyramid
- B. cube
- C. rectangular prism
- D. triangular prism

- A. triangular prism
- B. cube
- C. cylinder
- D. cone

- A. cylinder
- B. cone
- C. triangular pyramid
- D. cube



- A. cylinder
- B. rectangular pyramid
- C. cone
- D. rectangular prism

- A. triangular pyramid
- B. cone
- C. rectangular prism
- D. rectangular pyramid

- A. triangular pyramid
- B. rectangular prism
- C. cone
- D. sphere

1. \_\_\_\_\_

2. \_\_\_\_\_

3. \_\_\_\_\_

4. \_\_\_\_\_

5. \_\_\_\_\_

6. \_\_\_\_\_

7. \_\_\_\_\_

8. \_\_\_\_\_

9. \_\_\_\_\_

10. \_\_\_\_\_

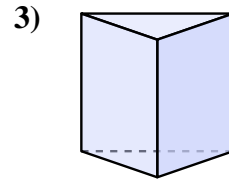
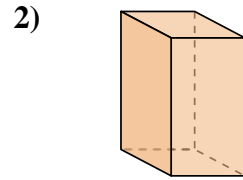
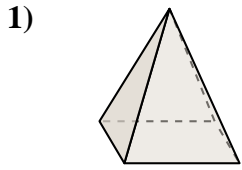
11. \_\_\_\_\_

12. \_\_\_\_\_



Determina quale scelta descrive **CORREETTAMENTE** la forma mostrata.

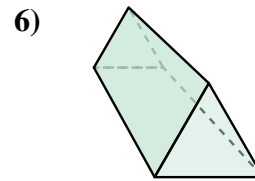
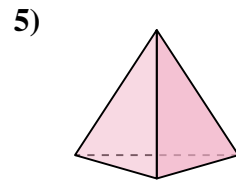
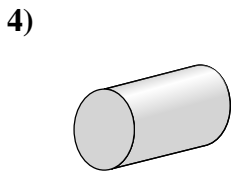
**Risposte**



- A. rectangular pyramid
- B. triangular prism
- C. rectangular prism
- D. cube

- A. cone
- B. triangular prism
- C. rectangular pyramid
- D. rectangular prism

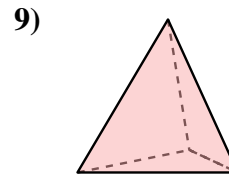
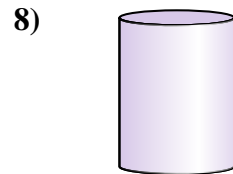
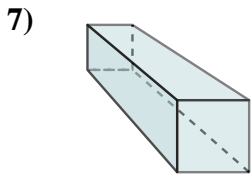
- A. cube
- B. cone
- C. triangular prism
- D. cylinder



- A. rectangular prism
- B. rectangular pyramid
- C. cylinder
- D. sphere

- A. cube
- B. triangular pyramid
- C. rectangular prism
- D. cylinder

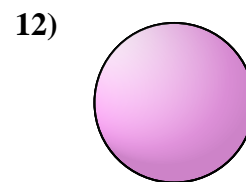
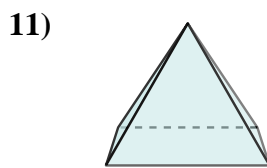
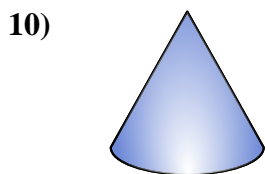
- A. cone
- B. sphere
- C. triangular prism
- D. cylinder



- A. rectangular pyramid
- B. cube
- C. rectangular prism
- D. triangular prism

- A. triangular prism
- B. cube
- C. cylinder
- D. cone

- A. cylinder
- B. cone
- C. triangular pyramid
- D. cube



- A. cylinder
- B. rectangular pyramid
- C. cone
- D. rectangular prism

- A. triangular pyramid
- B. cone
- C. rectangular prism
- D. rectangular pyramid

- A. triangular pyramid
- B. rectangular prism
- C. cone
- D. sphere

- 1.   **A**
- 2.   **D**
- 3.   **C**
- 4.   **C**
- 5.   **B**
- 6.   **C**
- 7.   **C**
- 8.   **C**
- 9.   **C**
- 10.   **C**
- 11.   **D**
- 12.   **D**