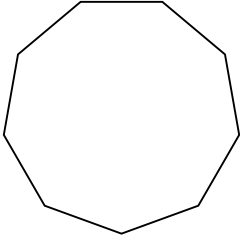


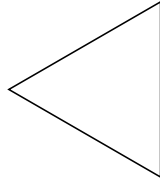


Identifica il tipo di forma rappresentata.

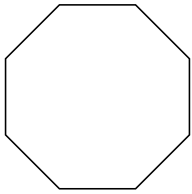
1)



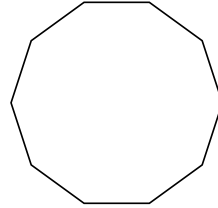
2)




3)



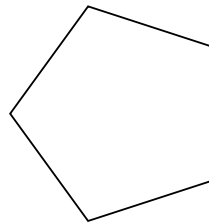
4)



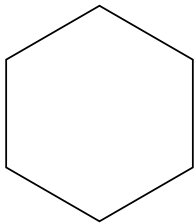
5)



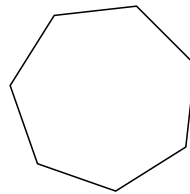
6)



7)



8)



Risposte

1. _____

2. _____

3. _____

4. _____

5. _____

6. _____

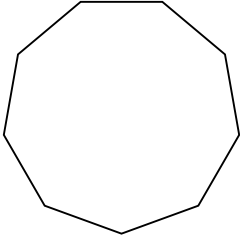
7. _____

8. _____

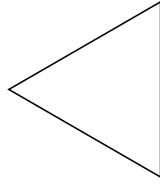


Identifica il tipo di forma rappresentata.

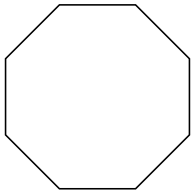
1)



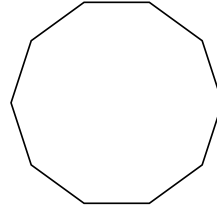
2)




3)



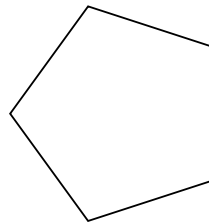
4)



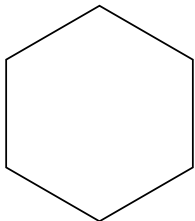
5)



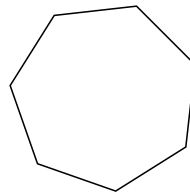
6)



7)



8)



Risposte

1. **Ennagono**

2. **triangle**

3. **Ottagono**

4. **Decagono**

5. **Quadrilatero**

6. **Pentagono**

7. **Esagono**

8. **Ettagono**