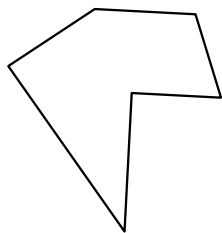





Identifica il tipo di forma rappresentata.

**Risposte**

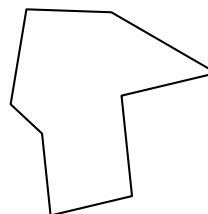
1)



2)

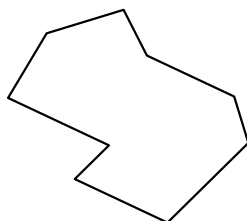


3)

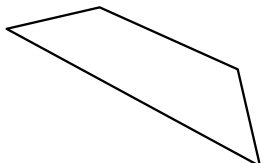


1. \_\_\_\_\_

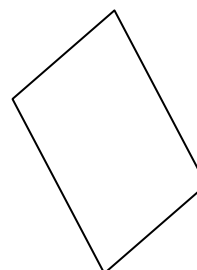
4)



5)




6)

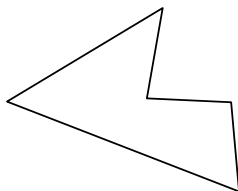


2. \_\_\_\_\_


7)



8)

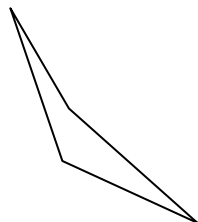


9)

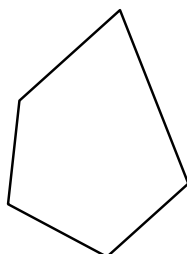


3. \_\_\_\_\_

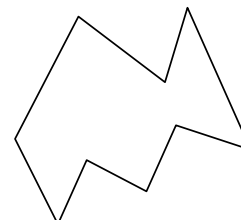
10)



11)

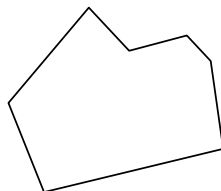


12)

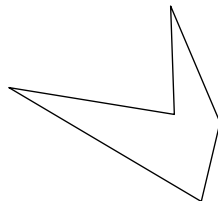


4. \_\_\_\_\_

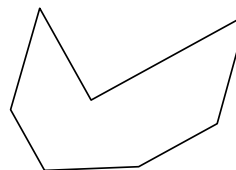
13)



14)

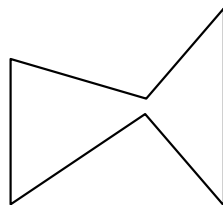


15)

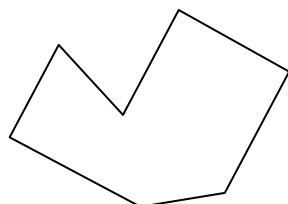


5. \_\_\_\_\_

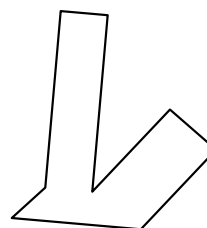
16)



17)



18)



6. \_\_\_\_\_

7. \_\_\_\_\_

8. \_\_\_\_\_

9. \_\_\_\_\_

10. \_\_\_\_\_

11. \_\_\_\_\_

12. \_\_\_\_\_

13. \_\_\_\_\_

14. \_\_\_\_\_

15. \_\_\_\_\_

16. \_\_\_\_\_

17. \_\_\_\_\_

18. \_\_\_\_\_

19. \_\_\_\_\_

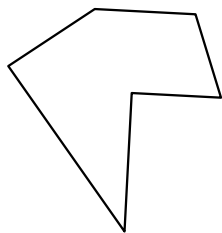
20. \_\_\_\_\_

21. \_\_\_\_\_




Identifica il tipo di forma rappresentata.

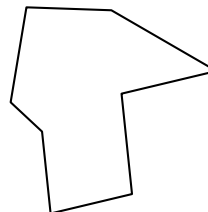
1)



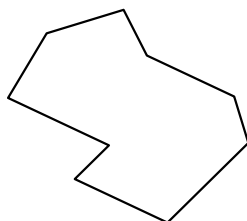
2)



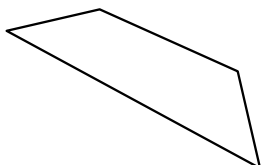
3)



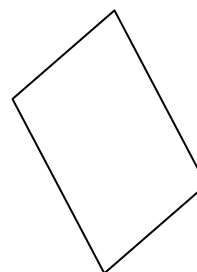
4)




5)



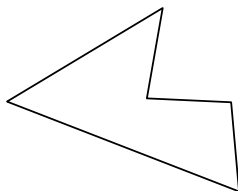
6)




7)



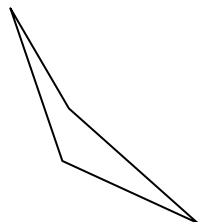
8)



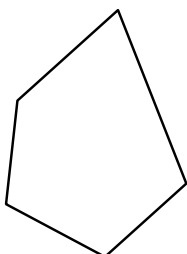
9)



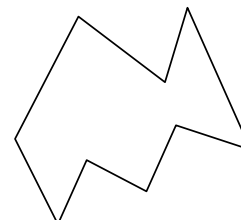
10)



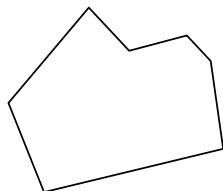
11)



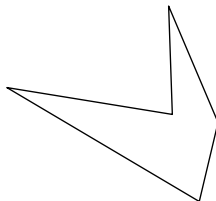
12)



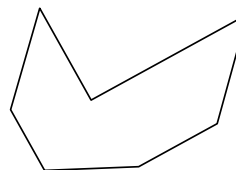
13)



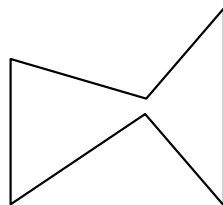
14)



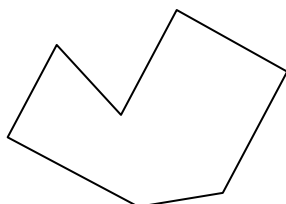
15)



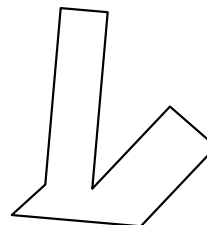
16)



17)



18)



**Risposte**

1. Esagono

2. Ennagono

3. Ottagono

4. Ennagono

5. Quadrilatero

6. Quadrilatero

7. Quadrilatero

8. Pentagono

9. Ettagono

10. Quadrilatero

11. Pentagono

12. Ennagono

13. Ettagono

14. Pentagono

15. Ettagono

16. Esagono

17. Ettagono

18. Ottagono

19. Ottagono

20. Ettagono

21. Ottagono