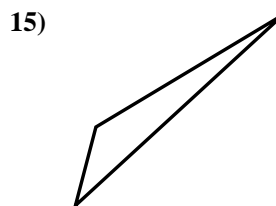
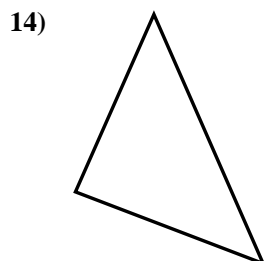
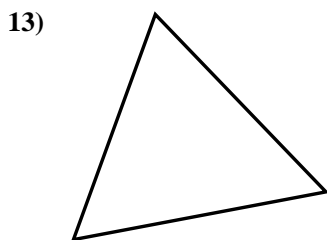
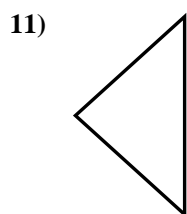
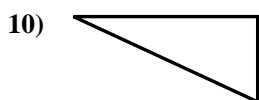
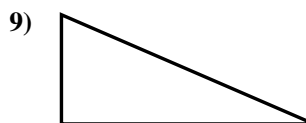
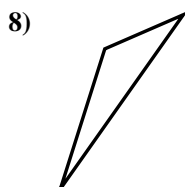

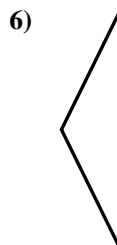

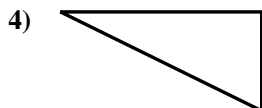
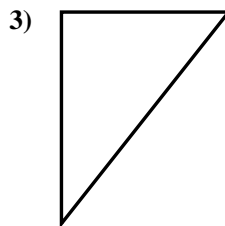





Determina se i triangoli mostrati sono rettangoli oppure no.

Risposte

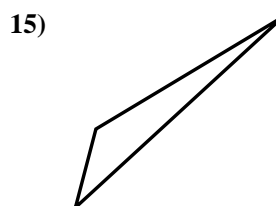
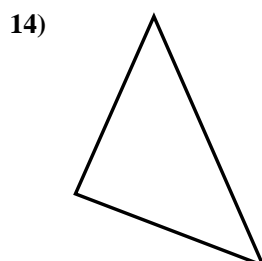
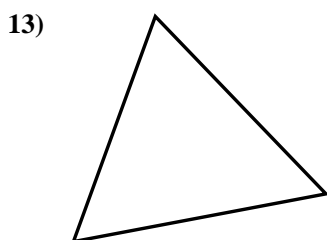
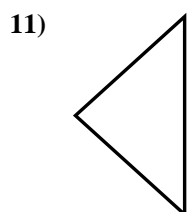
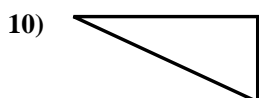
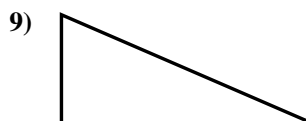
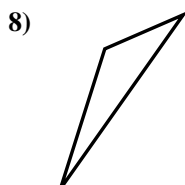

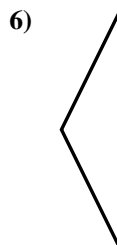

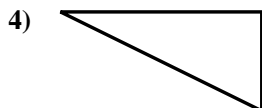
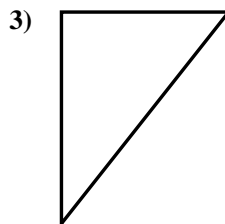



- 1. _____
- 2. _____
- 3. _____
- 4. _____
- 5. _____
- 6. _____
- 7. _____
- 8. _____
- 9. _____
- 10. _____
- 11. _____
- 12. _____
- 13. _____
- 14. _____
- 15. _____



Determina se i triangoli mostrati sono rettangoli oppure no.

Risposte



1. si

2. si

3. si

4. si

5. no

6. no

7. no

8. no

9. si

10. si

11. no

12. si

13. no

14. si

15. no