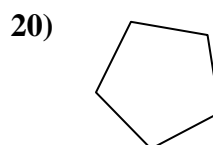
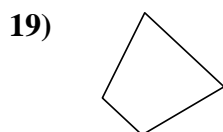
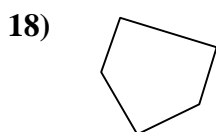
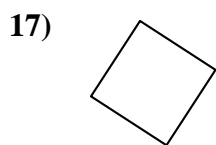
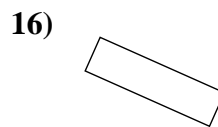
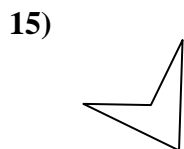
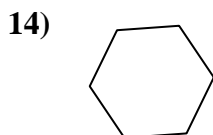
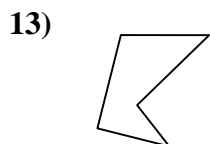
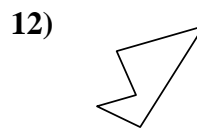
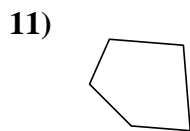
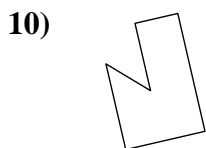
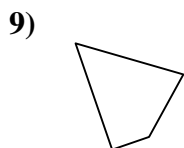
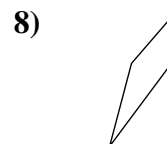
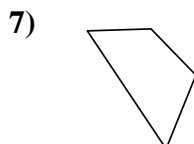
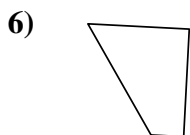
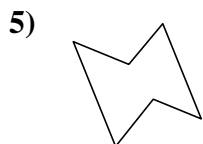
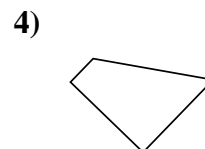
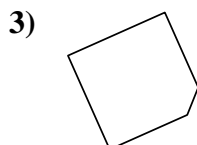
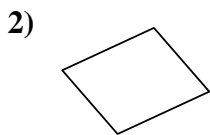





Determina se le forme mostrate sono quadrilateri (si) oppure no (no).



**Risposte**

1. \_\_\_\_\_

2. \_\_\_\_\_

3. \_\_\_\_\_

4. \_\_\_\_\_

5. \_\_\_\_\_

6. \_\_\_\_\_

7. \_\_\_\_\_

8. \_\_\_\_\_

9. \_\_\_\_\_

10. \_\_\_\_\_

11. \_\_\_\_\_

12. \_\_\_\_\_

13. \_\_\_\_\_

14. \_\_\_\_\_

15. \_\_\_\_\_

16. \_\_\_\_\_

17. \_\_\_\_\_

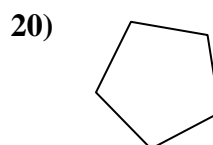
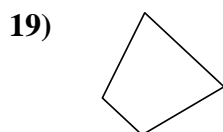
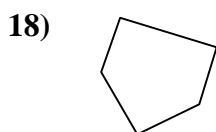
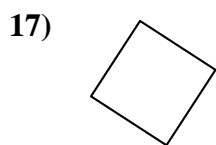
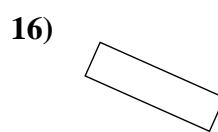
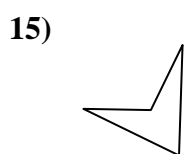
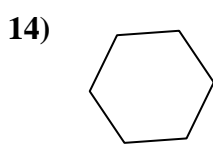
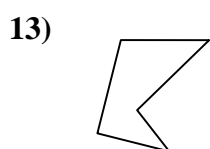
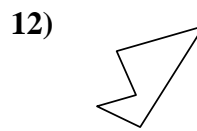
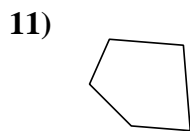
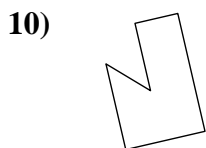
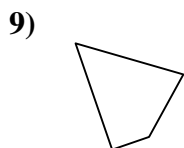
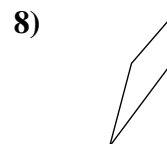
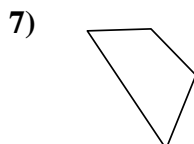
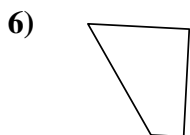
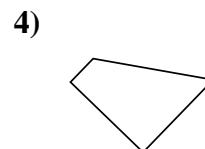
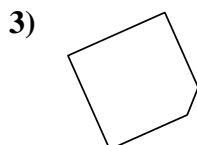
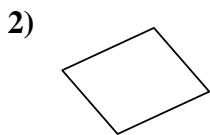

18. \_\_\_\_\_

19. \_\_\_\_\_

20. \_\_\_\_\_



Determina se le forme mostrate sono quadrilateri (si) oppure no (no).



**Risposte**

1. no

2. si

3. no

4. si

5. no

6. si

7. si

8. si

9. si

10. no

11. no

12. no

13. no

14. no

15. si

16. si

17. si

18. no

19. si

20. no