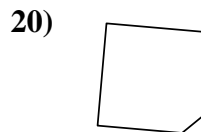
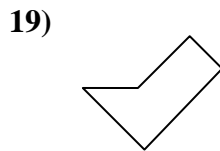
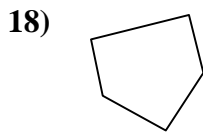
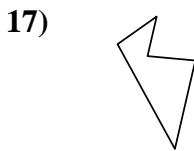
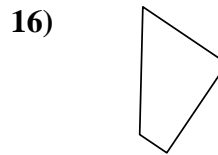
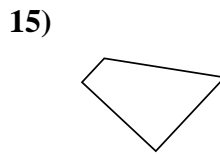
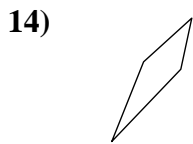
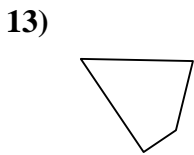
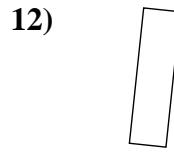
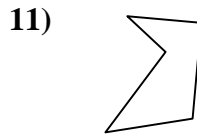
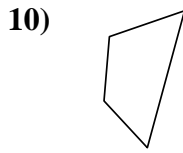
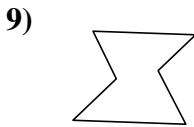
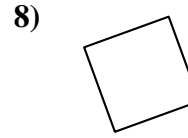
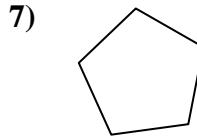
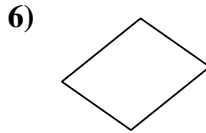
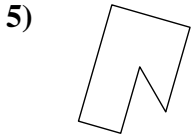
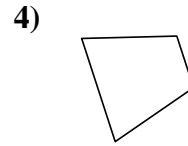
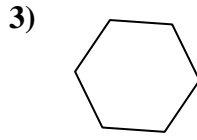
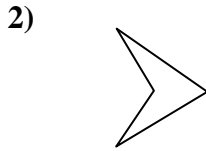
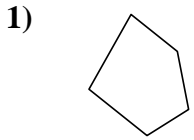




Determina se le forme mostrate sono quadrilateri (si) oppure no (no).

Risposte



1. _____

2. _____

3. _____

4. _____

5. _____

6. _____

7. _____

8. _____

9. _____

10. _____

11. _____

12. _____

13. _____

14. _____

15. _____

16. _____

17. _____

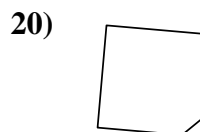
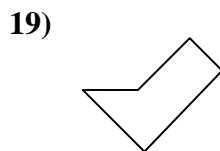
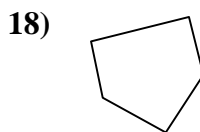
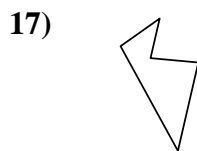
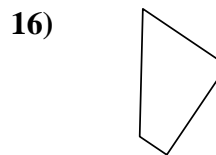
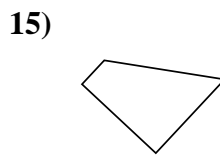
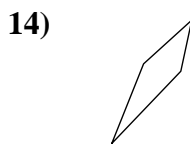
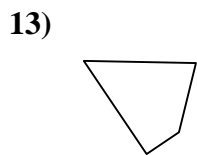
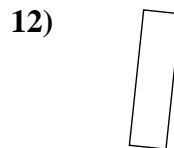
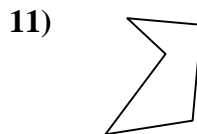
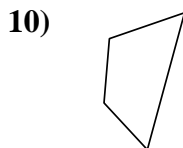
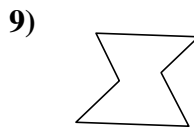
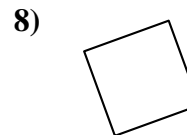
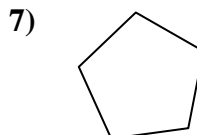
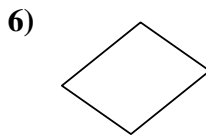
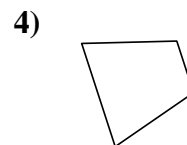
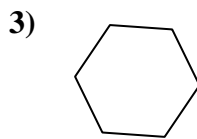
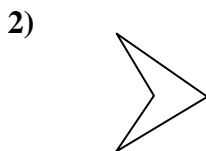
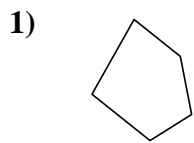
18. _____

19. _____

20. _____



Determina se le forme mostrate sono quadrilateri (si) oppure no (no).



Risposte

1. **no**

2. **si**

3. **no**

4. **si**

5. **no**

6. **si**

7. **no**

8. **si**

9. **no**

10. **si**

11. **no**

12. **si**

13. **si**

14. **si**

15. **si**

16. **si**

17. **no**

18. **no**

19. **no**

20. **no**