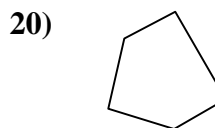
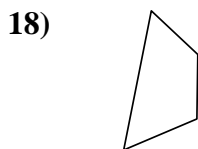
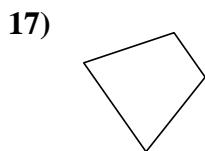
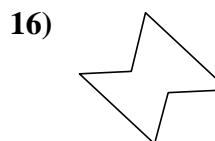
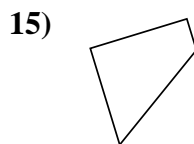
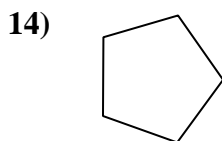

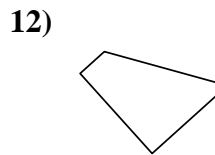
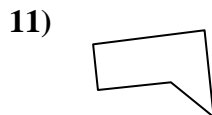
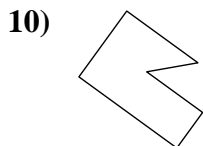
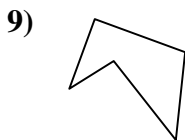
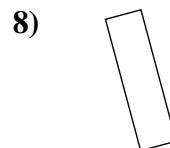
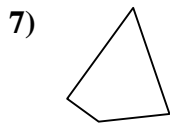
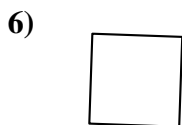
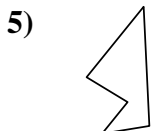
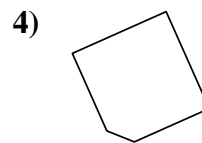
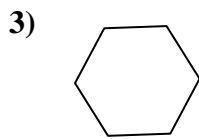
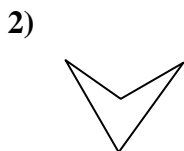
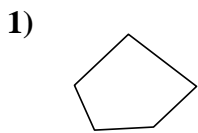




Determina se le forme mostrate sono quadrilateri (si) oppure no (no).

Risposte



1. _____

2. _____

3. _____

4. _____

5. _____

6. _____

7. _____

8. _____

9. _____

10. _____

11. _____

12. _____

13. _____

14. _____

15. _____

16. _____

17. _____

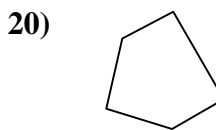
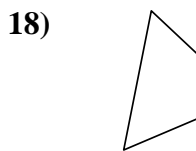
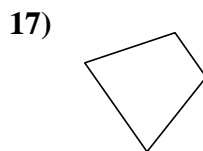
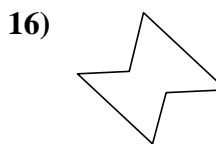
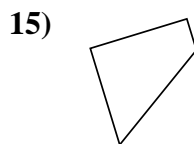
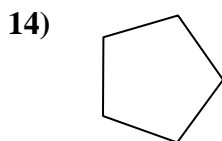

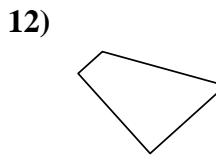
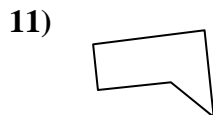
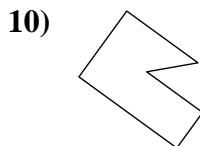
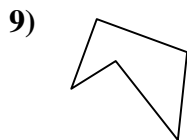
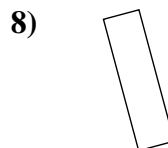
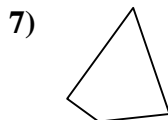
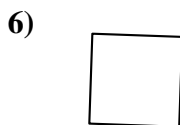
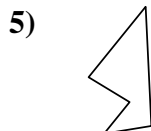
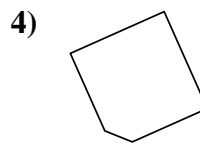
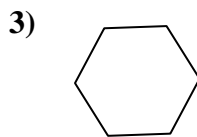
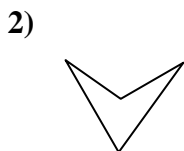
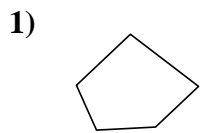
18. _____

19. _____

20. _____



Determina se le forme mostrate sono quadrilateri (si) oppure no (no).



Risposte

1. no

2. si

3. no

4. no

5. no

6. si

7. si

8. si

9. no

10. no

11. no

12. si

13. si

14. no

15. si

16. no

17. si

18. si

19. si

20. no