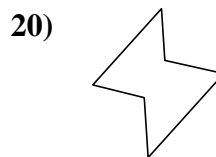
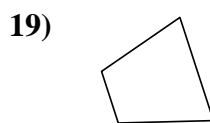
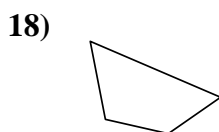
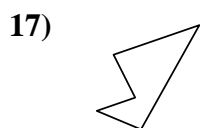
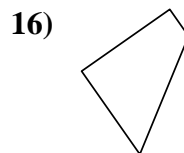
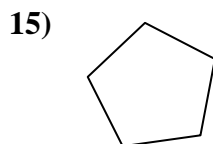
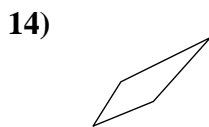
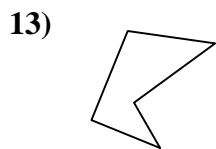
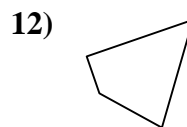
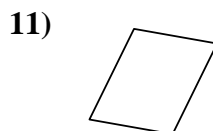
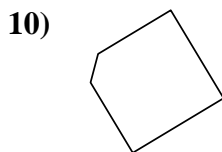
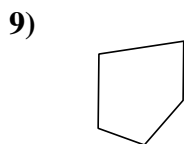
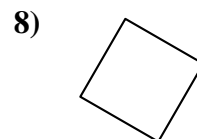
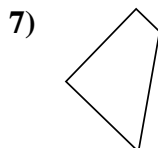
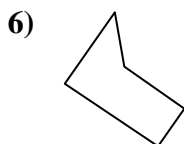
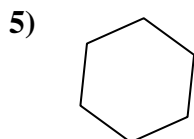

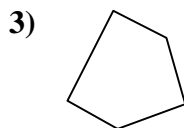
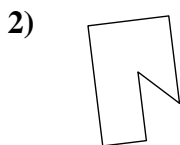
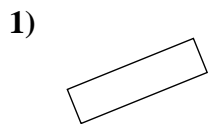




Determina se le forme mostrate sono quadrilateri (si) oppure no (no).

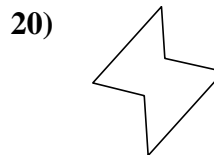
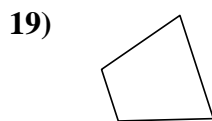
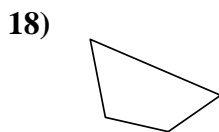
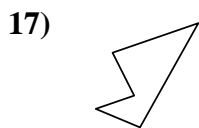
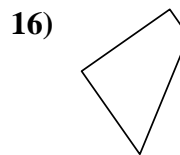
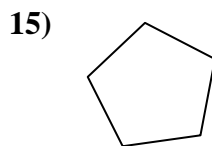
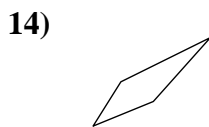
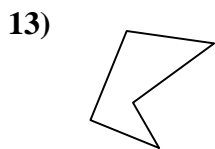
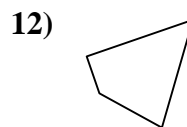
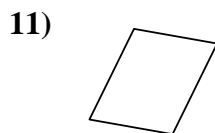
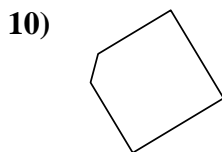
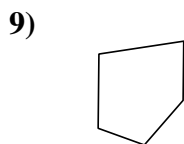
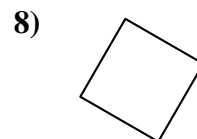
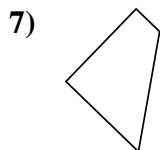
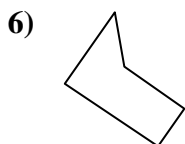
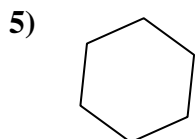
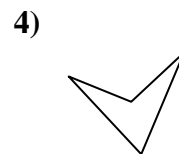
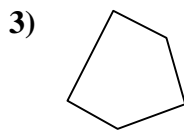

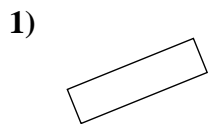


Risposte

- 1. _____
- 2. _____
- 3. _____
- 4. _____
- 5. _____
- 6. _____
- 7. _____
- 8. _____
- 9. _____
- 10. _____
- 11. _____
- 12. _____
- 13. _____
- 14. _____
- 15. _____
- 16. _____
- 17. _____
- 18. _____
- 19. _____
- 20. _____



Determina se le forme mostrate sono quadrilateri (si) oppure no (no).



Risposte

1. si

2. no

3. no

4. si

5. no

6. no

7. si

8. si

9. no

10. no

11. si

12. si

13. no

14. si

15. no

16. si

17. no

18. si

19. si

20. no