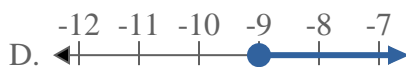
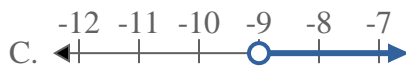
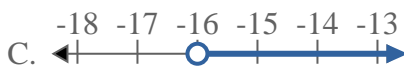
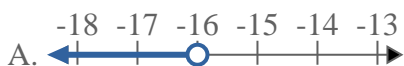
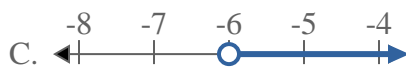
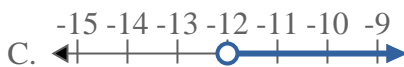
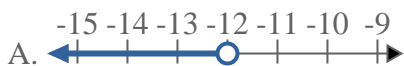
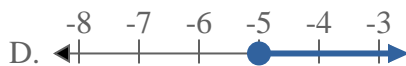
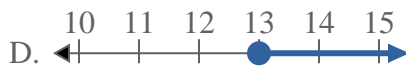
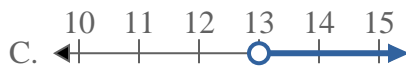
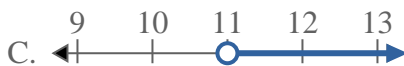


**Risolvi ogni problema.****Risposte**1) Quale opzione rappresenta correttamente $X < -9$ 2) Quale opzione rappresenta correttamente $X \leq -16$ 3) Quale opzione rappresenta correttamente $X \geq -6$ 4) Quale opzione rappresenta correttamente $X > -12$ 5) Quale opzione rappresenta correttamente $X \leq -5$ 6) Quale opzione rappresenta correttamente $X < -10$ 7) Quale opzione rappresenta correttamente $X > 13$ 8) Quale opzione rappresenta correttamente $X < 11$ 

1. _____

2. _____

3. _____

4. _____

5. _____

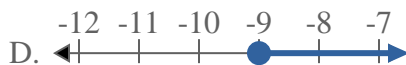
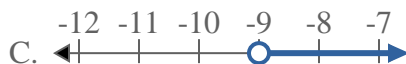
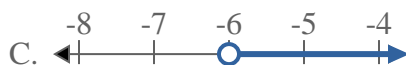
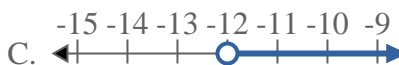
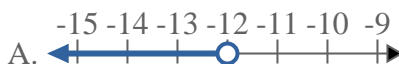
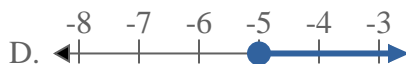
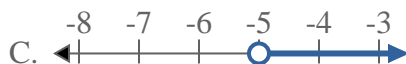
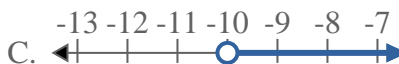
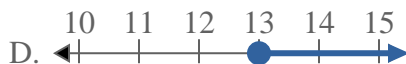
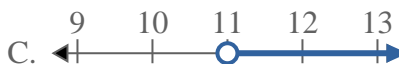
6. _____

7. _____

8. _____



Risolvi ogni problema.

Risposte1) Quale opzione rappresenta correttamente $X < -9$ 2) Quale opzione rappresenta correttamente $X \leq -16$ 3) Quale opzione rappresenta correttamente $X \geq -6$ 4) Quale opzione rappresenta correttamente $X > -12$ 5) Quale opzione rappresenta correttamente $X \leq -5$ 6) Quale opzione rappresenta correttamente $X < -10$ 7) Quale opzione rappresenta correttamente $X > 13$ 8) Quale opzione rappresenta correttamente $X < 11$ 1. **A** 2. **B** 3. **D** 4. **C** 5. **B** 6. **A** 7. **C** 8. **A**