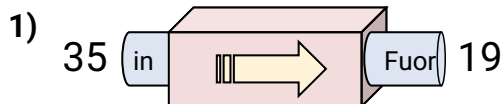
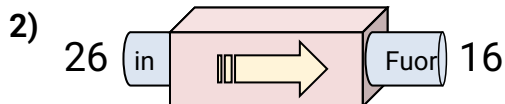
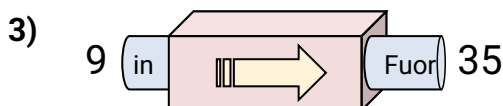


**Determina quale regola viene usata nelle seguenti funzioni.****Risposte**

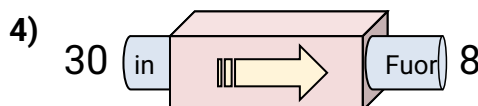
- A. Aggiungi 14
- B. Sottrai 16
- C. Sottrai 15
- D. Sottrai 19



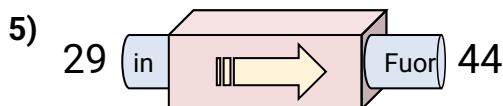
- A. Sottrai 10
- B. Aggiungi 14
- C. Sottrai 14
- D. Sottrai 12



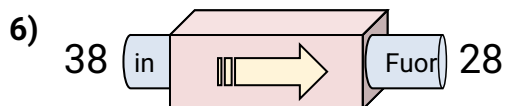
- A. Aggiungi 21
- B. Sottrai 30
- C. Aggiungi 29
- D. Aggiungi 26



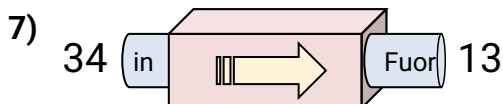
- A. Sottrai 22
- B. Sottrai 25
- C. Aggiungi 26
- D. Sottrai 18



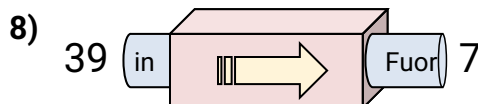
- A. Aggiungi 13
- B. Sottrai 18
- C. Sottrai 14
- D. Aggiungi 15



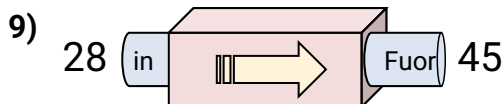
- A. Sottrai 10
- B. Sottrai 12
- C. Aggiungi 9
- D. Sottrai 8



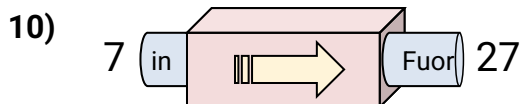
- A. Sottrai 21
- B. Sottrai 20
- C. Sottrai 26
- D. Aggiungi 16



- A. Sottrai 28
- B. Sottrai 32
- C. Aggiungi 34
- D. Aggiungi 27



- A. Aggiungi 17
- B. Sottrai 18
- C. Aggiungi 22
- D. Aggiungi 14

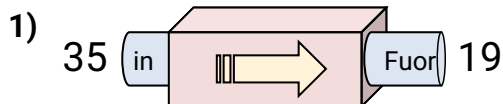


- A. Aggiungi 18
- B. Sottrai 15
- C. Aggiungi 24
- D. Aggiungi 20

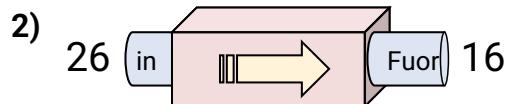
- 1. \_\_\_\_\_
- 2. \_\_\_\_\_
- 3. \_\_\_\_\_
- 4. \_\_\_\_\_
- 5. \_\_\_\_\_
- 6. \_\_\_\_\_
- 7. \_\_\_\_\_
- 8. \_\_\_\_\_
- 9. \_\_\_\_\_
- 10. \_\_\_\_\_



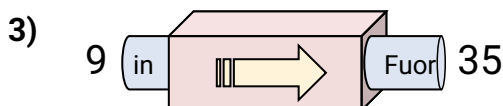
Determina quale regola viene usata nelle seguenti funzioni.

**Risposte**

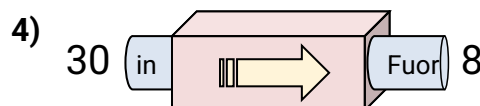
- A. Aggiungi 14
- B. Sottrai 16
- C. Sottrai 15
- D. Sottrai 19



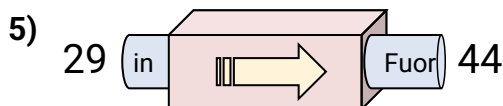
- A. Sottrai 10
- B. Aggiungi 14
- C. Sottrai 14
- D. Sottrai 12



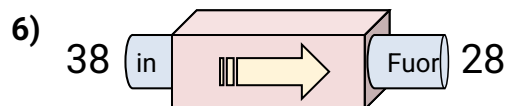
- A. Aggiungi 21
- B. Sottrai 30
- C. Aggiungi 29
- D. Aggiungi 26



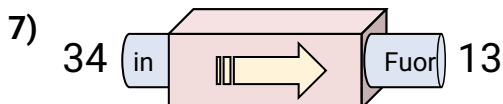
- A. Sottrai 22
- B. Sottrai 25
- C. Aggiungi 26
- D. Sottrai 18



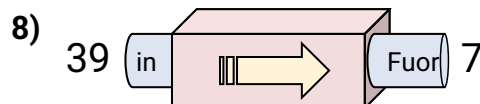
- A. Aggiungi 13
- B. Sottrai 18
- C. Sottrai 14
- D. Aggiungi 15



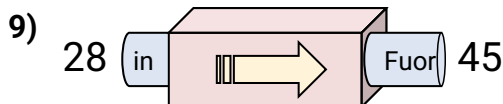
- A. Sottrai 10
- B. Sottrai 12
- C. Aggiungi 9
- D. Sottrai 8



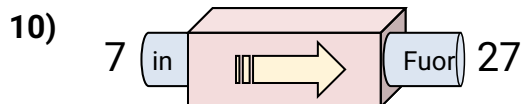
- A. Sottrai 21
- B. Sottrai 20
- C. Sottrai 26
- D. Aggiungi 16



- A. Sottrai 28
- B. Sottrai 32
- C. Aggiungi 34
- D. Aggiungi 27



- A. Aggiungi 17
- B. Sottrai 18
- C. Aggiungi 22
- D. Aggiungi 14



- A. Aggiungi 18
- B. Sottrai 15
- C. Aggiungi 24
- D. Aggiungi 20

- 1. **B**
- 2. **A**
- 3. **D**
- 4. **A**
- 5. **D**
- 6. **A**
- 7. **A**
- 8. **B**
- 9. **A**
- 10. **D**