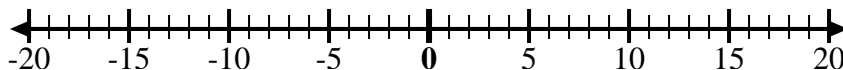
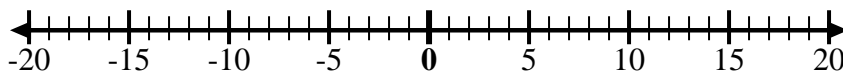
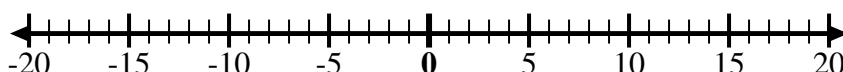
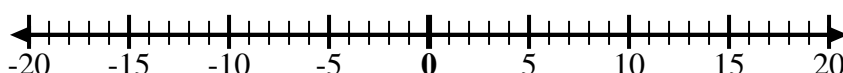
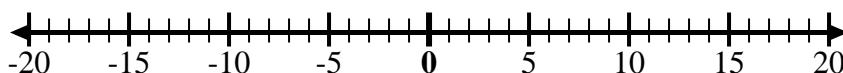
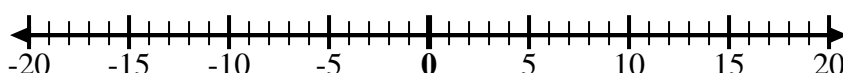
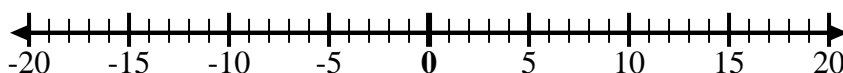
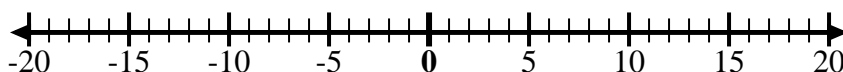
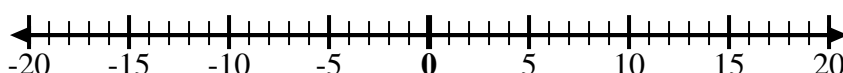
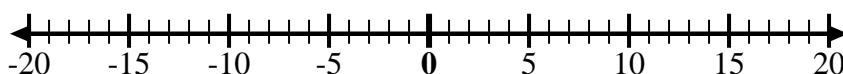




Usa le linee dei numeri per mostrare ogni espressione e risolvere.

Es) Inizia da -9 e
aggiungi 51) Inizia da -10 e
aggiungi 142) Inizia da 3 e
aggiungi -103) Inizia da 7 e
aggiungi -64) Inizia da -8 e
aggiungi -25) Inizia da 5 e
aggiungi -96) Inizia da -5 e
aggiungi 47) Inizia da -6 e
aggiungi 98) Inizia da -4 e
aggiungi 149) Inizia da -4 e
aggiungi -310) Inizia da -7 e
aggiungi -211) Inizia da 0 e
aggiungi -712) Inizia da -2 e
aggiungi -2**Risposte**Es. $-9 + 5 = -4$

1. _____

2. _____

3. _____

4. _____

5. _____

6. _____

7. _____

8. _____

9. _____

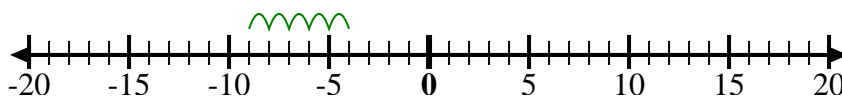
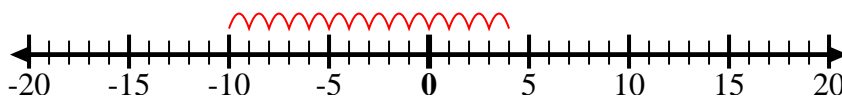
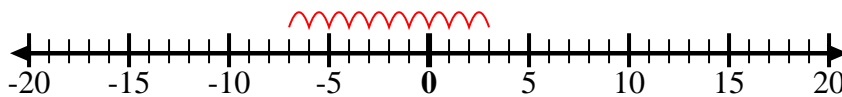
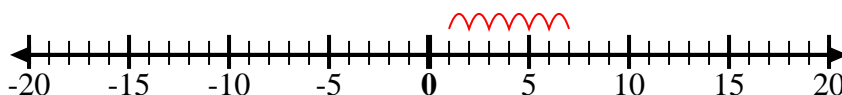
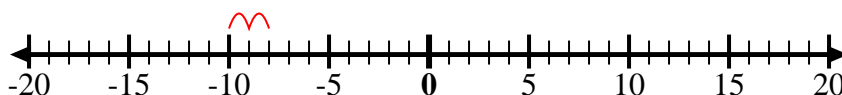
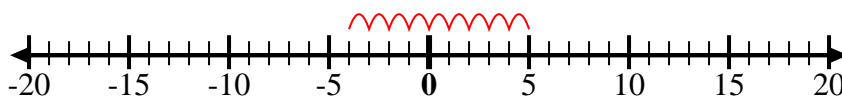
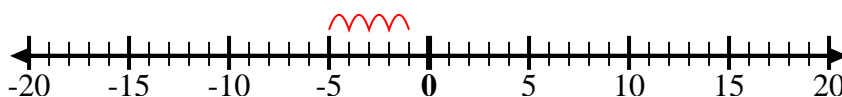
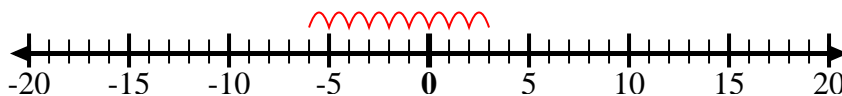
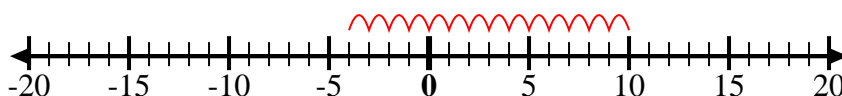
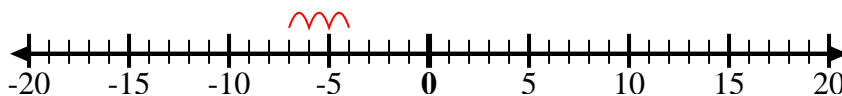
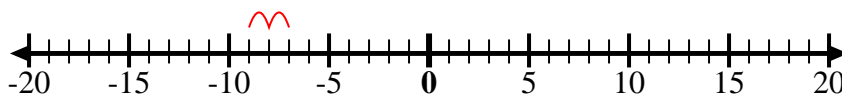
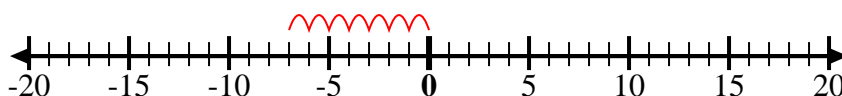
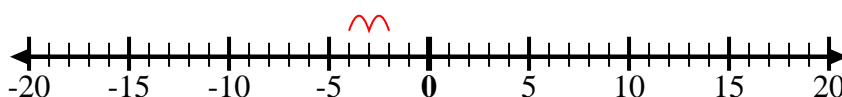
10. _____

11. _____

12. _____



Usa le linee dei numeri per mostrare ogni espressione e risolvere.

Es) Inizia da -9 e
aggiungi 51) Inizia da -10 e
aggiungi 142) Inizia da 3 e
aggiungi -103) Inizia da 7 e
aggiungi -64) Inizia da -8 e
aggiungi -25) Inizia da 5 e
aggiungi -96) Inizia da -5 e
aggiungi 47) Inizia da -6 e
aggiungi 98) Inizia da -4 e
aggiungi 149) Inizia da -4 e
aggiungi -310) Inizia da -7 e
aggiungi -211) Inizia da 0 e
aggiungi -712) Inizia da -2 e
aggiungi -2**Risposte**

Es. $-9 + 5 = -4$

1. $-10 + 14 = 4$

2. $3 + -10 = -7$

3. $7 + -6 = 1$

4. $-8 + -2 = -10$

5. $5 + -9 = -4$

6. $-5 + 4 = -1$

7. $-6 + 9 = 3$

8. $-4 + 14 = 10$

9. $-4 + -3 = -7$

10. $-7 + -2 = -9$

11. $0 + -7 = -7$

12. $-2 + -2 = -4$